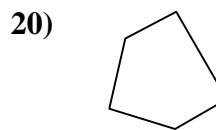
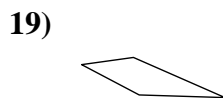
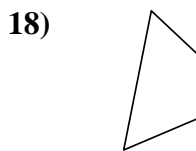
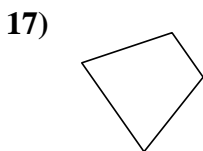
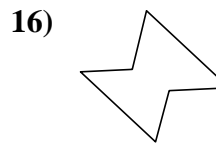
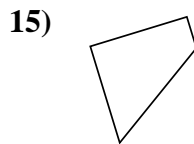
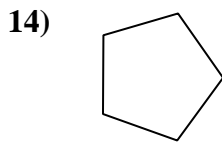

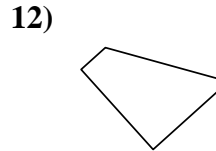
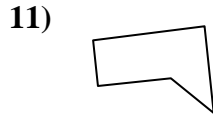
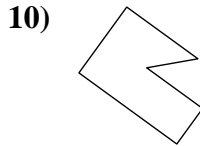
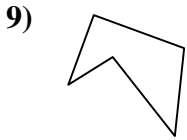
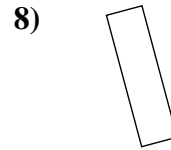
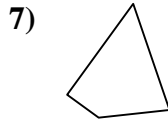
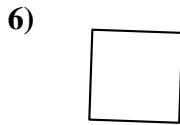
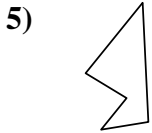
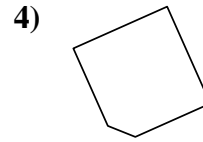
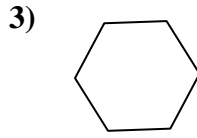
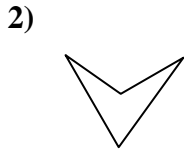
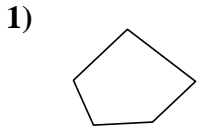




Determinar si la forma mostrada es un cuadrilátero (sí) o no (no).

Respuestas



1. _____

2. _____

3. _____

4. _____

5. _____

6. _____

7. _____

8. _____

9. _____

10. _____

11. _____

12. _____

13. _____

14. _____

15. _____

16. _____

17. _____

18. _____

19. _____

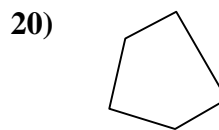
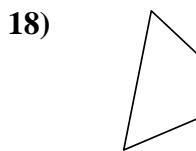
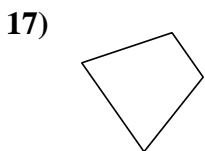
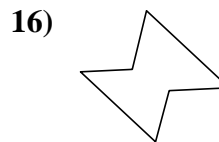
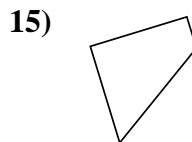
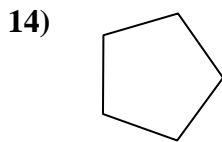
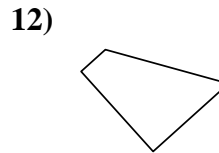
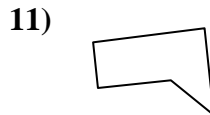
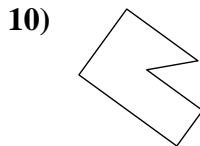
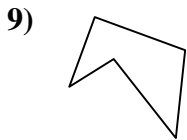
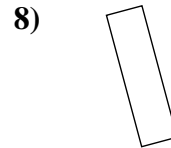
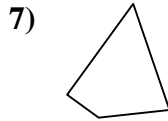
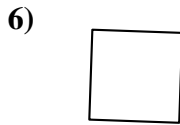
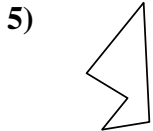
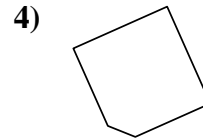
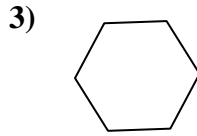
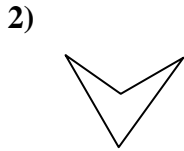
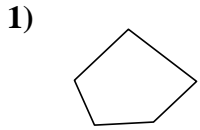
20. _____

| | | | | | | | | | | |
|-------|----|----|----|----|----|----|----|----|----|----|
| 1-10 | 95 | 90 | 85 | 80 | 75 | 70 | 65 | 60 | 55 | 50 |
| 11-20 | 45 | 40 | 35 | 30 | 25 | 20 | 15 | 10 | 5 | 0 |



Determinar si la forma mostrada es un cuadrilátero (si) o no (no).

Respuestas



- 1. no
- 2. si
- 3. no
- 4. no
- 5. no
- 6. si
- 7. si
- 8. si
- 9. no
- 10. no
- 11. no
- 12. si
- 13. si
- 14. no
- 15. si
- 16. no
- 17. si
- 18. si
- 19. si
- 20. no