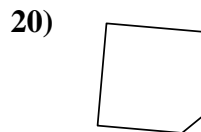
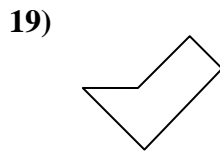
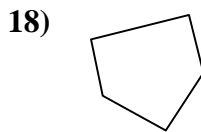
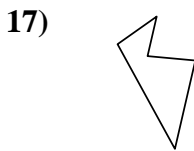
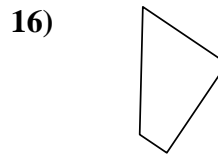
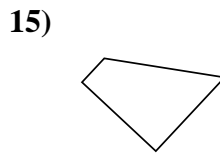
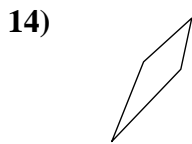
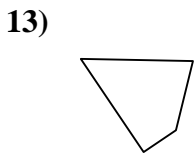
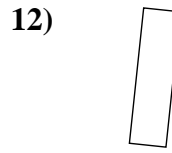
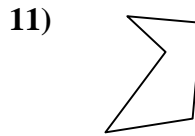
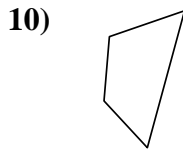
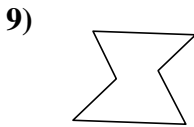
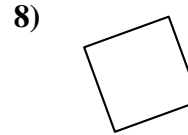
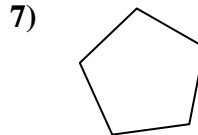
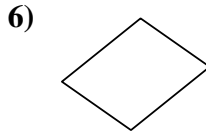
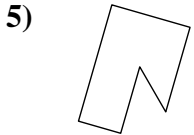
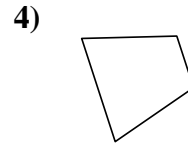
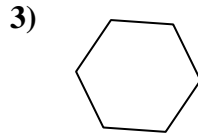
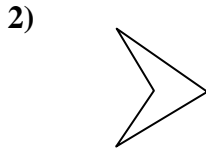
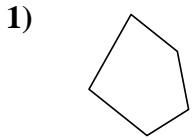




Determinar si la forma mostrada es un cuadrilátero (sí) o no (no).

Respuestas

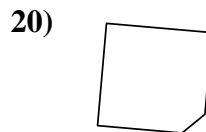
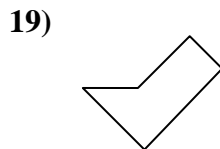
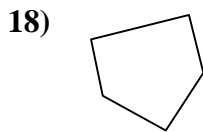
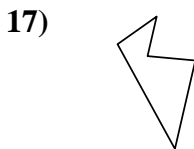
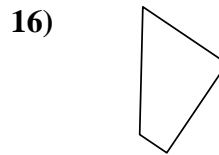
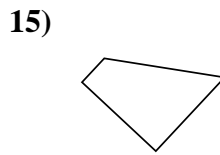
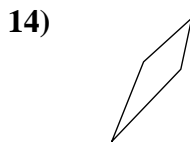
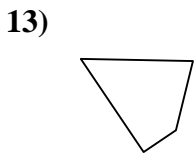
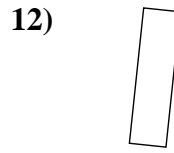
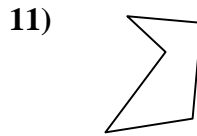
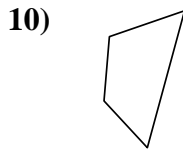
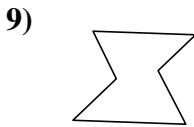
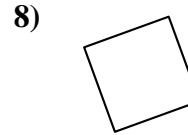
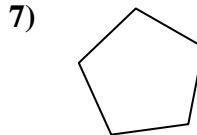
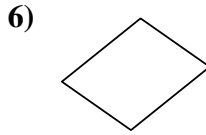
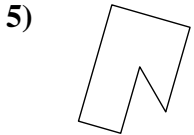
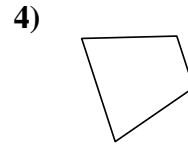
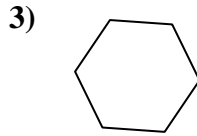
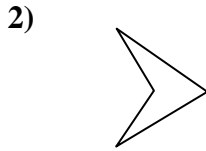
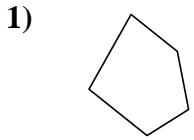


- 1. _____
- 2. _____
- 3. _____
- 4. _____
- 5. _____
- 6. _____
- 7. _____
- 8. _____
- 9. _____
- 10. _____
- 11. _____
- 12. _____
- 13. _____
- 14. _____
- 15. _____
- 16. _____
- 17. _____
- 18. _____
- 19. _____
- 20. _____



Determinar si la forma mostrada es un cuadrilátero (si) o no (no).

Respuestas



- 1. no
- 2. si
- 3. no
- 4. si
- 5. no
- 6. si
- 7. no
- 8. si
- 9. no
- 10. si
- 11. no
- 12. si
- 13. si
- 14. si
- 15. si
- 16. si
- 17. no
- 18. no
- 19. no
- 20. no