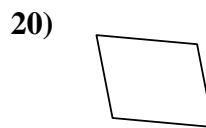
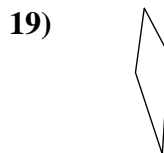
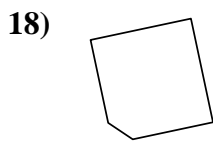
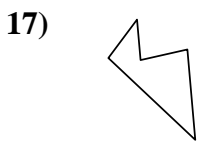
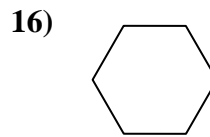
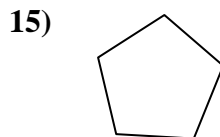
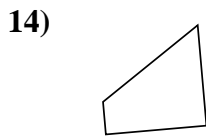
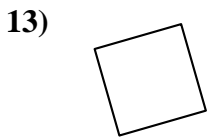
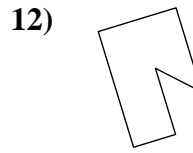
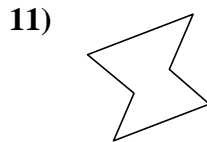
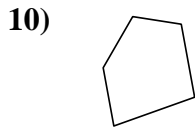
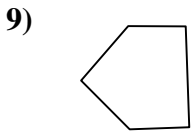
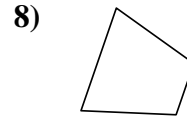
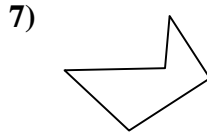
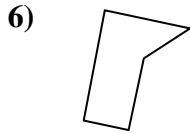
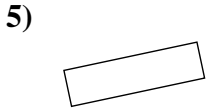
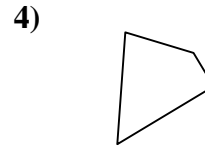
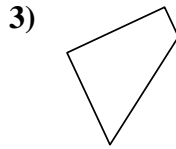
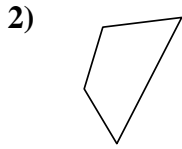





Determinar si la forma mostrada es un cuadrilátero (sí) o no (no).

Respuestas



1. _____

2. _____

3. _____

4. _____

5. _____

6. _____

7. _____

8. _____

9. _____

10. _____

11. _____

12. _____

13. _____

14. _____

15. _____

16. _____

17. _____

18. _____

19. _____

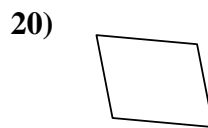
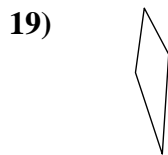
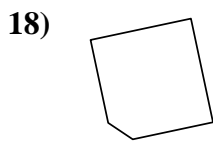
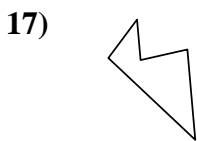
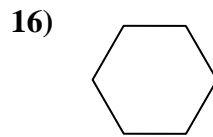
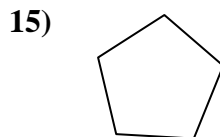
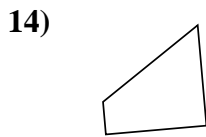
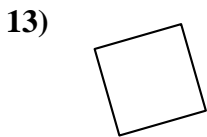
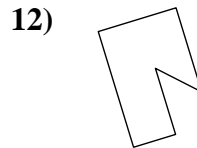
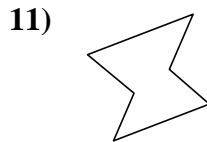
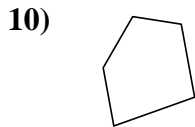
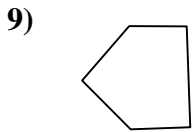
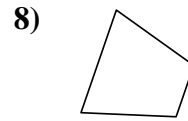
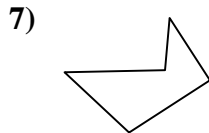
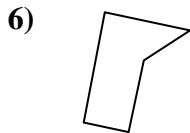

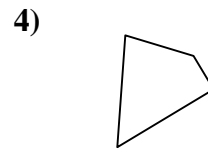
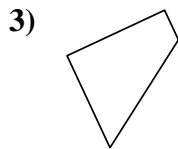
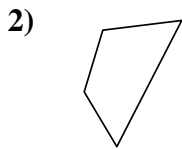
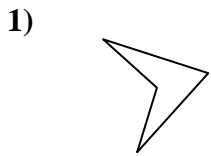
20. _____

1-10	95	90	85	80	75	70	65	60	55	50
11-20	45	40	35	30	25	20	15	10	5	0



Determinar si la forma mostrada es un cuadrilátero (si) o no (no).

Respuestas



- 1. si
- 2. si
- 3. si
- 4. si
- 5. si
- 6. no
- 7. no
- 8. si
- 9. no
- 10. no
- 11. no
- 12. no
- 13. si
- 14. si
- 15. no
- 16. no
- 17. no
- 18. no
- 19. si
- 20. si

1-10	95	90	85	80	75	70	65	60	55	50
11-20	45	40	35	30	25	20	15	10	5	0