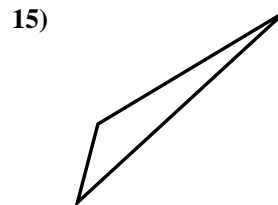
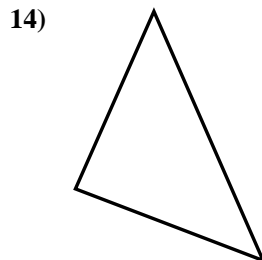
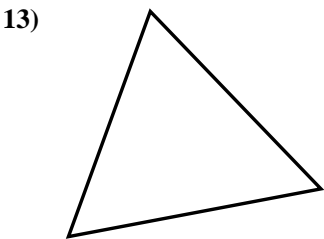

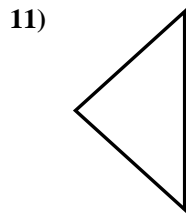
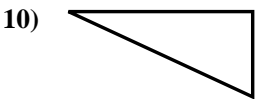
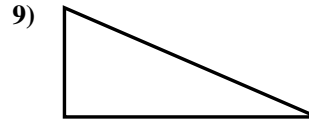
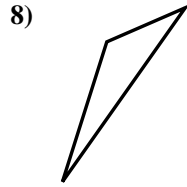

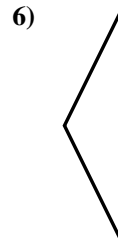
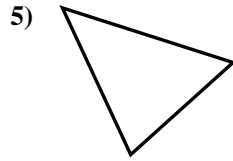
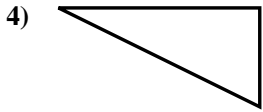
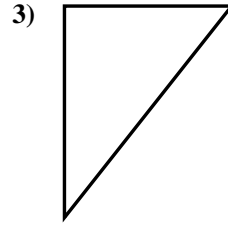





Determinar si el triángulo mostrado es un triángulo recto (sí) o no (no).

Respuestas

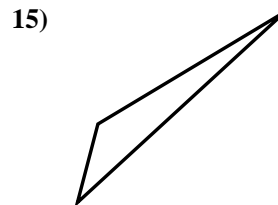
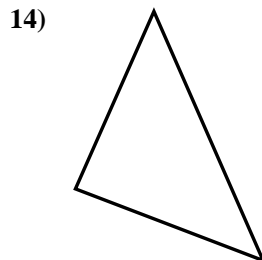
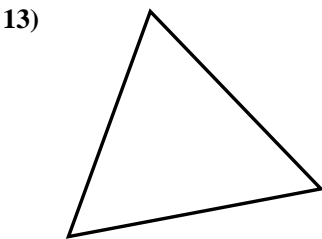

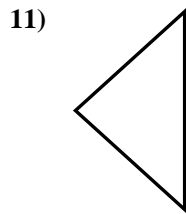
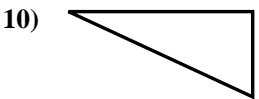
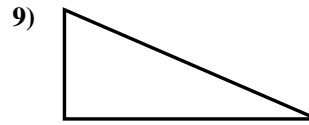
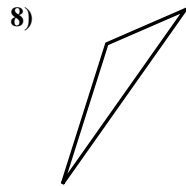

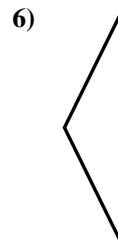
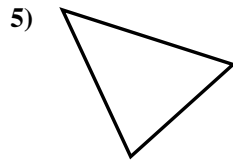
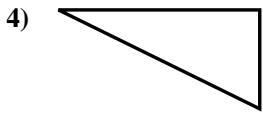
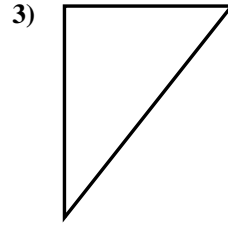



- 1. _____
- 2. _____
- 3. _____
- 4. _____
- 5. _____
- 6. _____
- 7. _____
- 8. _____
- 9. _____
- 10. _____
- 11. _____
- 12. _____
- 13. _____
- 14. _____
- 15. _____



Determinar si el triángulo mostrado es un triángulo recto (si) o no (no).

Respuestas



1. si

2. si

3. si

4. si

5. no

6. no

7. no

8. no

9. si

10. si

11. no

12. si

13. no

14. si

15. no