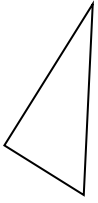


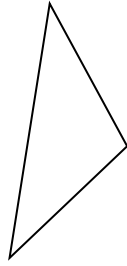


Determinar si la forma mostrada es un 'Triángulo', 'Cuadrado', 'Rectángulo', 'Hexágono' u 'Otro'.

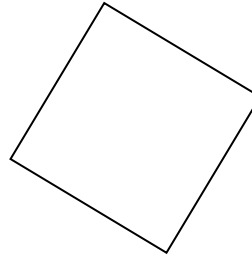
1)



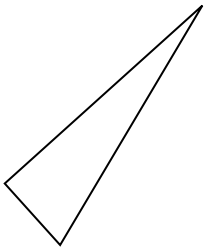
2)



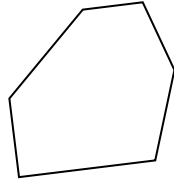
3)



4)



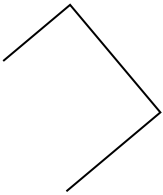
5)




6)



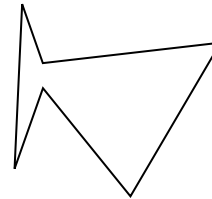
7)



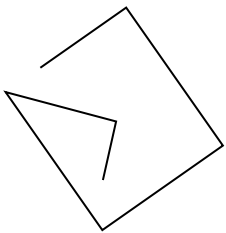
8)



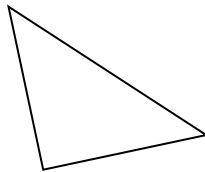
9)



10)



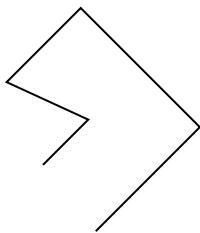
11)



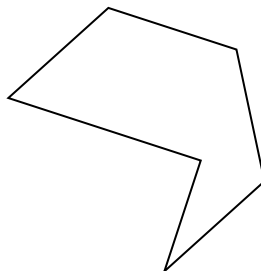
12)



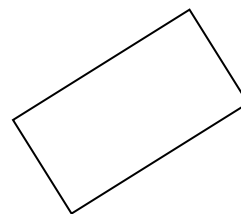
13)



14)



15)



**Respuestas**

1. \_\_\_\_\_

2. \_\_\_\_\_

3. \_\_\_\_\_

4. \_\_\_\_\_

5. \_\_\_\_\_

6. \_\_\_\_\_

7. \_\_\_\_\_

8. \_\_\_\_\_

9. \_\_\_\_\_

10. \_\_\_\_\_

11. \_\_\_\_\_

12. \_\_\_\_\_

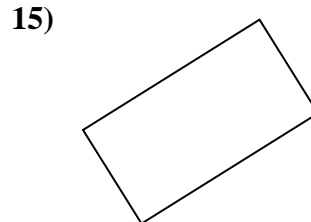
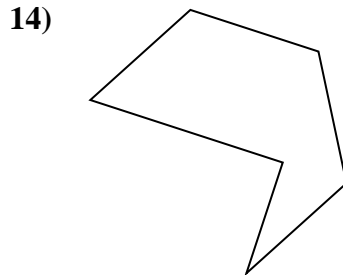
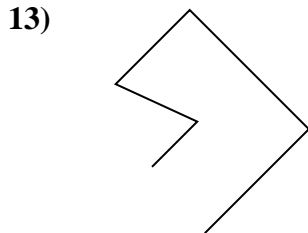
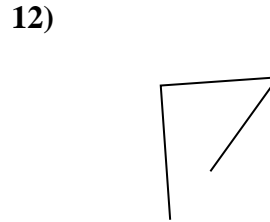
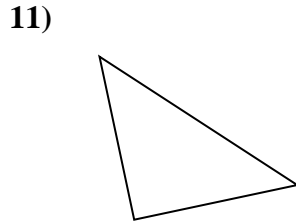
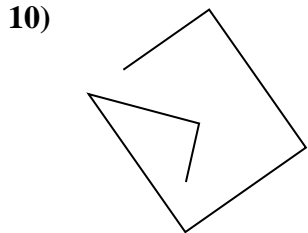
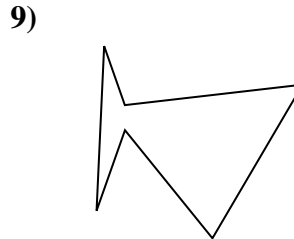
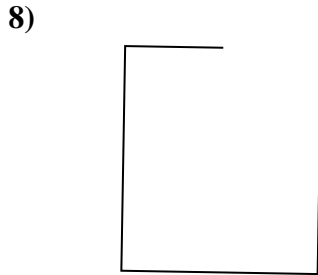
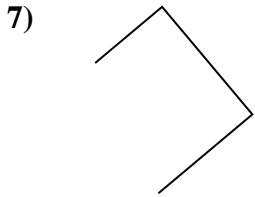

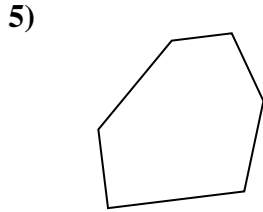
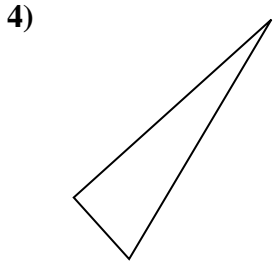
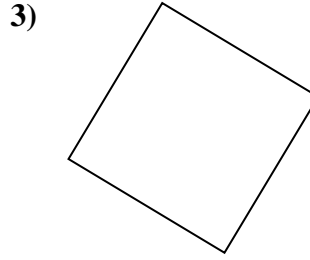
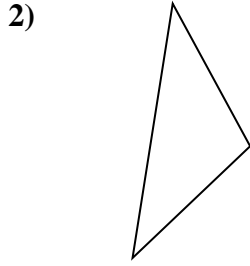
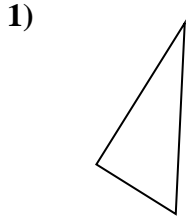
13. \_\_\_\_\_

14. \_\_\_\_\_

15. \_\_\_\_\_



Determinar si la forma mostrada es un 'Triángulo', 'Cuadrado', 'Rectángulo', 'Hexágono' u 'Otro'.



Respuestas

1. triangle

2. triangle

3. square

4. triangle

5. hexágono

6. Otra

7. Otra

8. Otra

9. hexágono

10. Otra

11. triangle

12. Otra

13. Otra

14. hexágono

15. rectangle