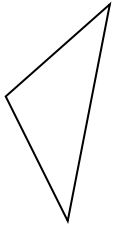


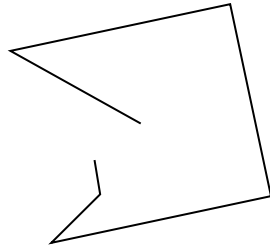


Determinar si la forma mostrada es un 'Triángulo', 'Cuadrado', 'Rectángulo', 'Hexágono' u 'Otro'.

1)



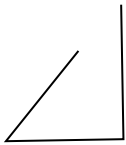
2)



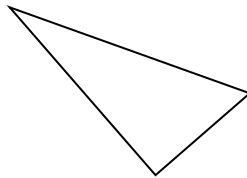
3)



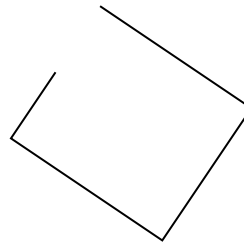
4)



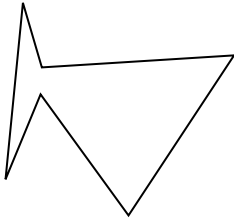
5)



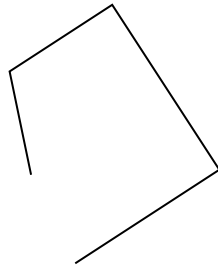
6)




7)




8)



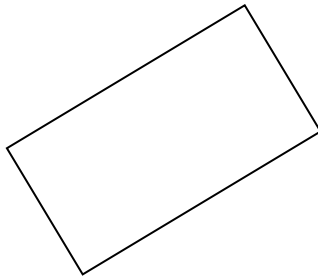
9)




10)



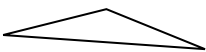
11)




12)



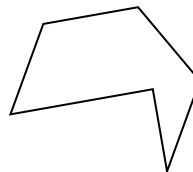
13)



14)



15)



Respuestas

1. _____

2. _____

3. _____

4. _____

5. _____

6. _____

7. _____

8. _____

9. _____

10. _____

11. _____

12. _____

13. _____

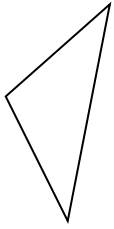
14. _____

15. _____

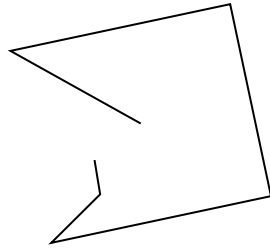


Determinar si la forma mostrada es un 'Triángulo', 'Cuadrado', 'Rectángulo', 'Hexágono' u 'Otro'.

1)



2)



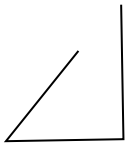
3)



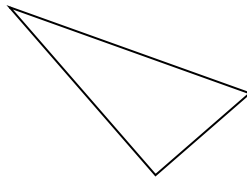
1.

triangle

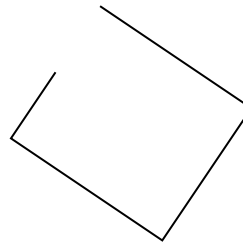
4)



5)



6)



2.

Otra

3.

Otra

4.

Otra

5.

triangle

6.

Otra

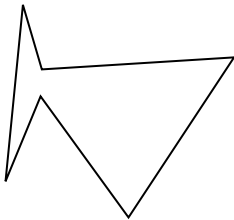
7.

hexágono

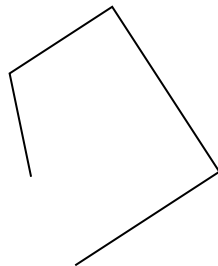
8.

Otra

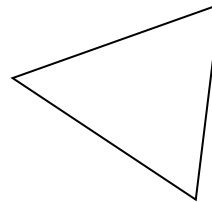
7)



8)



9)



9.

triangle

10.

Otra


11.

rectangle

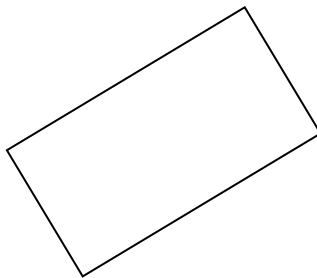
12.

hexágono


10)



11)



12)



13.

triangle

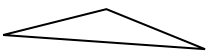
14.

Otra


15.

hexágono

13)



14)



15)

