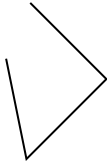


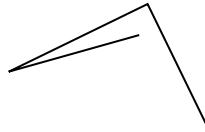


Determinar si la forma mostrada es un 'Triángulo', 'Cuadrado', 'Rectángulo', 'Hexágono' u 'Otro'.

1)



2)



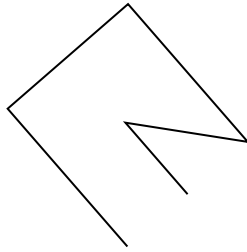
3)



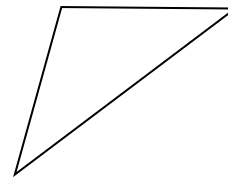
4)



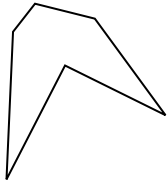
5)



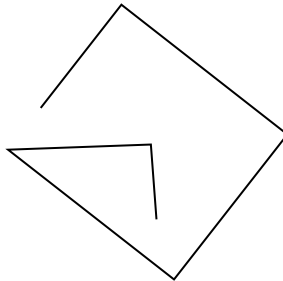
6)




7)




8)



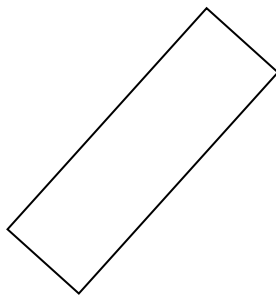
9)



10)



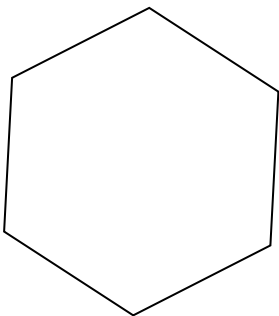
11)



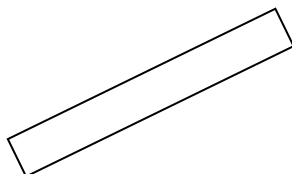
12)



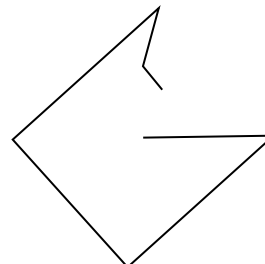
13)



14)



15)



Respuestas

1. _____

2. _____

3. _____

4. _____

5. _____

6. _____

7. _____

8. _____

9. _____

10. _____

11. _____

12. _____

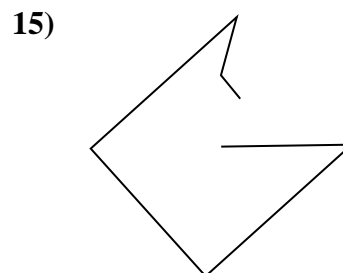
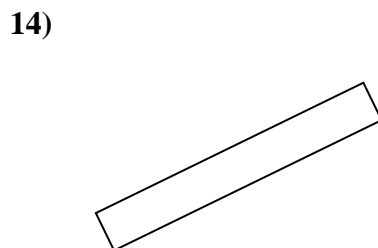
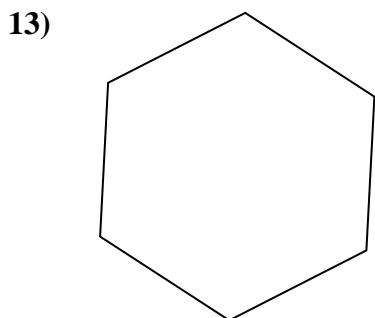
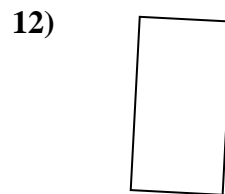
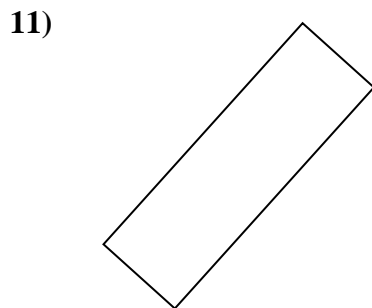
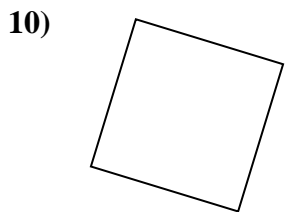
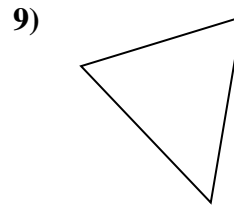
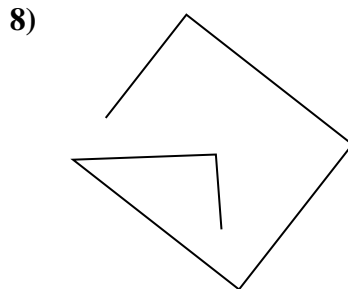
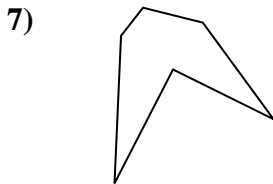
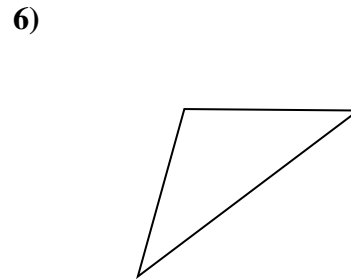
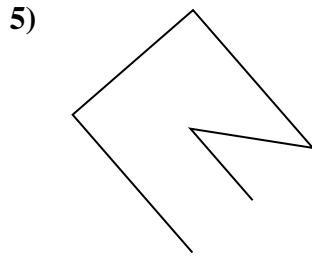
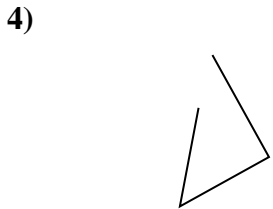
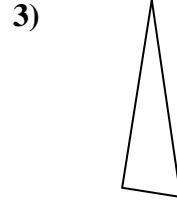
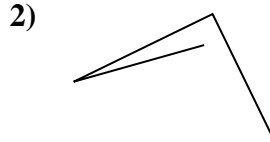

13. _____

14. _____

15. _____



Determinar si la forma mostrada es un 'Triángulo', 'Cuadrado', 'Rectángulo', 'Hexágono' u 'Otro'.



Respuestas

1. Otra

2. Otra

3. triangle

4. Otra

5. Otra

6. triangle

7. hexágono

8. Otra

9. triangle

10. square

11. rectangle

12. rectangle

13. hexágono

14. rectangle

15. Otra