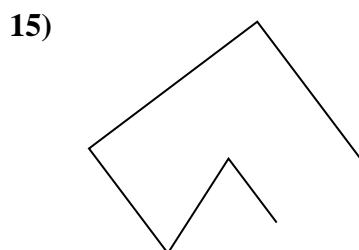
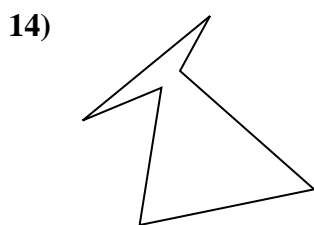
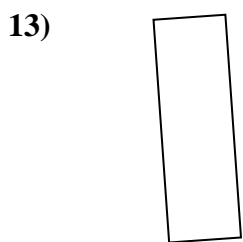
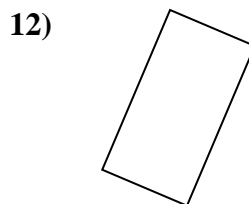
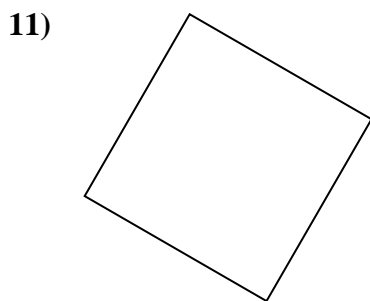
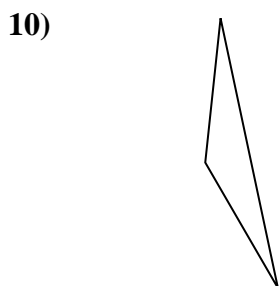

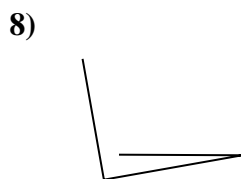

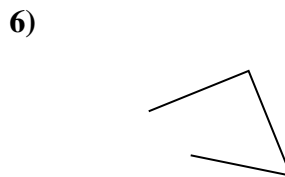
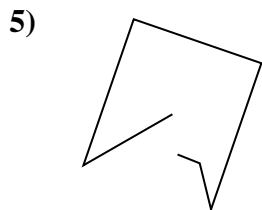
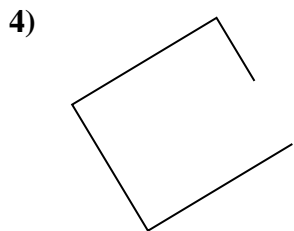

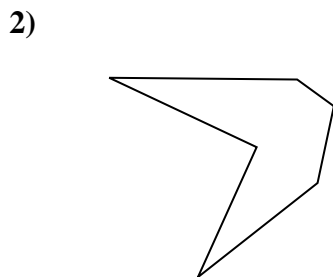
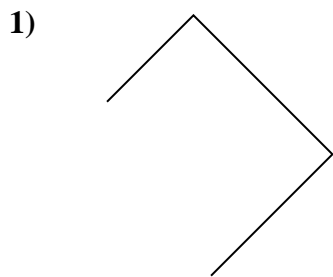




Determinar si la forma mostrada es un 'Triángulo', 'Cuadrado', 'Rectángulo', 'Hexágono' u 'Otro'.

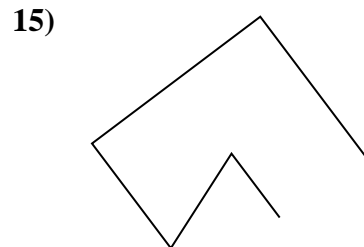
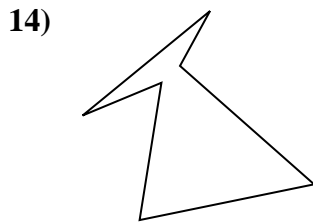
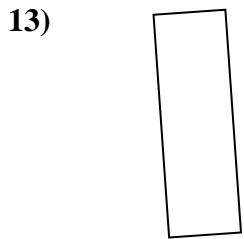
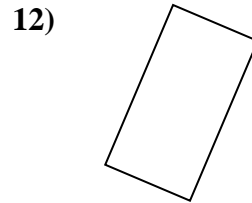
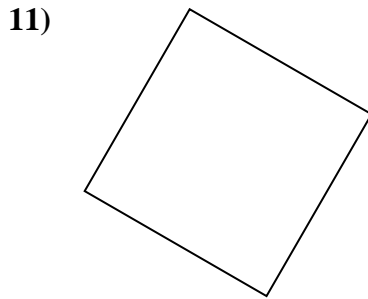
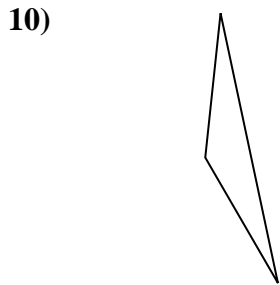

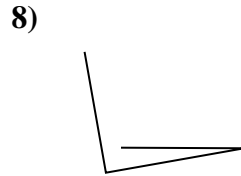

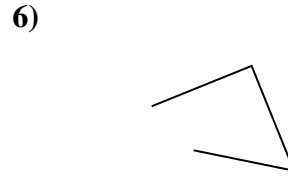
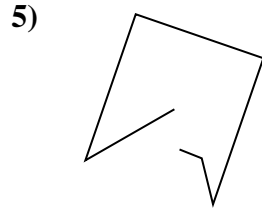
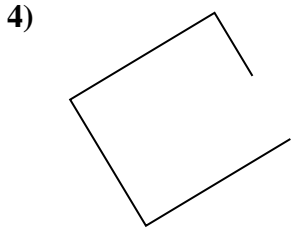

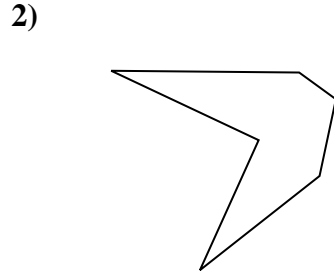
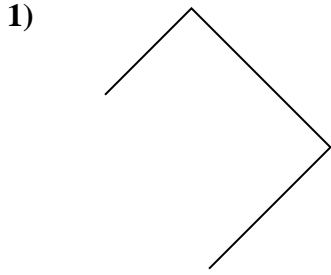


**Respuestas**

1. \_\_\_\_\_
2. \_\_\_\_\_
3. \_\_\_\_\_
4. \_\_\_\_\_
5. \_\_\_\_\_
6. \_\_\_\_\_
7. \_\_\_\_\_
8. \_\_\_\_\_
9. \_\_\_\_\_
10. \_\_\_\_\_
11. \_\_\_\_\_
12. \_\_\_\_\_
13. \_\_\_\_\_
14. \_\_\_\_\_
15. \_\_\_\_\_



Determinar si la forma mostrada es un 'Triángulo', 'Cuadrado', 'Rectángulo', 'Hexágono' u 'Otro'.



Respuestas

1. Otra

2. hexágono

3. rectangle

4. Otra

5. Otra

6. Otra

7. triangle

8. Otra

9. hexágono

10. triangle

11. square

12. rectangle

13. rectangle

14. hexágono

15. Otra