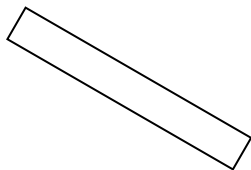


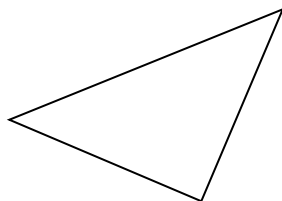


Determinar si la forma mostrada es un 'Triángulo', 'Cuadrado', 'Rectángulo', 'Hexágono' u 'Otro'.

1)



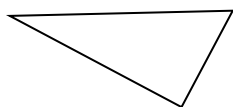
2)



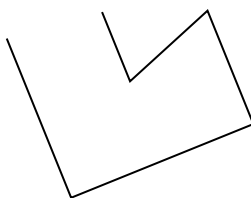
3)



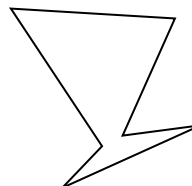
4)



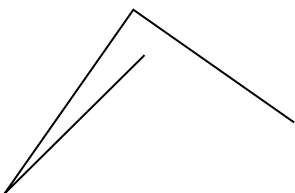
5)



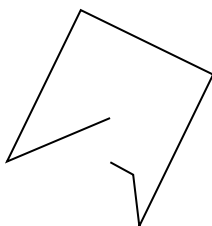
6)




7)



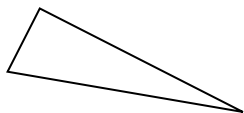
8)



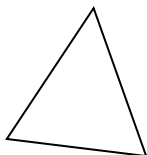
9)



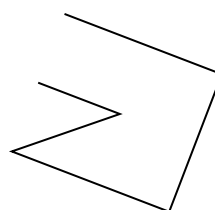
10)



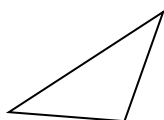
11)



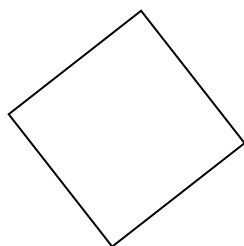
12)



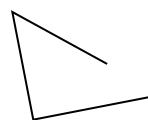
13)



14)



15)

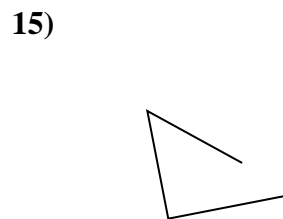
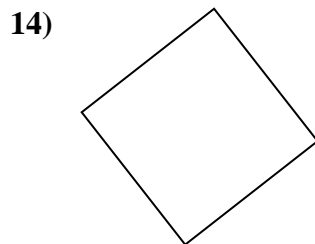
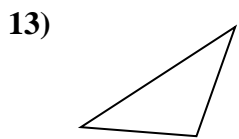
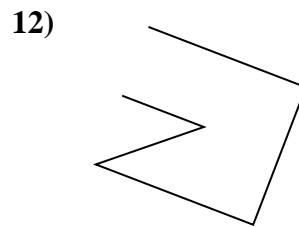
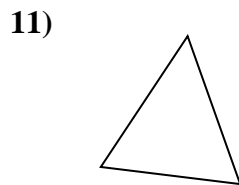
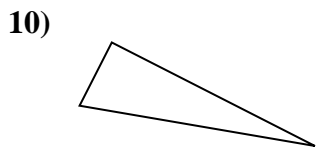
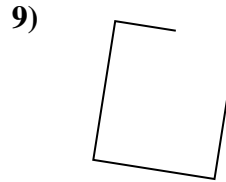
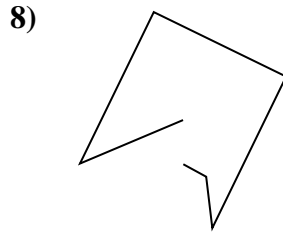
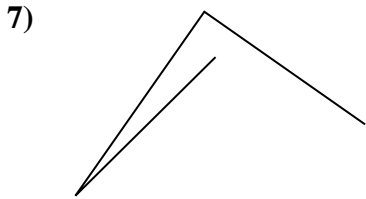
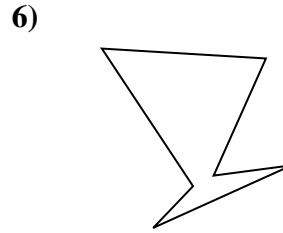
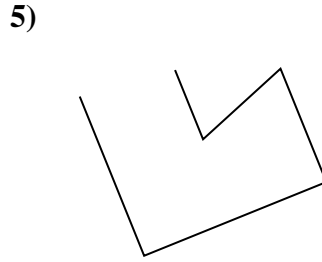

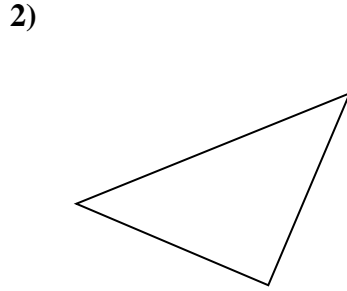
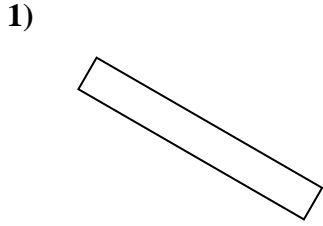


Respuestas

- 1. _____
- 2. _____
- 3. _____
- 4. _____
- 5. _____
- 6. _____
- 7. _____
- 8. _____
- 9. _____
- 10. _____
- 11. _____
- 12. _____
- 13. _____
- 14. _____
- 15. _____



Determinar si la forma mostrada es un 'Triángulo', 'Cuadrado', 'Rectángulo', 'Hexágono' u 'Otro'.



Respuestas

1. rectangle

2. triangle

3. Otra

4. triangle

5. Otra

6. hexágono

7. Otra

8. Otra

9. Otra

10. triangle

11. triangle

12. Otra

13. triangle

14. square

15. Otra