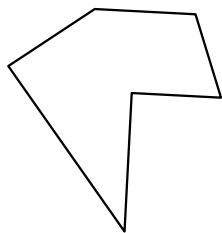





Identificar el tipo de figura mostrada.

**Respuestas**

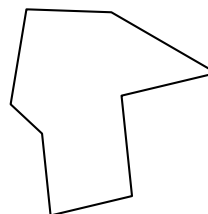
1)



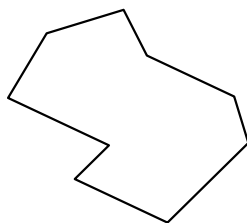
2)



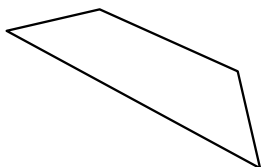
3)



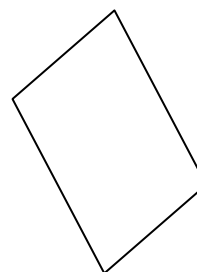
4)




5)



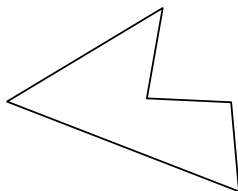
6)




7)



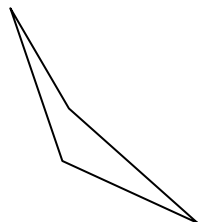
8)



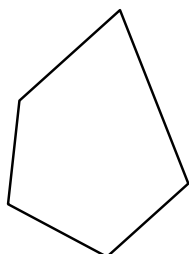
9)



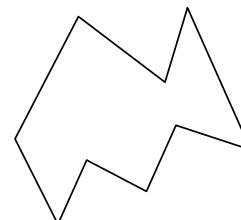
10)



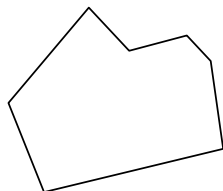
11)



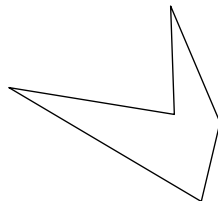
12)



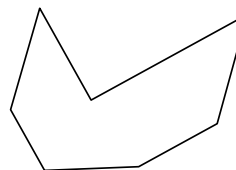
13)



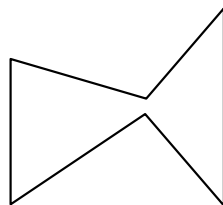
14)



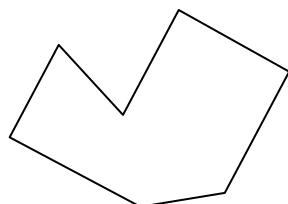
15)



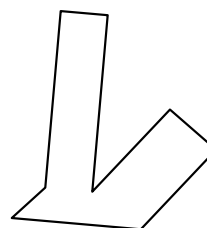
16)



17)



18)



1. \_\_\_\_\_

2. \_\_\_\_\_

3. \_\_\_\_\_

4. \_\_\_\_\_

5. \_\_\_\_\_

6. \_\_\_\_\_

7. \_\_\_\_\_

8. \_\_\_\_\_

9. \_\_\_\_\_

10. \_\_\_\_\_

11. \_\_\_\_\_

12. \_\_\_\_\_

13. \_\_\_\_\_

14. \_\_\_\_\_

15. \_\_\_\_\_

16. \_\_\_\_\_

17. \_\_\_\_\_

18. \_\_\_\_\_

19. \_\_\_\_\_

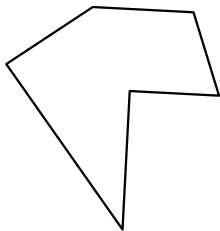
20. \_\_\_\_\_

21. \_\_\_\_\_




Identificar el tipo de figura mostrada.

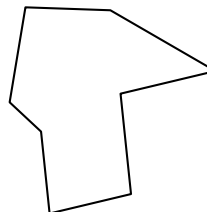
1)



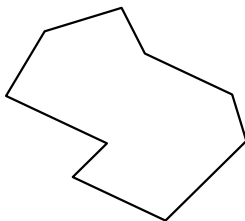
2)



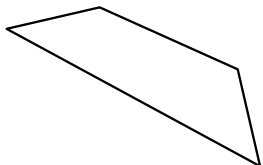
3)



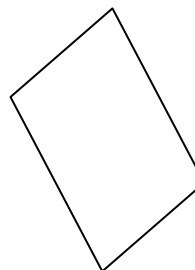
4)



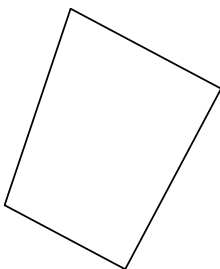
5)



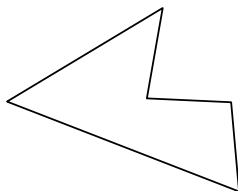
6)




7)



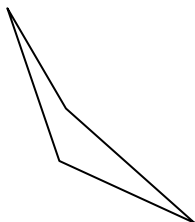
8)



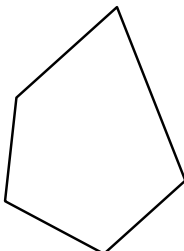
9)



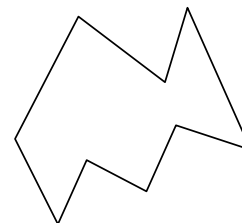
10)



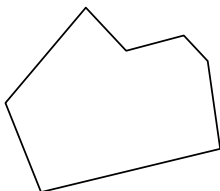
11)



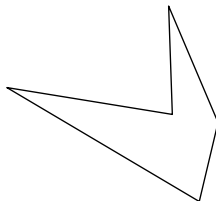
12)



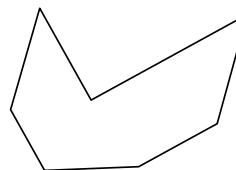
13)




14)



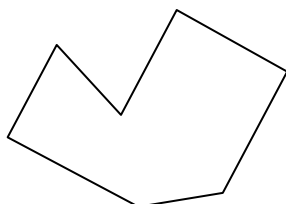
15)



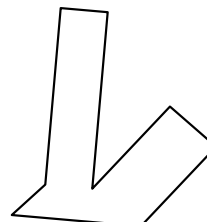
16)



17)



18)



**Respuestas**

1. hexágono

2. nonagono

3. octágonos

4. nonagono

5. cuadrilátero

6. cuadrilátero

7. cuadrilátero

8. pentágono

9. heptágono

10. cuadrilátero

11. pentágono

12. nonagono

13. heptágono

14. pentágono

15. heptágono

16. hexágono

17. heptágono

18. octágonos

19. octágonos

20. heptágono

21. octágonos