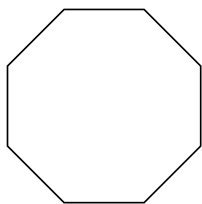


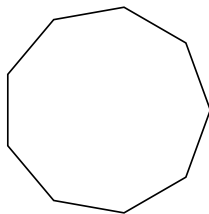


Identificar el tipo de figura mostrada.

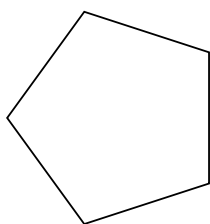
1)



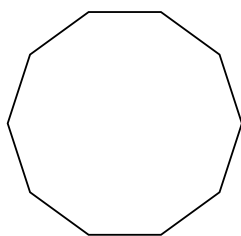
2)




3)



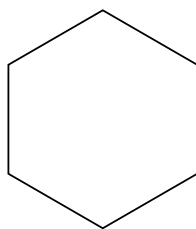
4)



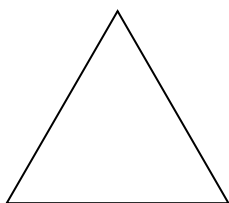
5)



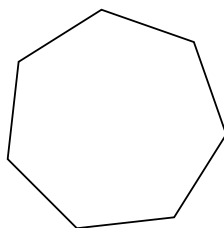
6)



7)



8)



Respuestas

1. _____

2. _____

3. _____

4. _____

5. _____

6. _____

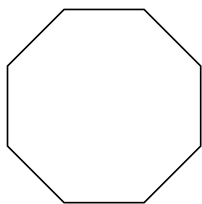
7. _____

8. _____

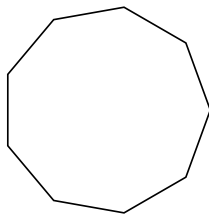


Identificar el tipo de figura mostrada.

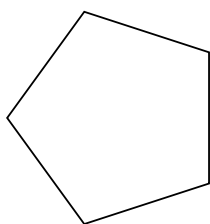
1)



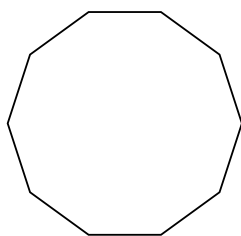
2)




3)



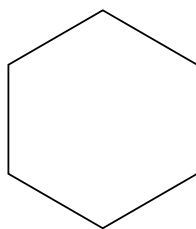
4)



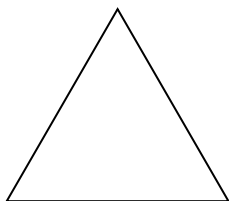
5)



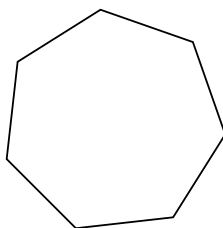
6)



7)



8)

**Respuestas**1. **octágonos**2. **nonagono**3. **pentágono**4. **decágono**5. **cuadrilátero**6. **hexágono**7. **triangle**8. **heptágono**