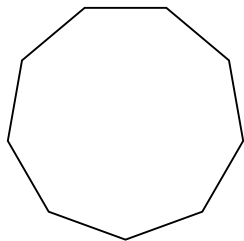


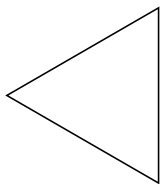


Identificar el tipo de figura mostrada.

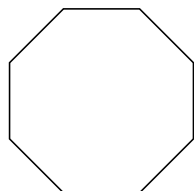
1)



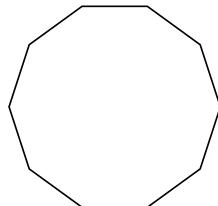
2)



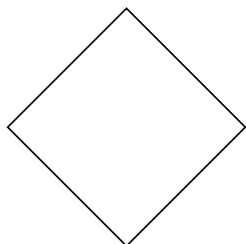
3)



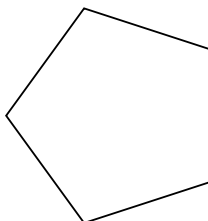
4)



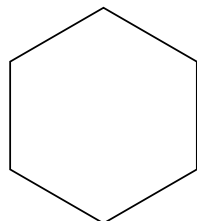
5)



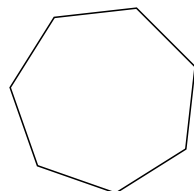
6)



7)



8)



Respuestas

1. _____

2. _____

3. _____

4. _____

5. _____

6. _____

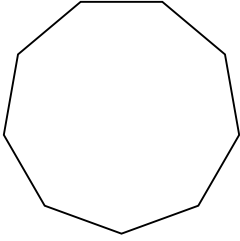
7. _____

8. _____

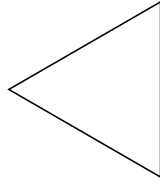


Identificar el tipo de figura mostrada.

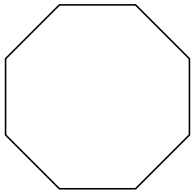
1)



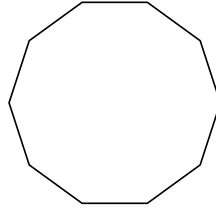
2)




3)



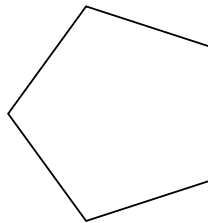
4)



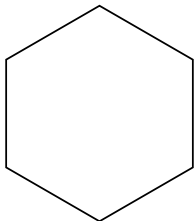
5)



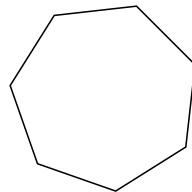
6)



7)



8)



Respuestas

1. **nonagono**

2. **triangle**

3. **octágonos**

4. **decágonos**

5. **cuadrilátero**

6. **pentágonos**

7. **hexágonos**

8. **heptágonos**