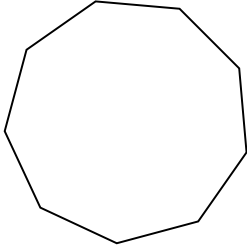


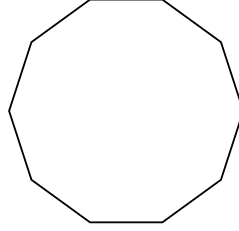


Identificar el tipo de figura mostrada.


1)



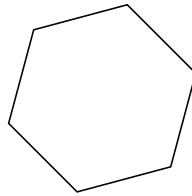
2)



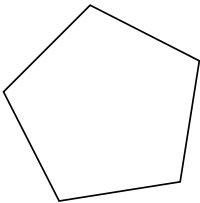
3)



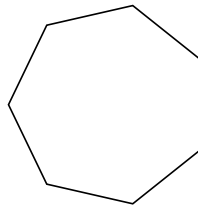
4)



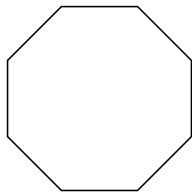
5)




6)



7)



8)



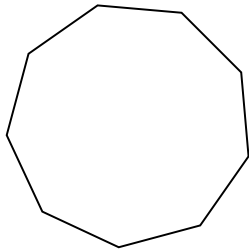
**Respuestas**

- 1. \_\_\_\_\_
- 2. \_\_\_\_\_
- 3. \_\_\_\_\_
- 4. \_\_\_\_\_
- 5. \_\_\_\_\_
- 6. \_\_\_\_\_
- 7. \_\_\_\_\_
- 8. \_\_\_\_\_

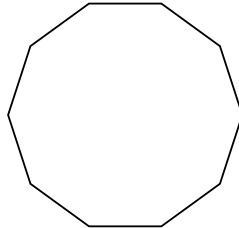


Identificar el tipo de figura mostrada.

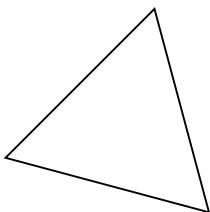
1)



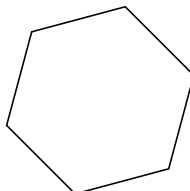
2)



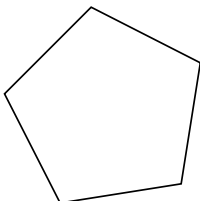
3)



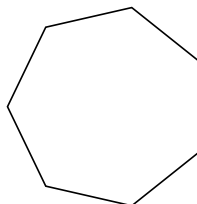
4)



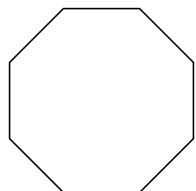
5)



6)



7)



8)



Respuestas

1. nonagono

2. decágono

3. triangle

4. hexágono

5. pentágono

6. heptágono

7. octágonos

8. cuadrilátero