



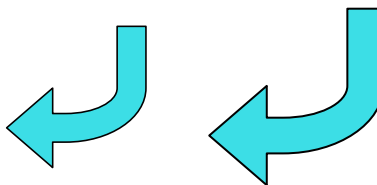
Determina si las figuras que se muestran son 'similares', 'congruentes' o 'ninguna'.

Respuestas

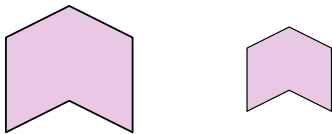
1)



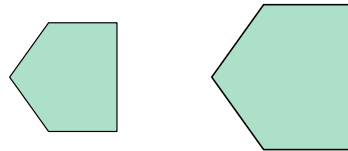
2)



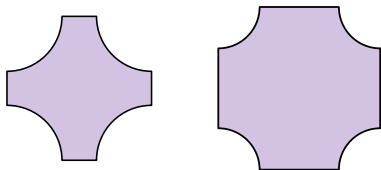
3)



4)



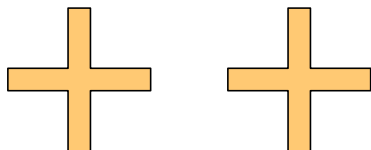
5)




6)



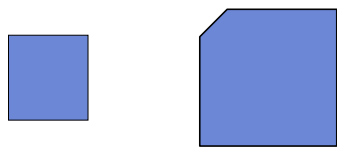
7)



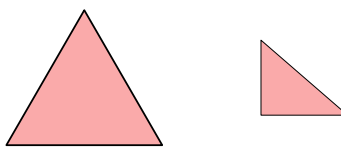
8)



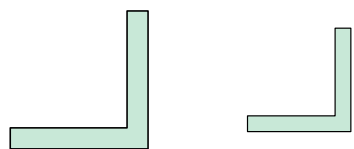
9)



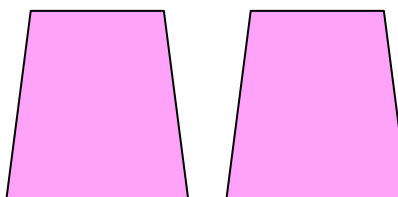
10)



11)



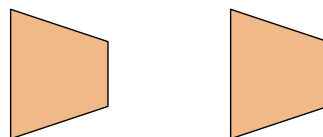
12)



13)



14)



15)



16)



1. _____

2. _____

3. _____

4. _____

5. _____

6. _____

7. _____

8. _____

9. _____

10. _____

11. _____

12. _____

13. _____

14. _____



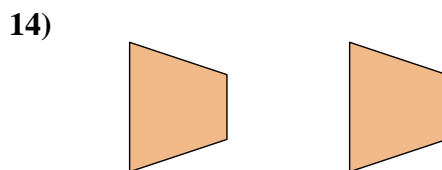
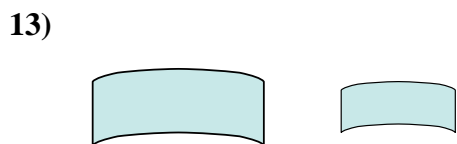
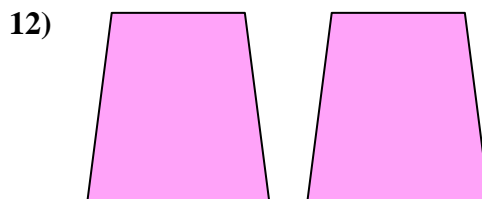
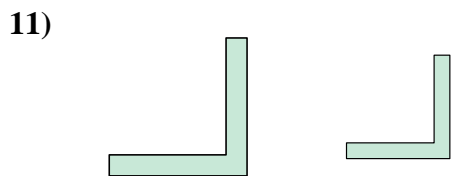
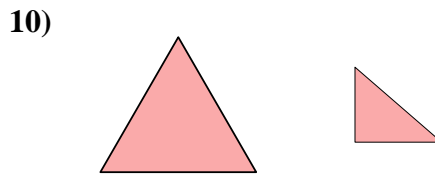
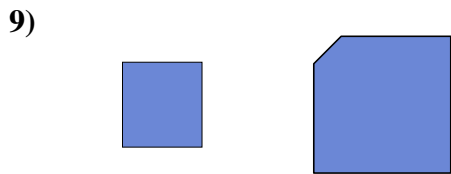
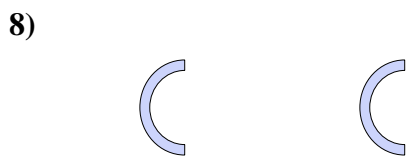


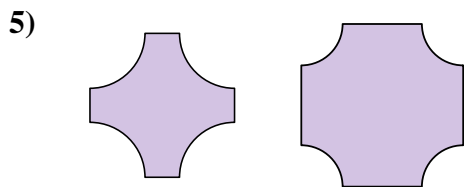
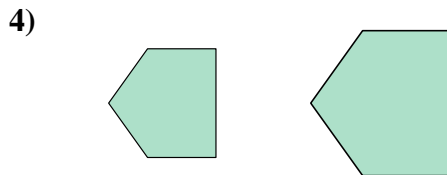
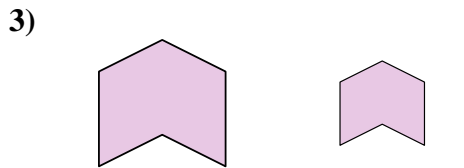

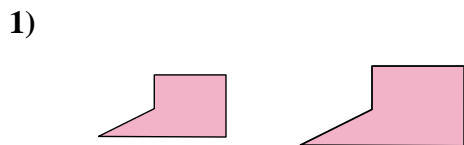
15. _____

16. _____



Determina si las figuras que se muestran son 'similares', 'congruentes' o 'ninguna'.

Respuestas



1. similar

2. similar

3. similar

4. similar

5. ninguno

6. ninguno

7. congruente

8. congruente

9. ninguno

10. ninguno

11. similar

12. congruente

13. similar

14. congruente

15. similar

16. ninguno