




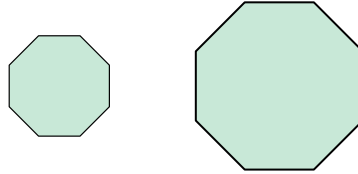
Determina si las figuras que se muestran son 'similares', 'congruentes' o 'ninguna'.

**Respuestas**

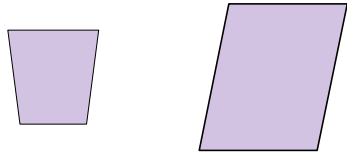
1)



2)



3)



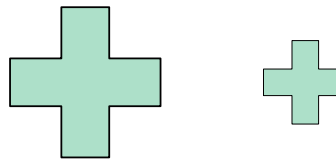
4)



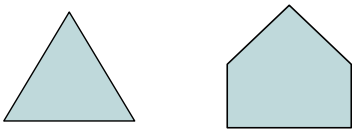
5)



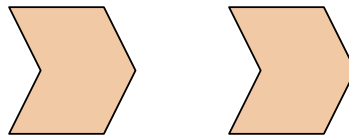
6)



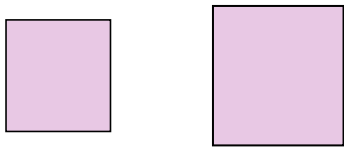
7)



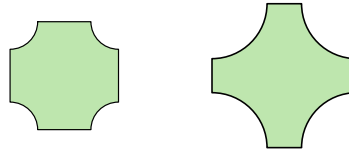
8)



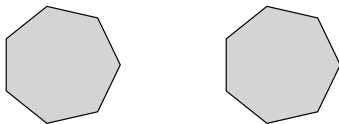
9)




10)



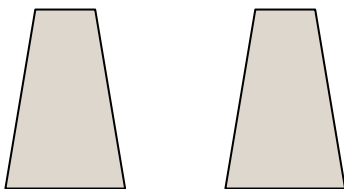
11)



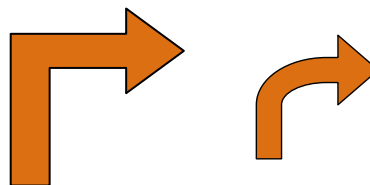
12)



13)



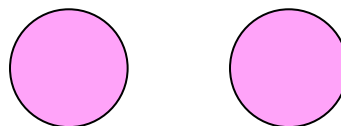
14)



15)



16)




1. \_\_\_\_\_
2. \_\_\_\_\_
3. \_\_\_\_\_
4. \_\_\_\_\_
5. \_\_\_\_\_
6. \_\_\_\_\_
7. \_\_\_\_\_
8. \_\_\_\_\_
9. \_\_\_\_\_
10. \_\_\_\_\_
11. \_\_\_\_\_
12. \_\_\_\_\_
13. \_\_\_\_\_
14. \_\_\_\_\_
15. \_\_\_\_\_
16. \_\_\_\_\_



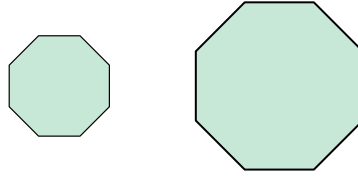
Determina si las figuras que se muestran son 'similares', 'congruentes' o 'ninguna'.

**Respuestas**

1)

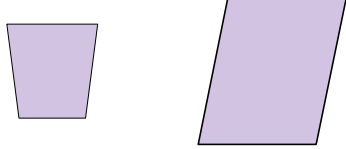


2)



1. ninguno

3)



4)




2. similar

5)



6)



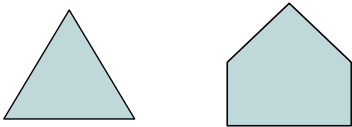
3. ninguno

4. similar

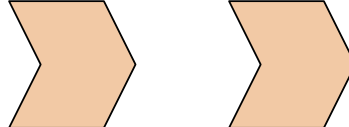
5. similar

6. similar

7)



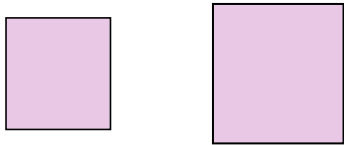
8)



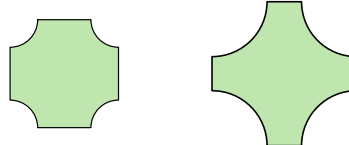
7. ninguno

8. congruente

9)



10)



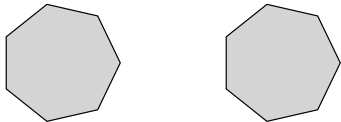
9. similar

10. ninguno


11. congruente

12. ninguno

11)



12)

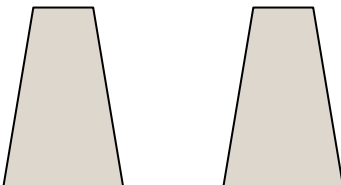


13. congruente

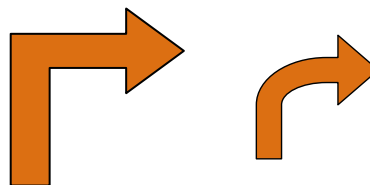
14. ninguno

15. congruente

13)



14)



16. congruente

15)



16)

