



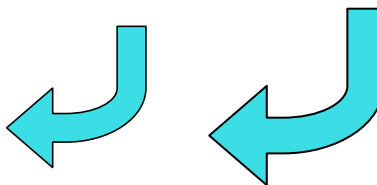
Determina si las figuras que se muestran son 'similares', 'congruentes' o 'ninguna'.

Respuestas

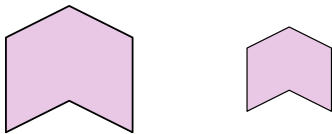
1)



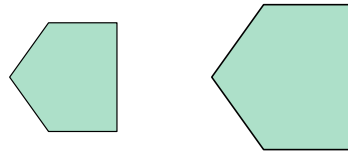
2)



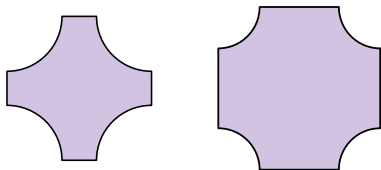
3)



4)



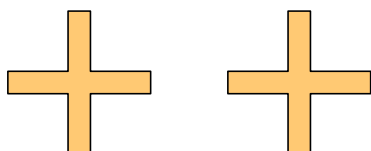
5)



6)



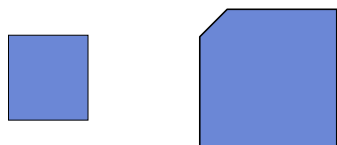
7)



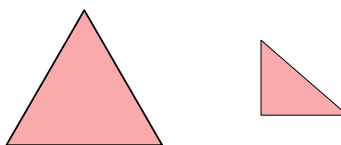
8)



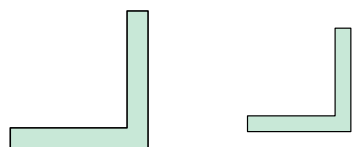
9)



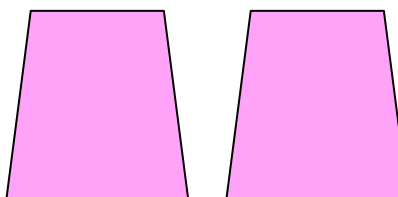
10)



11)



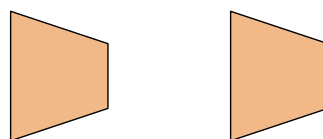
12)



13)



14)



15)



16)



1. _____

2. _____

3. _____

4. _____

5. _____

6. _____

7. _____

8. _____

9. _____

10. _____

11. _____

12. _____

13. _____

14. _____


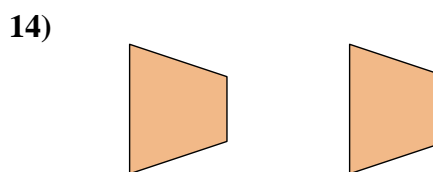
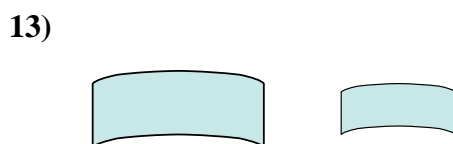
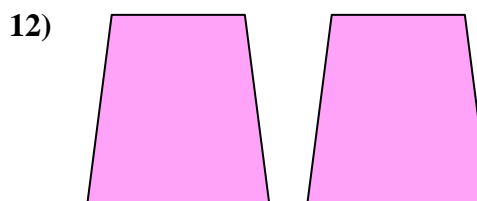

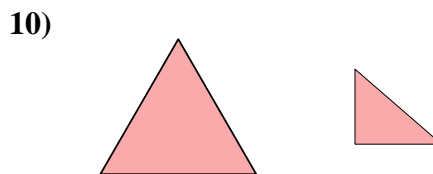
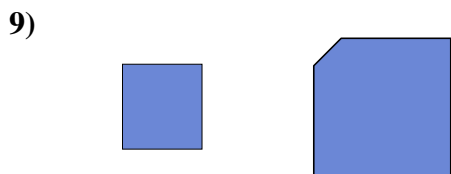
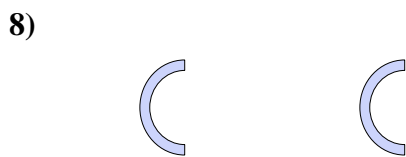


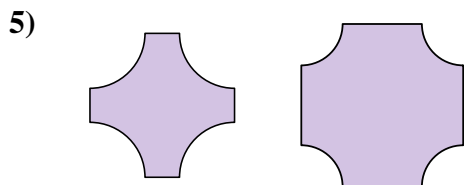
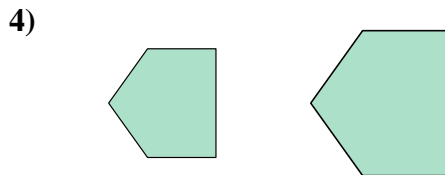
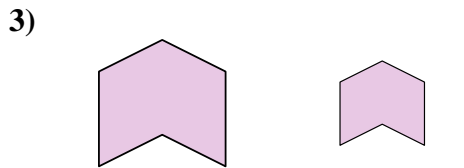

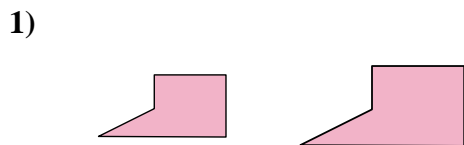
15. _____

16. _____



Determina si las figuras que se muestran son 'similares', 'congruentes' o 'ninguna'.

Respuestas



1. similar

2. similar

3. similar

4. similar

5. ninguno

6. ninguno

7. congruente

8. congruente

9. ninguno

10. ninguno

11. similar

12. congruente

13. similar

14. congruente


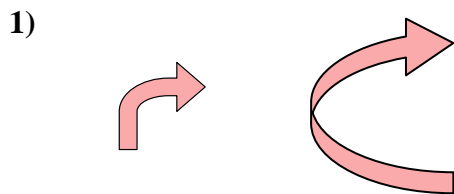
15. similar

16. ninguno

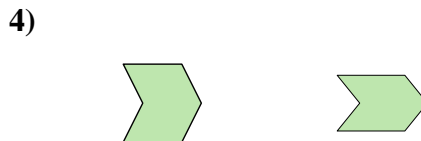
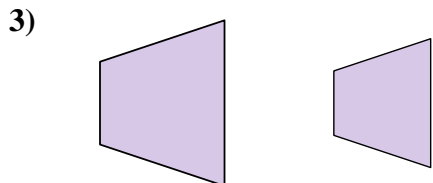


Determina si las figuras que se muestran son 'similares', 'congruentes' o 'ninguna'.

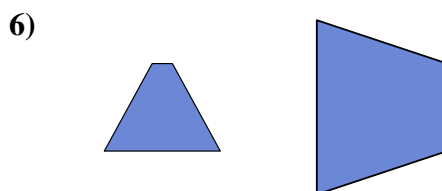
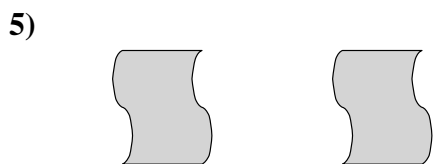
Respuestas



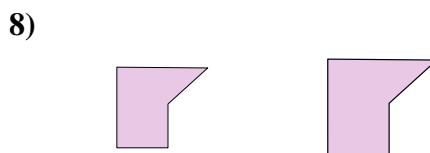
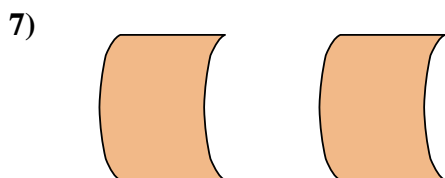
1. _____




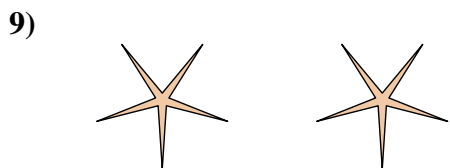
2. _____




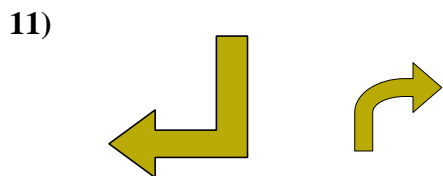
3. _____



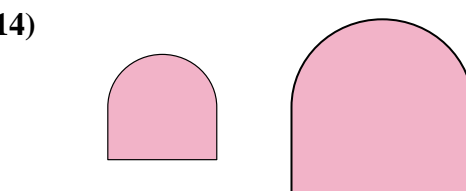
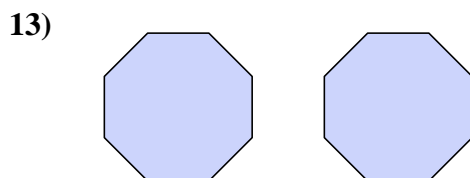
4. _____



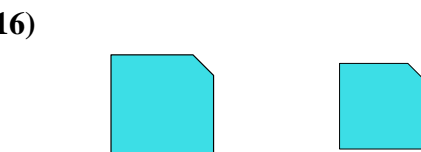
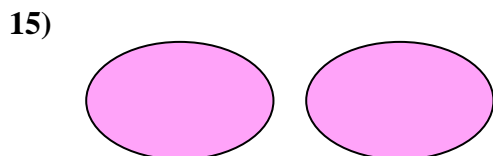
5. _____



6. _____



7. _____



8. _____

9. _____

10. _____

11. _____

12. _____

13. _____

14. _____


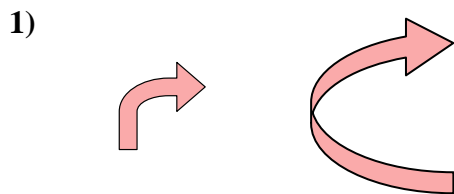
15. _____

16. _____

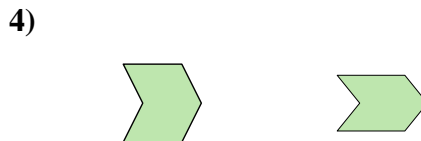
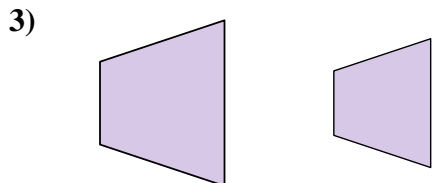


Determina si las figuras que se muestran son 'similares', 'congruentes' o 'ninguna'.

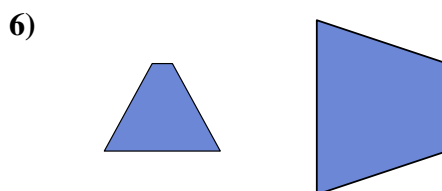
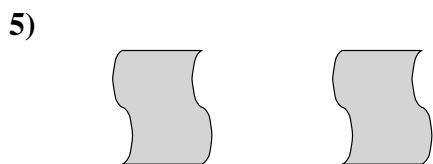
Respuestas



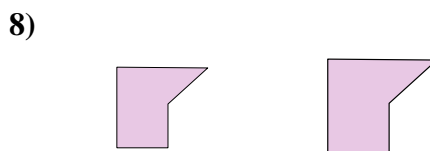
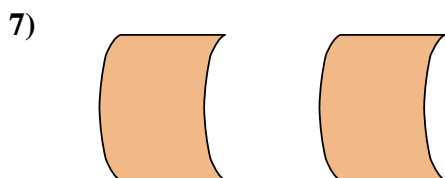
1. ninguno




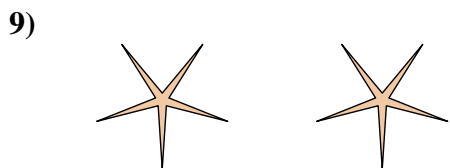
2. congruente





3. similar



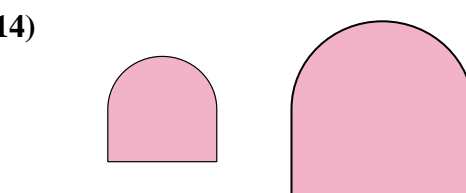
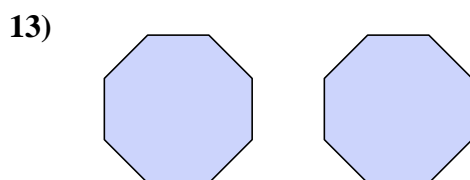
4. ninguno



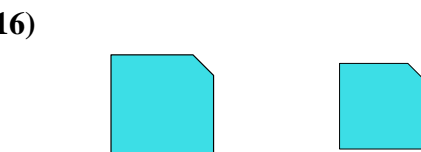
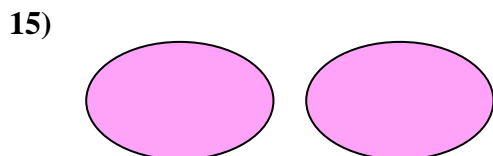
5. congruente



6. ninguno



7. congruente



8. similar

9. congruente

10. congruente

11. ninguno

12. ninguno

13. congruente

14. similar

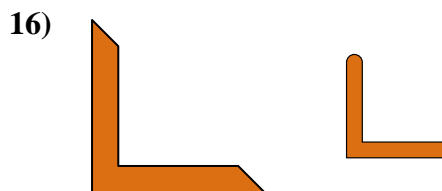

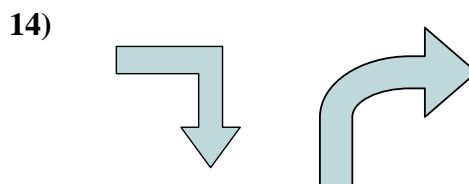
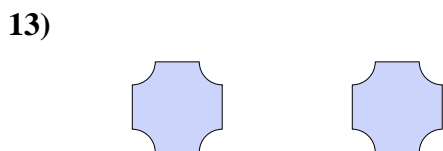
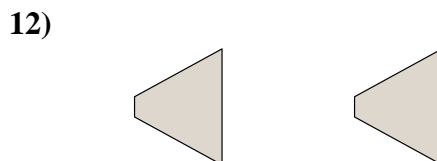
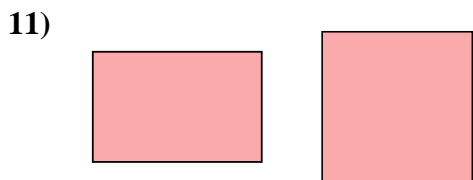
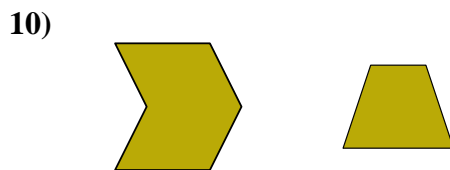
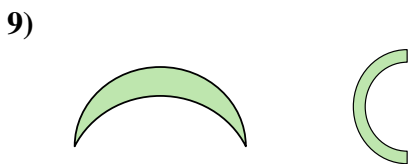
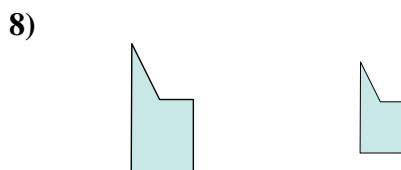
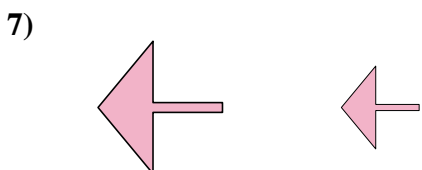
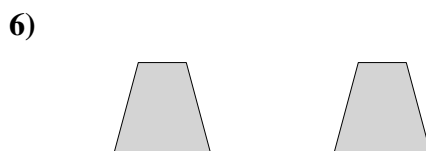

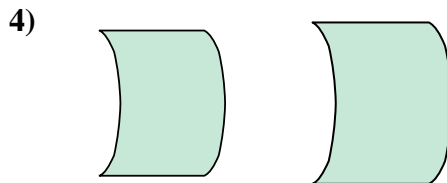
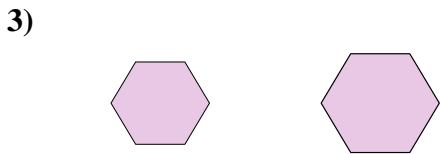
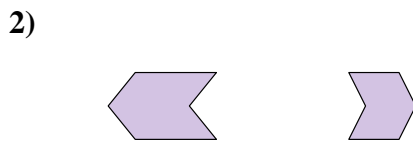
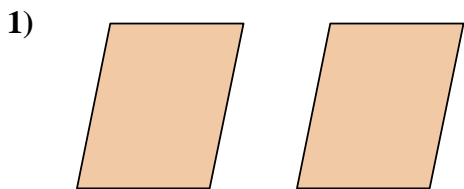
15. congruente

16. similar



Determina si las figuras que se muestran son 'similares', 'congruentes' o 'ninguna'.

Respuestas



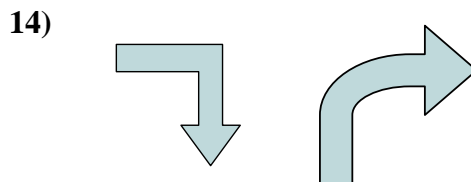
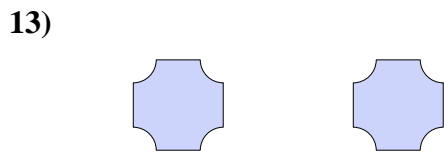
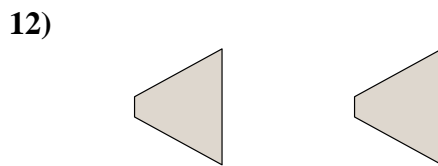
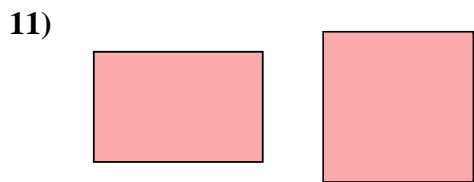
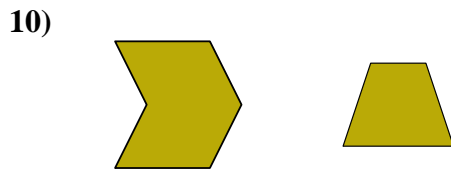
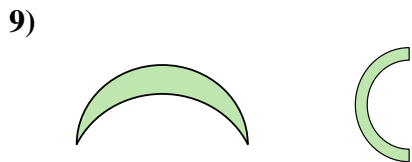

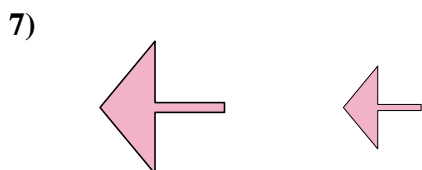
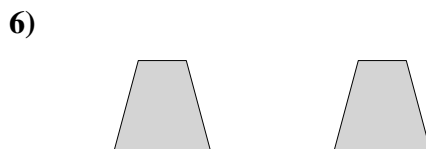

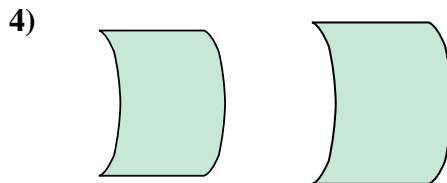
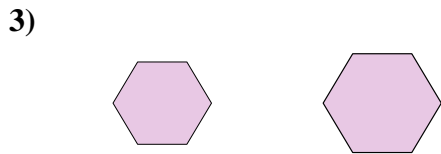
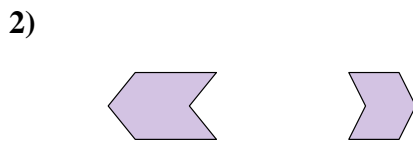
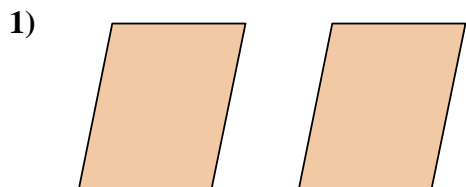


1. _____
2. _____
3. _____
4. _____
5. _____
6. _____
7. _____
8. _____
9. _____
10. _____
11. _____
12. _____
13. _____
14. _____
15. _____
16. _____



Determina si las figuras que se muestran son 'similares', 'congruentes' o 'ninguna'.

Respuestas



1. congruente

2. ninguno

3. similar

4. similar

5. similar

6. congruente

7. similar

8. similar

9. ninguno

10. ninguno

11. ninguno

12. congruente

13. congruente

14. ninguno

15. congruente

16. ninguno



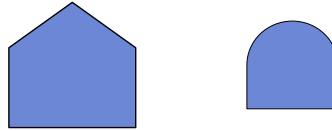
Determina si las figuras que se muestran son 'similares', 'congruentes' o 'ninguna'.

Respuestas

1)



2)



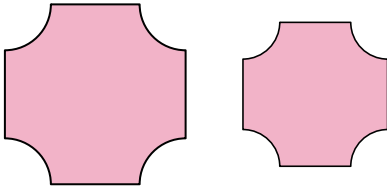
3)



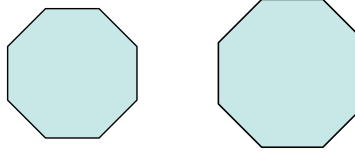
4)




5)



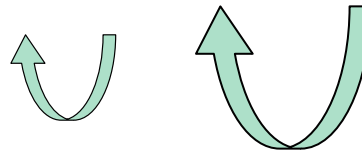
6)



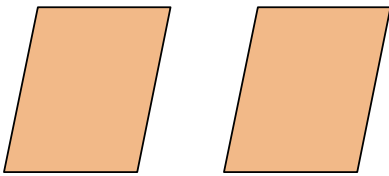
7)




8)




9)



10)



11)



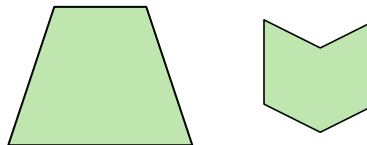
12)



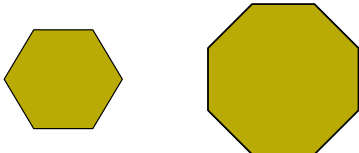
13)



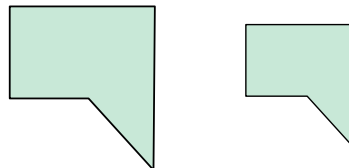
14)



15)



16)



1. _____
2. _____
3. _____
4. _____
5. _____
6. _____
7. _____
8. _____
9. _____
10. _____
11. _____
12. _____
13. _____
14. _____
15. _____
16. _____




Determina si las figuras que se muestran son 'similares', 'congruentes' o 'ninguna'.

Respuestas

1)



2)



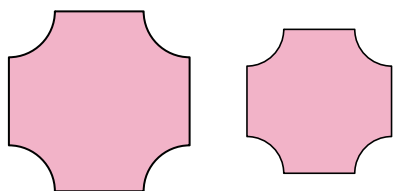
3)



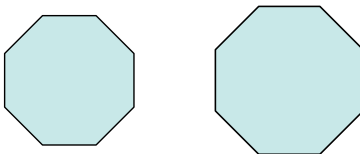
4)




5)



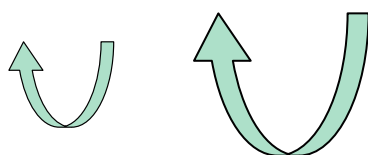
6)



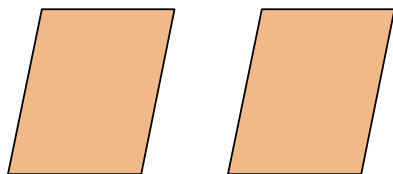
7)



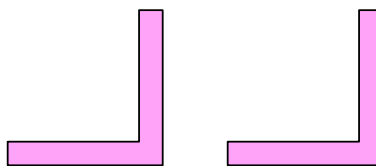
8)



9)



10)



11)



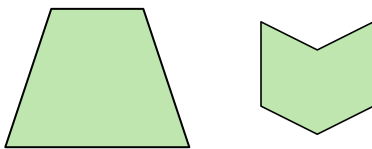
12)



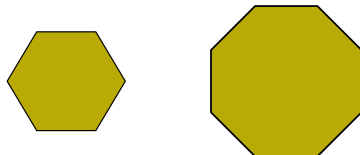
13)



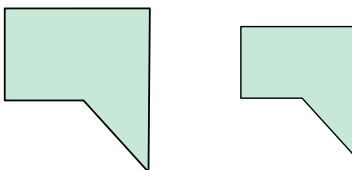
14)



15)



16)



1. congruente

2. ninguno

3. congruente

4. similar

5. similar

6. similar

7. similar

8. similar

9. congruente

10. congruente

11. congruente

12. ninguno

13. congruente

14. ninguno

15. ninguno

16. similar



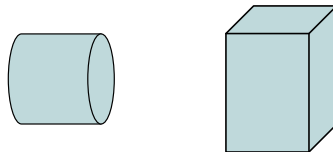
Determina si las figuras que se muestran son 'similares', 'congruentes' o 'ninguna'.

Respuestas

1)



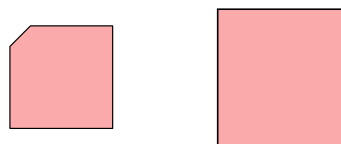
2)




3)



4)




5)



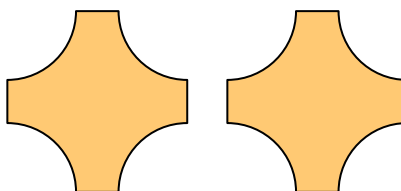
6)



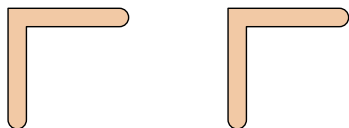
7)



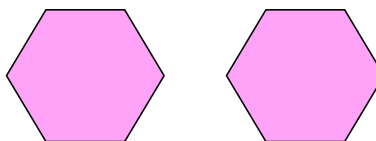
8)



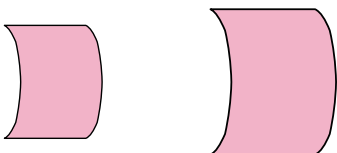
9)



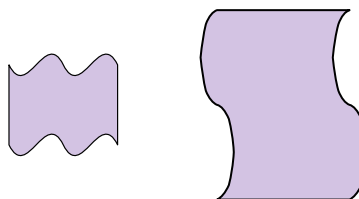
10)



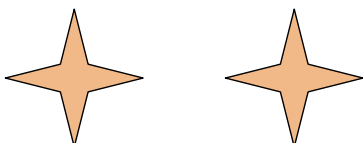
11)



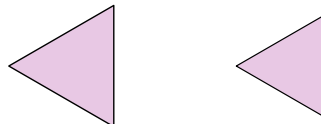
12)



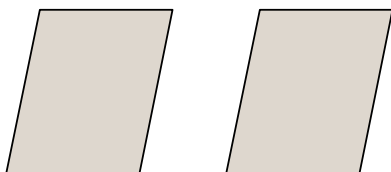
13)



14)



15)



16)



1. _____

2. _____

3. _____

4. _____

5. _____

6. _____

7. _____

8. _____

9. _____

10. _____

11. _____

12. _____

13. _____

14. _____

15. _____

16. _____



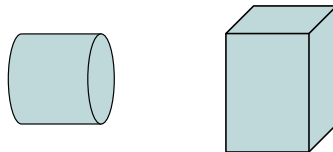
Determina si las figuras que se muestran son 'similares', 'congruentes' o 'ninguna'.

Respuestas

1)



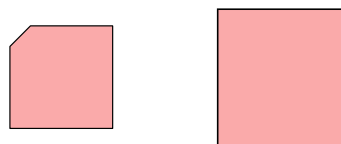
2)




3)



4)



5)



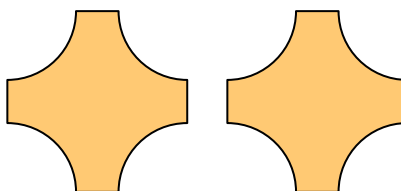
6)



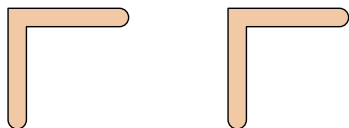
7)



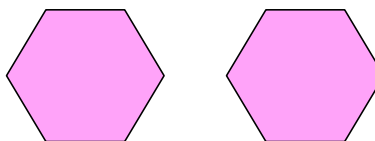
8)



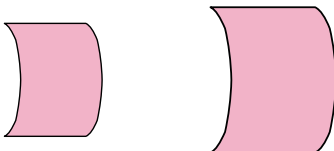
9)



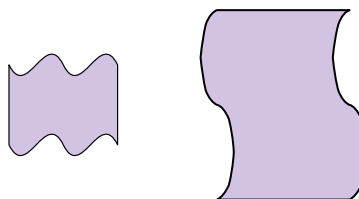
10)



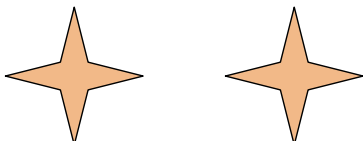
11)



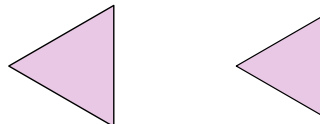
12)



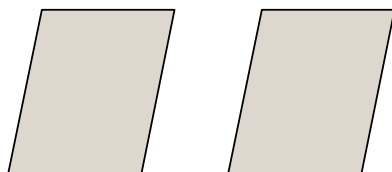
13)



14)



15)



16)



1. similar

2. ninguno

3. similar

4. ninguno

5. ninguno

6. congruente

7. similar

8. congruente

9. congruente

10. congruente

11. similar

12. ninguno

13. congruente

14. similar

15. congruente

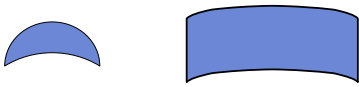
16. ninguno



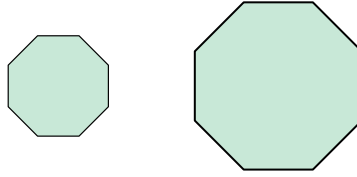
Determina si las figuras que se muestran son 'similares', 'congruentes' o 'ninguna'.

Respuestas

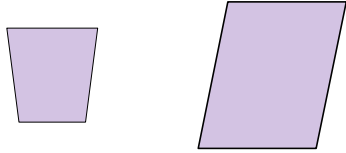
1)



2)



3)



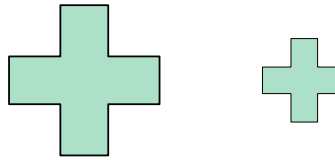
4)



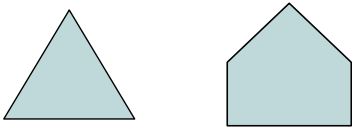
5)



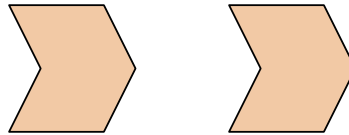
6)



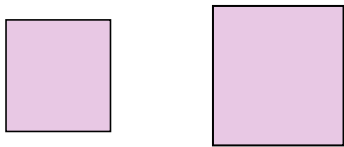
7)



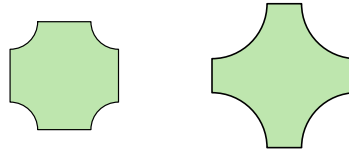
8)



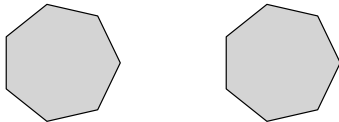
9)




10)



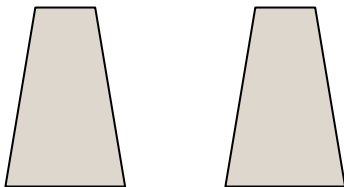
11)



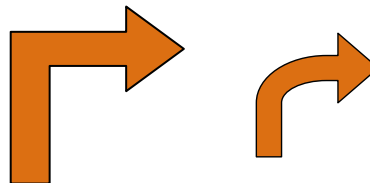
12)



13)



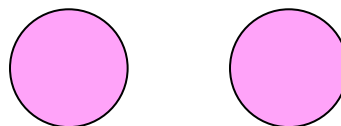
14)



15)



16)



1. _____

2. _____

3. _____

4. _____

5. _____

6. _____

7. _____

8. _____

9. _____

10. _____

11. _____

12. _____

13. _____

14. _____

15. _____

16. _____



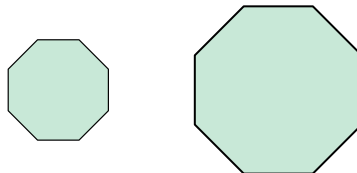
Determina si las figuras que se muestran son 'similares', 'congruentes' o 'ninguna'.

Respuestas

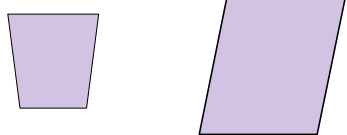
1)



2)



3)



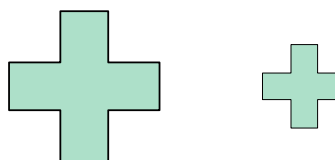
4)



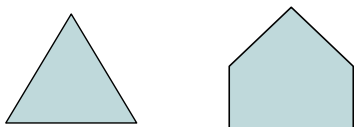
5)



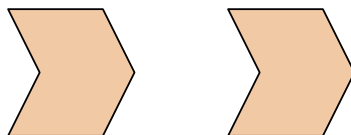
6)



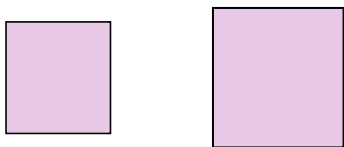
7)



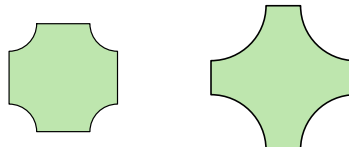
8)



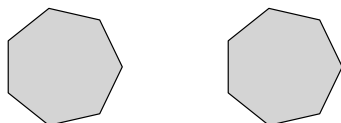
9)




10)



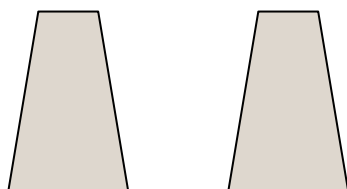
11)



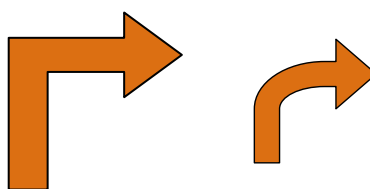
12)



13)



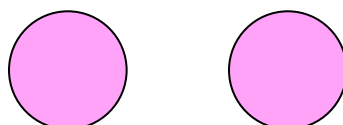
14)



15)



16)



1. ninguno

2. similar

3. ninguno

4. similar

5. similar

6. similar

7. ninguno

8. congruente

9. similar

10. ninguno

11. congruente

12. ninguno

13. congruente

14. ninguno

15. congruente

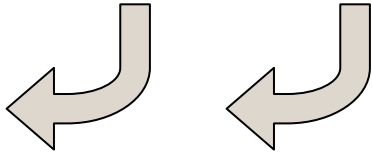
16. congruente




Determina si las figuras que se muestran son 'similares', 'congruentes' o 'ninguna'.

Respuestas

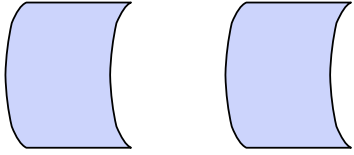
1)



2)



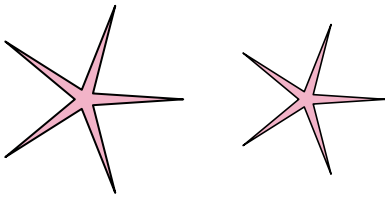
3)



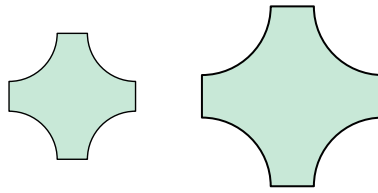
4)



5)



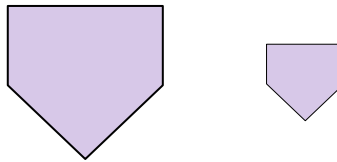
6)



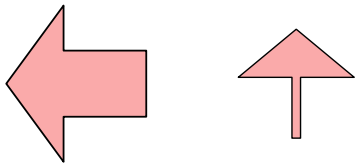
7)




8)



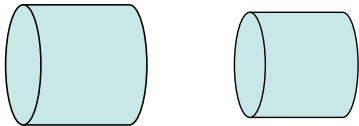
9)



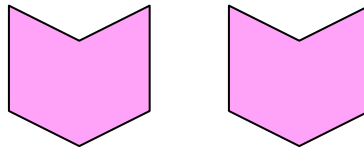
10)



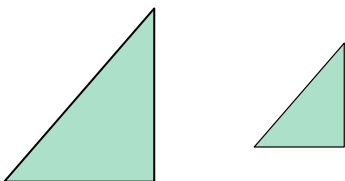
11)



12)




13)



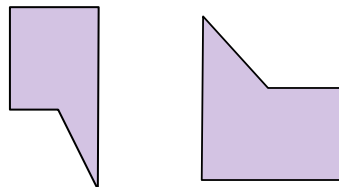
14)



15)



16)



1. _____

2. _____

3. _____

4. _____

5. _____

6. _____

7. _____

8. _____

9. _____

10. _____

11. _____

12. _____

13. _____

14. _____

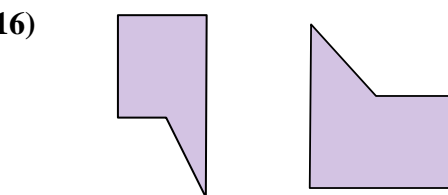

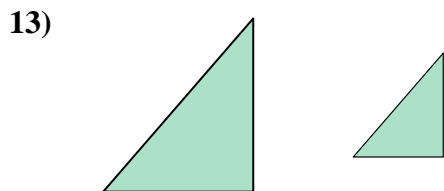
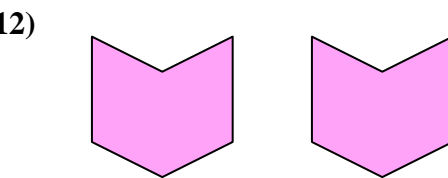

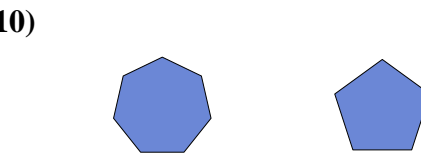
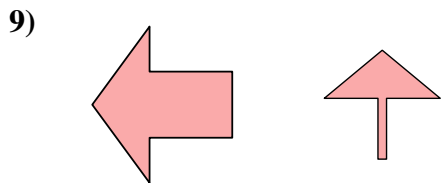
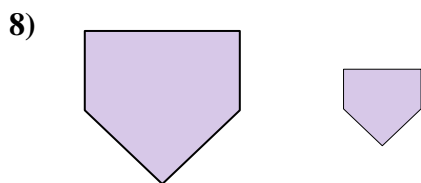
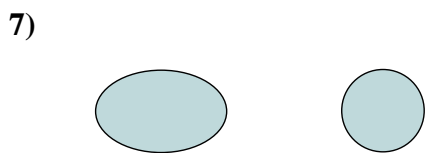
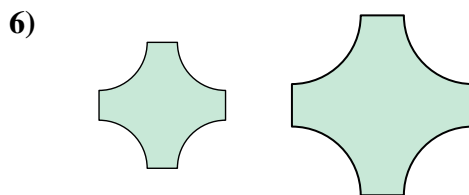

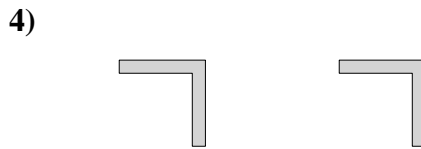
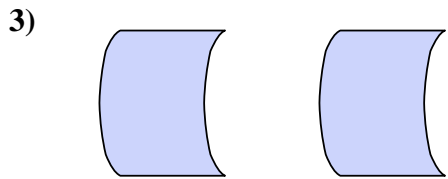
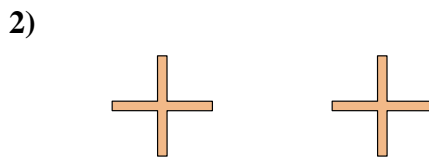
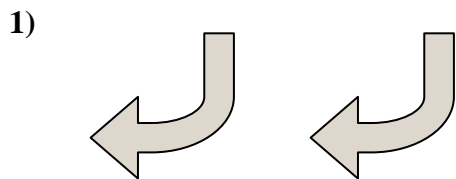
15. _____

16. _____



Determina si las figuras que se muestran son 'similares', 'congruentes' o 'ninguna'.

Respuestas



1. congruente

2. congruente

3. congruente

4. congruente

5. similar

6. similar

7. ninguno

8. similar

9. ninguno

10. ninguno

11. similar

12. congruente

13. similar

14. congruente

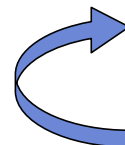


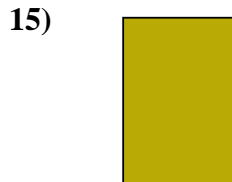
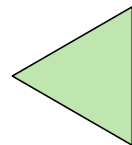
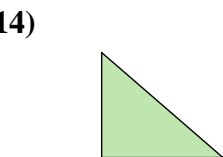
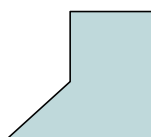
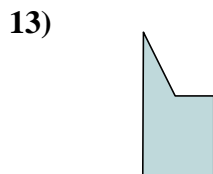

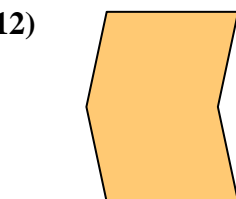
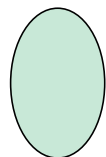
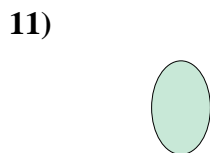
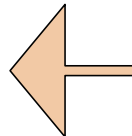
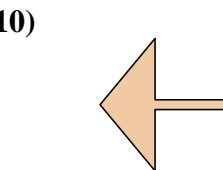
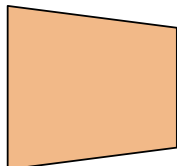
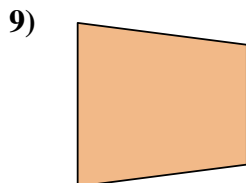
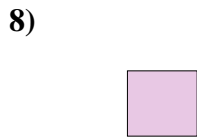



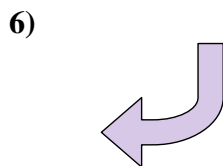
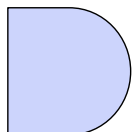
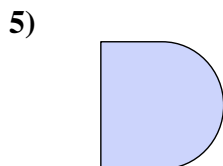
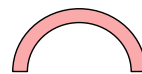
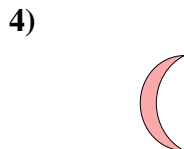
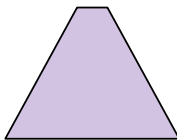
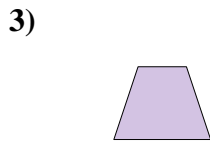
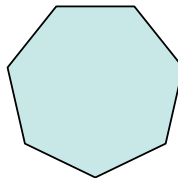
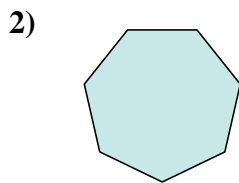
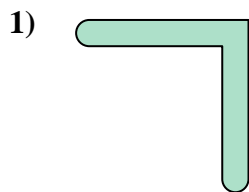
15. ninguno

16. ninguno



Determina si las figuras que se muestran son 'similares', 'congruentes' o 'ninguna'.

Respuestas



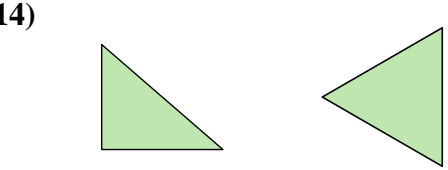
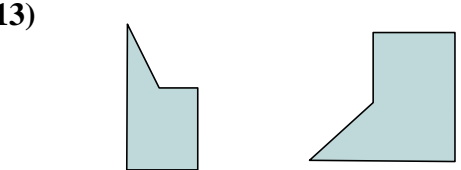
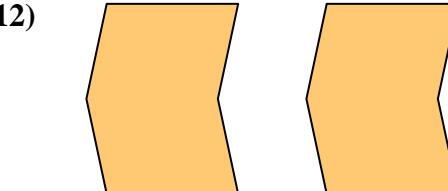
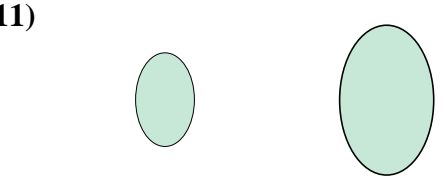
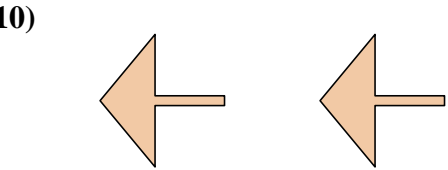
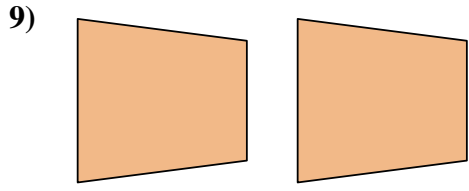
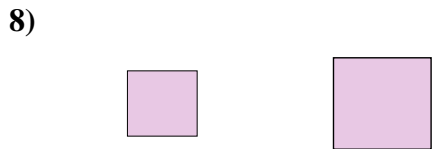
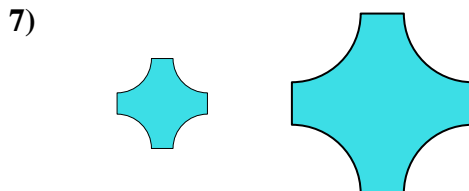
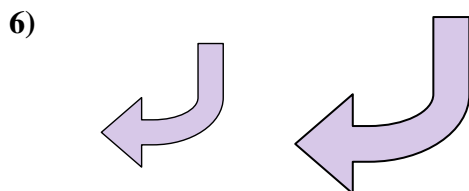
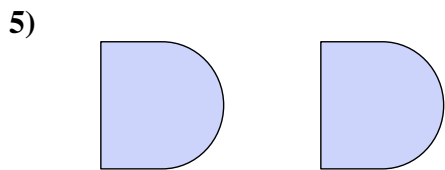

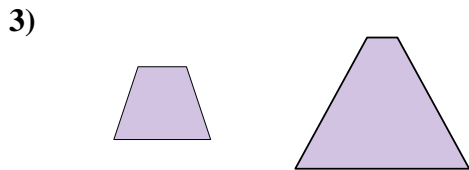
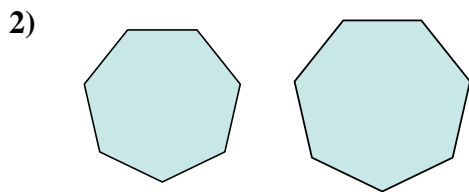
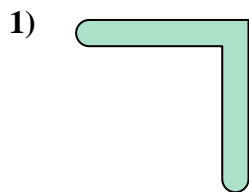


1. _____
2. _____
3. _____
4. _____
5. _____
6. _____
7. _____
8. _____
9. _____
10. _____
11. _____
12. _____
13. _____
14. _____
15. _____
16. _____



Determina si las figuras que se muestran son 'similares', 'congruentes' o 'ninguna'.

Respuestas



1. similar

2. similar

3. ninguno

4. ninguno

5. congruente

6. similar

7. similar

8. similar

9. congruente

10. congruente

11. similar

12. congruente

13. ninguno

14. ninguno

15. ninguno

16. ninguno



Determina si las figuras que se muestran son 'similares', 'congruentes' o 'ninguna'.

Respuestas

1)



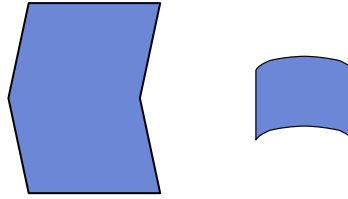
2)



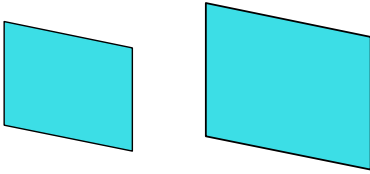
3)



4)



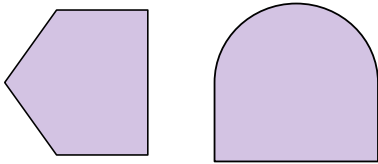
5)



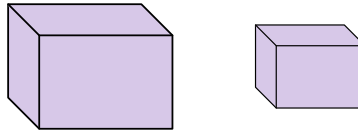
6)



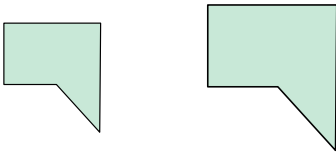
7)



8)



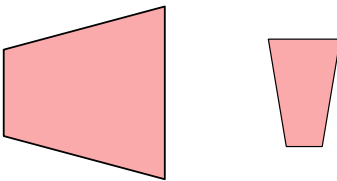
9)




10)



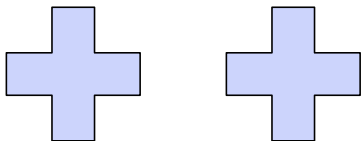
11)



12)



13)



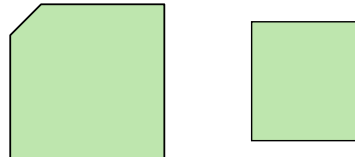
14)



15)



16)



1. _____

2. _____

3. _____

4. _____

5. _____

6. _____

7. _____

8. _____

9. _____

10. _____

11. _____

12. _____

13. _____

14. _____

15. _____


16. _____



Determina si las figuras que se muestran son 'similares', 'congruentes' o 'ninguna'.

Respuestas

1)



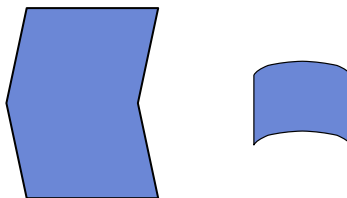
2)



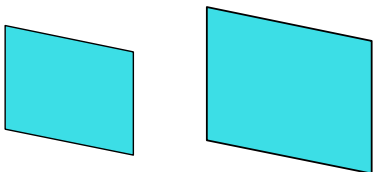
3)



4)



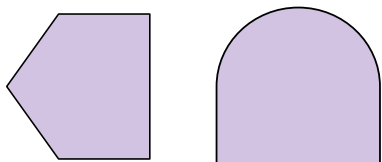
5)



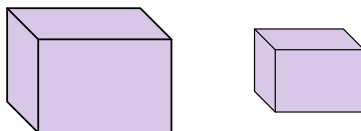
6)



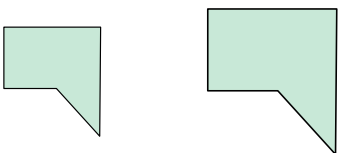
7)



8)



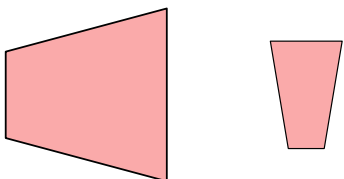
9)




10)



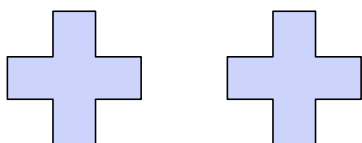
11)



12)



13)



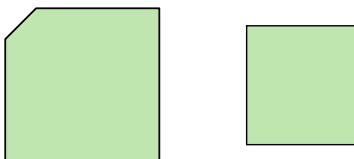
14)



15)



16)



1. similar

2. congruente

3. congruente

4. ninguno

5. similar

6. congruente

7. ninguno

8. similar

9. similar

10. congruente

11. ninguno

12. ninguno

13. congruente

14. congruente

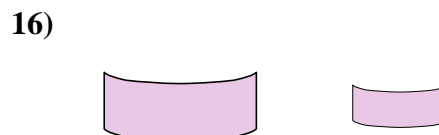
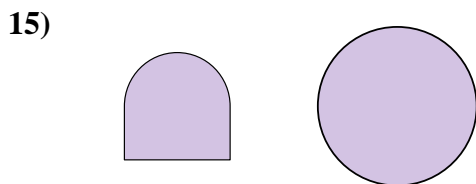



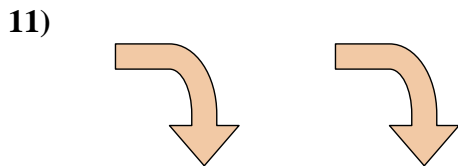
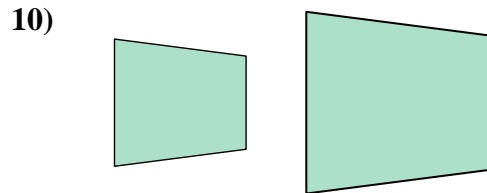
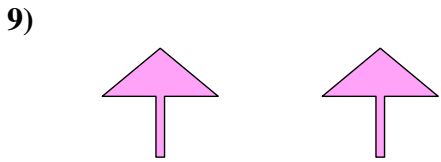

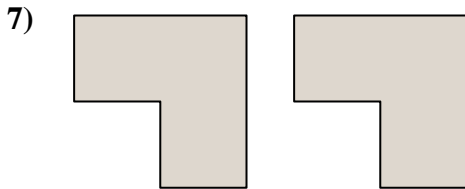
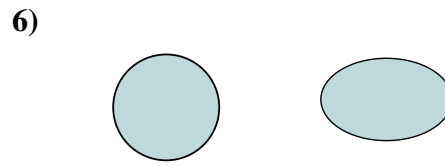

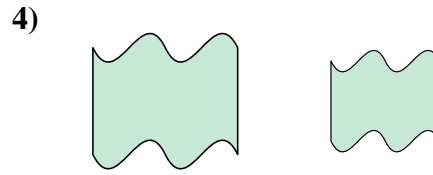

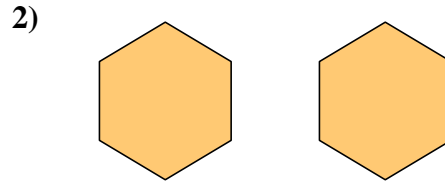
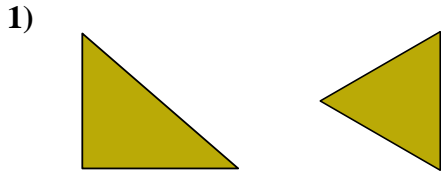
15. similar

16. ninguno



Determina si las figuras que se muestran son 'similares', 'congruentes' o 'ninguna'.

Respuestas

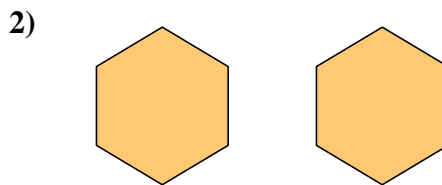
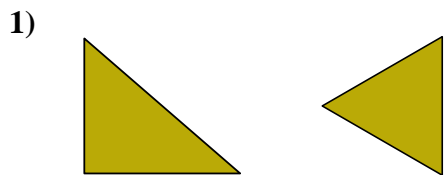


1. _____
2. _____
3. _____
4. _____
5. _____
6. _____
7. _____
8. _____
9. _____
10. _____
11. _____
12. _____
13. _____
14. _____
15. _____
16. _____

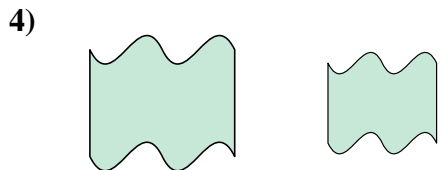



Determina si las figuras que se muestran son 'similares', 'congruentes' o 'ninguna'.

Respuestas





1. ninguno



2. congruente


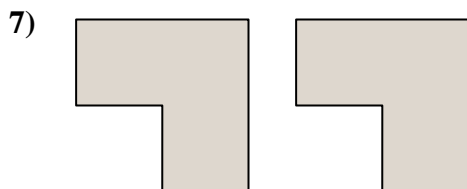
3. ninguno



4. similar

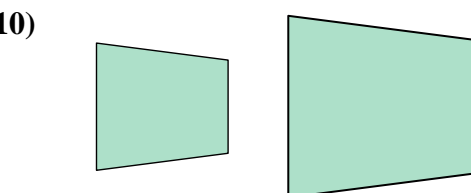
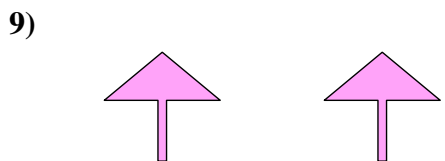
5. similar

6. ninguno




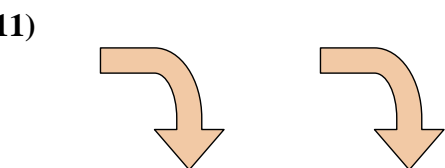
7. congruente

8. ninguno



9. congruente



10. similar



11. congruente

12. similar

13. similar



14. similar

15. ninguno

16. similar

