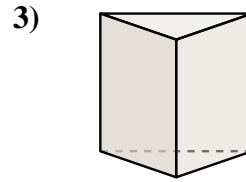

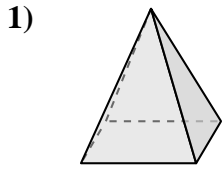




Determinar cuál de las opciones describe mejor la figura mostrada.

Respuestas

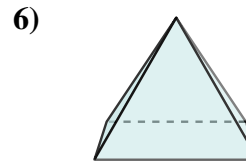
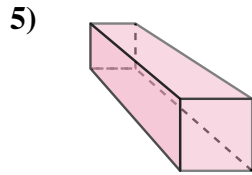
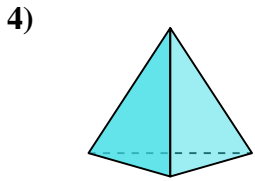


- 1) A. sphere
- B. rectangular prism
- C. rectangular pyramid
- D. cube

- 2) A. cylinder
- B. rectangular pyramid
- C. rectangular prism
- D. sphere

- 3) A. triangular prism
- B. cylinder
- C. sphere
- D. cube

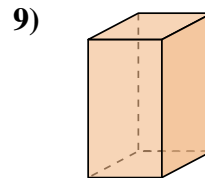
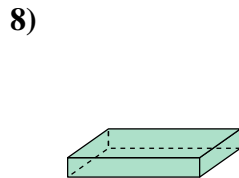
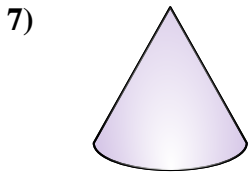
- 1. _____
- 2. _____
- 3. _____
- 4. _____
- 5. _____
- 6. _____
- 7. _____
- 8. _____
- 9. _____
- 10. _____
- 11. _____
- 12. _____



- 4) A. triangular pyramid
- B. cube
- C. rectangular pyramid
- D. sphere

- 5) A. rectangular prism
- B. sphere
- C. rectangular pyramid
- D. triangular pyramid

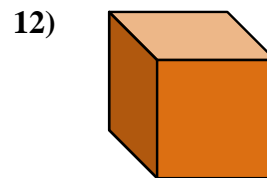
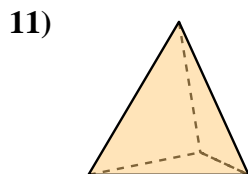
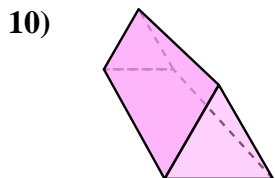
- 6) A. sphere
- B. cube
- C. rectangular pyramid
- D. triangular prism



- 7) A. cube
- B. cone
- C. triangular pyramid
- D. sphere

- 8) A. cylinder
- B. rectangular prism
- C. sphere
- D. cube

- 9) A. cone
- B. cylinder
- C. triangular prism
- D. rectangular prism



- 10) A. rectangular pyramid
- B. sphere
- C. triangular prism
- D. cylinder

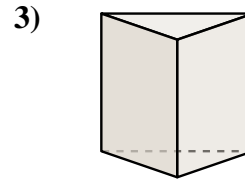

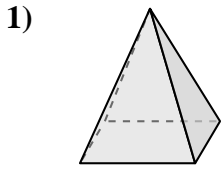
- 11) A. cube
- B. cylinder
- C. cone
- D. triangular pyramid

- 12) A. cube
- B. rectangular prism
- C. rectangular pyramid
- D. triangular pyramid



Determinar cuál de las opciones describe mejor la figura mostrada.

Respuestas



- 1) A. sphere
- B. rectangular prism
- C. rectangular pyramid
- D. cube

- 2) A. cylinder
- B. rectangular pyramid
- C. rectangular prism
- D. sphere

- 3) A. triangular prism
- B. cylinder
- C. sphere
- D. cube

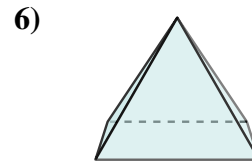
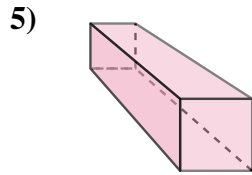
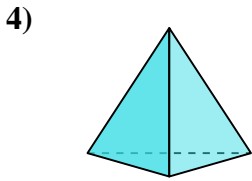
1. **C**

2. **D**

3. **A**

4. **A**

5. **A**



- 4) A. triangular pyramid
- B. cube
- C. rectangular pyramid
- D. sphere

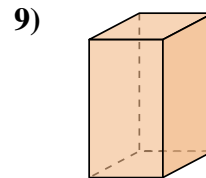
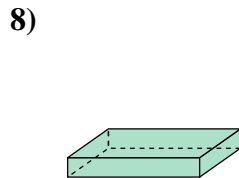
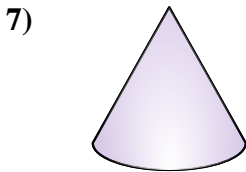
- 5) A. rectangular prism
- B. sphere
- C. rectangular pyramid
- D. triangular pyramid

- 6) A. sphere
- B. cube
- C. rectangular pyramid
- D. triangular prism

6. **C**

7. **B**

8. **B**



- 7) A. cube
- B. cone
- C. triangular pyramid
- D. sphere

- 8) A. cylinder
- B. rectangular prism
- C. sphere
- D. cube

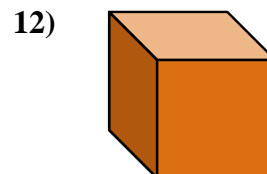
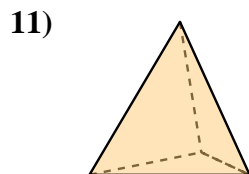
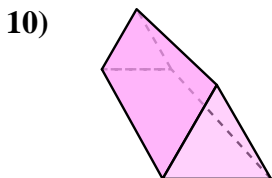
- 9) A. cone
- B. cylinder
- C. triangular prism
- D. rectangular prism

9. **D**

10. **C**

11. **D**

12. **A**



- 10) A. rectangular pyramid
- B. sphere
- C. triangular prism
- D. cylinder

- 11) A. cube
- B. cylinder
- C. cone
- D. triangular pyramid

- 12) A. cube
- B. rectangular prism
- C. rectangular pyramid
- D. triangular pyramid