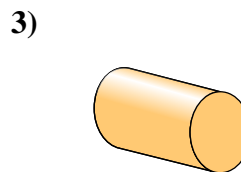
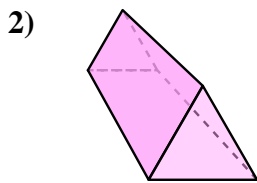
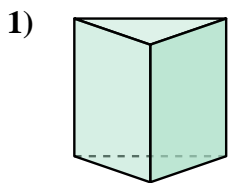




Determinar cuál de las opciones describe mejor la figura mostrada.

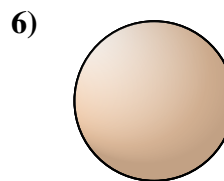
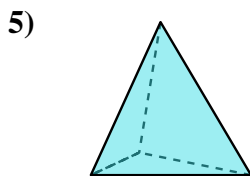
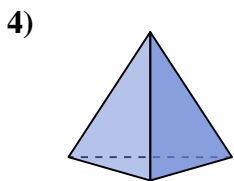
Respuestas



- 1) A. cylinder
- B. cube
- C. triangular pyramid
- D. triangular prism

- 2) A. triangular pyramid
- B. triangular prism
- C. cylinder
- D. sphere

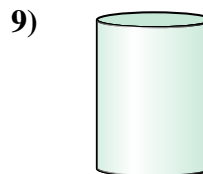
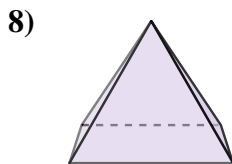
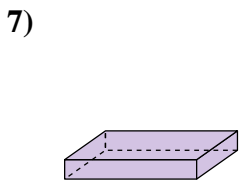
- 3) A. rectangular prism
- B. rectangular pyramid
- C. cylinder
- D. cone



- 4) A. rectangular prism
- B. sphere
- C. triangular pyramid
- D. cone

- 5) A. cone
- B. triangular pyramid
- C. rectangular prism
- D. cube

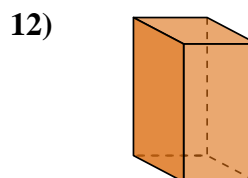
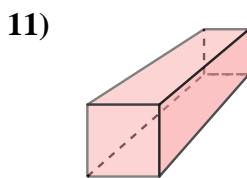
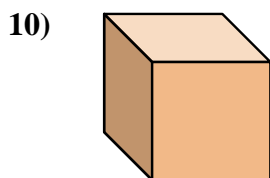
- 6) A. rectangular pyramid
- B. sphere
- C. rectangular prism
- D. cube



- 7) A. rectangular prism
- B. cone
- C. cube
- D. triangular prism

- 8) A. sphere
- B. rectangular pyramid
- C. cylinder
- D. triangular prism

- 9) A. cone
- B. triangular pyramid
- C. sphere
- D. cylinder



- 10) A. rectangular pyramid
- B. sphere
- C. cube
- D. cone

- 11) A. cone
- B. rectangular prism
- C. cube
- D. rectangular pyramid

- 12) A. sphere
- B. rectangular prism
- C. cylinder
- D. cube

- 1. _____
- 2. _____
- 3. _____
- 4. _____
- 5. _____
- 6. _____
- 7. _____
- 8. _____
- 9. _____
- 10. _____
- 11. _____
- 12. _____

