



Determina si cada triángulo es agudo (A), obtuso (O) o recto (R) y si es equilátero (E), isósceles (I) o escaleno (E).

**Acute Triangle:**

All angles are less than  $90^\circ$ .

**Obtuse Triangle:**

One angle is greater than  $90^\circ$ .

**Right Triangle:**

One angle is  $90^\circ$ .

**Equilateral Triangle:**

3 equal sides. 3 equal angles.

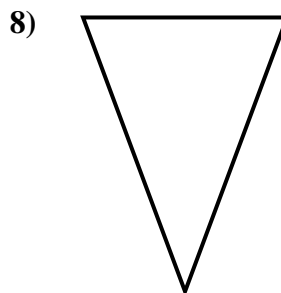
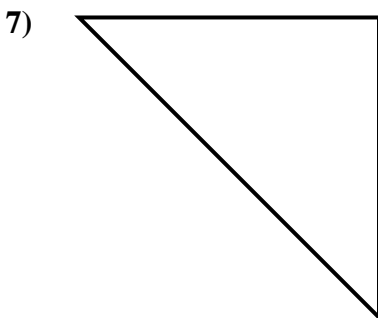
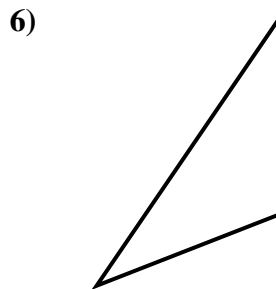
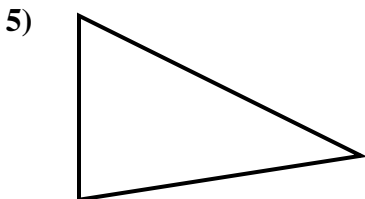
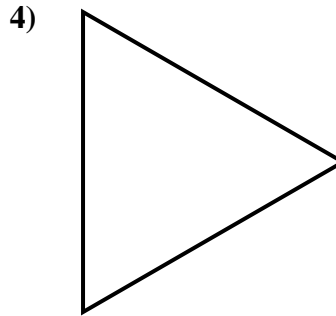
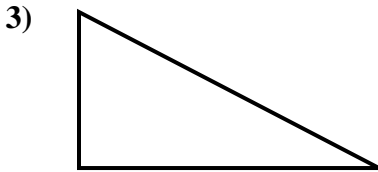
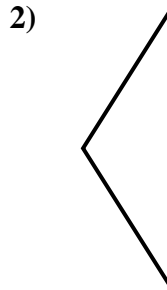
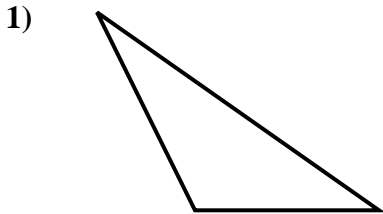
**Isosceles Triangle:**

2 equal sides. 2 equal angles.

**Scalene Triangle:**

No equal sides. No equal angles.

**Respuestas**



- 1. \_\_\_\_\_
- 2. \_\_\_\_\_
- 3. \_\_\_\_\_
- 4. \_\_\_\_\_
- 5. \_\_\_\_\_
- 6. \_\_\_\_\_
- 7. \_\_\_\_\_
- 8. \_\_\_\_\_



Determina si cada triángulo es agudo (A), obtuso (O) o recto (R) y si es equilátero (E), isósceles (I) o escaleno (E).

**Acute Triangle:**

All angles are less than  $90^\circ$ .

**Obtuse Triangle:**

One angle is greater than  $90^\circ$ .

**Right Triangle:**

One angle is  $90^\circ$ .

**Equilateral Triangle:**

3 equal sides. 3 equal angles.

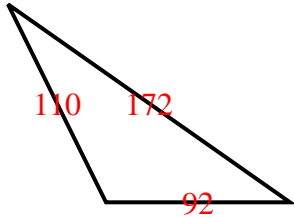
**Isosceles Triangle:**

2 equal sides. 2 equal angles.

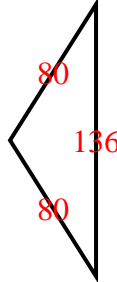
**Scalene Triangle:**

No equal sides. No equal angles.

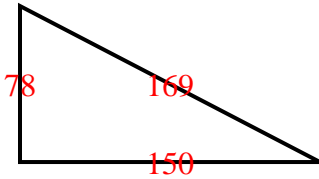
1)



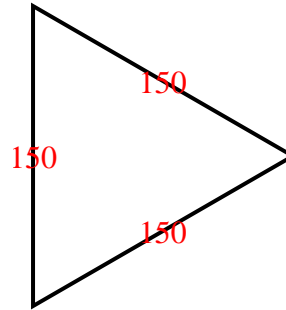
2)



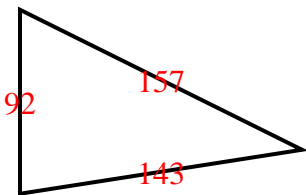
3)



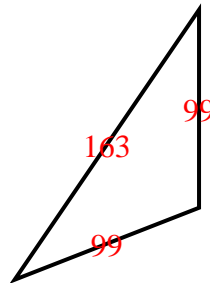
4)



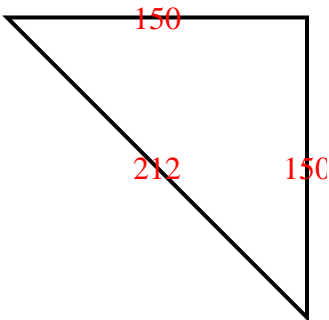
5)



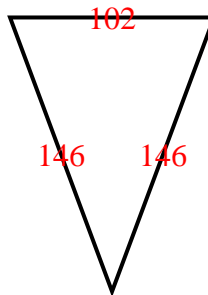
6)



7)



8)



**Respuestas**

1. **OS**

2. **OI**

3. **RS**

4. **AE**

5. **AS**

6. **OI**

7. **RI**

8. **AI**