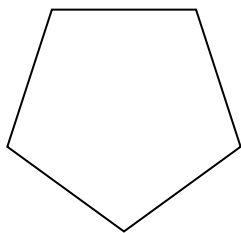




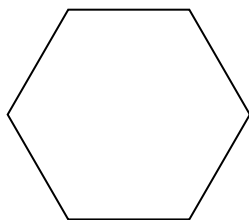
Determinar si la figura mostrada es una forma regular o irregular.

## Respuestas

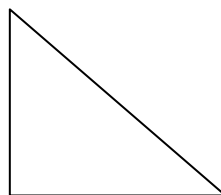
1)



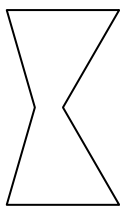
2)



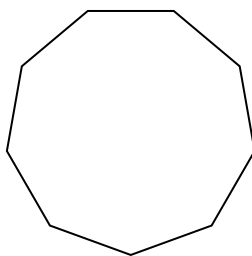
3)



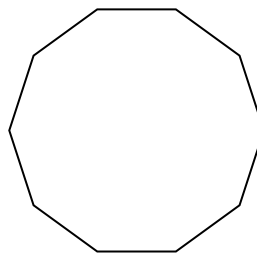
4)




5)




6)



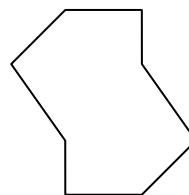
7)




8)



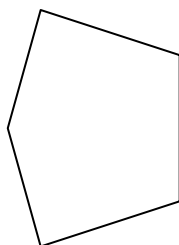
9)




10)



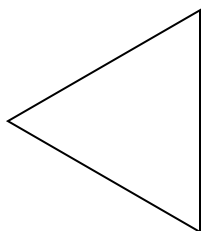
11)



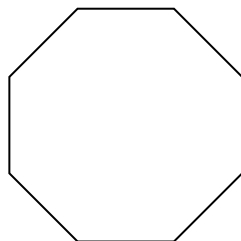
12)



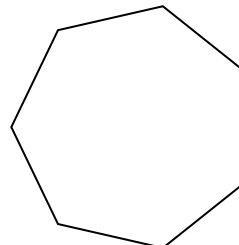
13)



14)



15)



1. \_\_\_\_\_

2. \_\_\_\_\_

3. \_\_\_\_\_

4. \_\_\_\_\_

5. \_\_\_\_\_

6. \_\_\_\_\_

7. \_\_\_\_\_

8. \_\_\_\_\_

9. \_\_\_\_\_

10. \_\_\_\_\_

11. \_\_\_\_\_

12. \_\_\_\_\_

13. \_\_\_\_\_

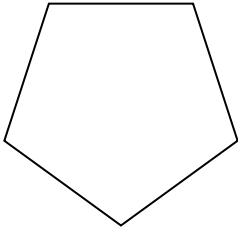
14. \_\_\_\_\_

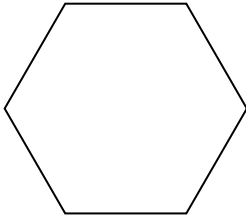
15. \_\_\_\_\_

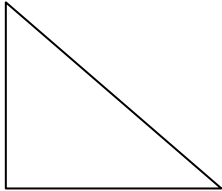


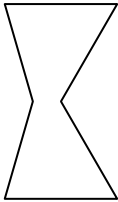
Determinar si la figura mostrada es una forma regular o irregular.

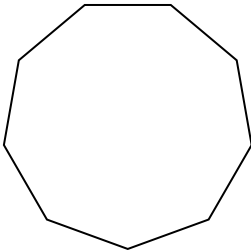
**Respuestas**

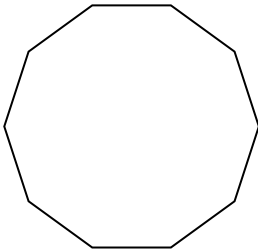
1)


2)


3)

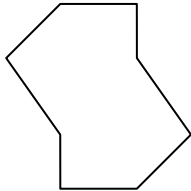
4)


5)

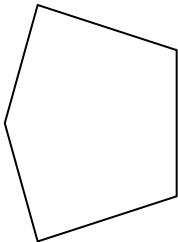
6)


7)

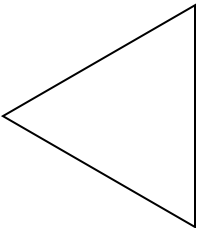
8)

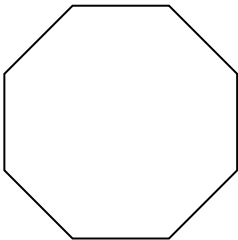
9)

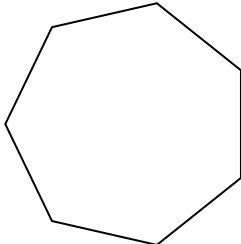
10)

11)

12)

13)

14)

15)

1. **Regular**
2. **Regular**
3. **Irregular**
4. **Irregular**
5. **Regular**
6. **Regular**
7. **Irregular**
8. **Irregular**
9. **Irregular**
10. **Regular**
11. **Irregular**
12. **Irregular**
13. **Regular**
14. **Regular**
15. **Regular**