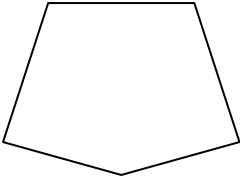





Determinar si la figura mostrada es una forma regular o irregular.

**Respuestas**


1)



2)




3)

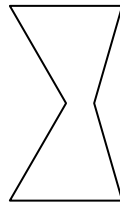


1. \_\_\_\_\_

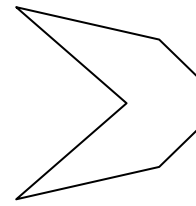
4)



5)



6)



2. \_\_\_\_\_

3. \_\_\_\_\_

4. \_\_\_\_\_

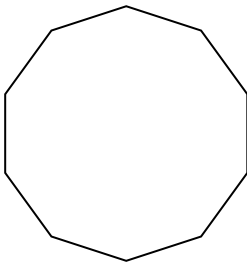
5. \_\_\_\_\_

6. \_\_\_\_\_

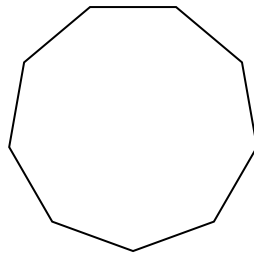
7. \_\_\_\_\_

8. \_\_\_\_\_

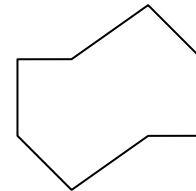
7)



8)



9)



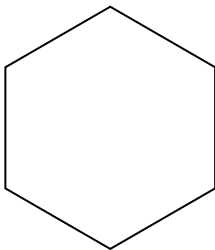
9. \_\_\_\_\_

10. \_\_\_\_\_

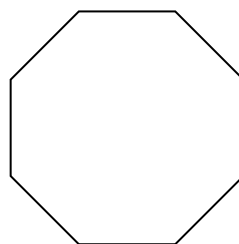
11. \_\_\_\_\_

12. \_\_\_\_\_

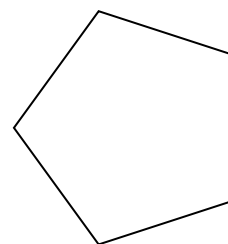
10)



11)



12)




13. \_\_\_\_\_

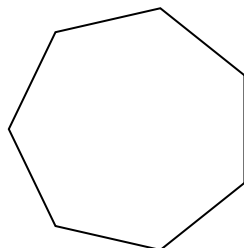
14. \_\_\_\_\_

15. \_\_\_\_\_


13)



14)



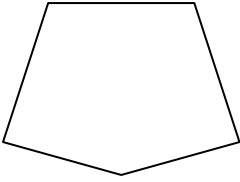
15)






Determinar si la figura mostrada es una forma regular o irregular.


1)




2)



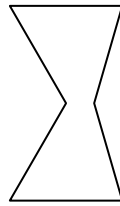
3)



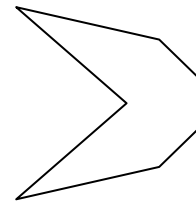
4)



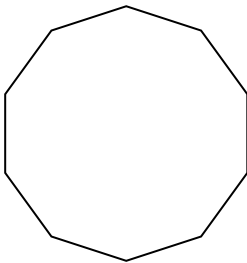
5)



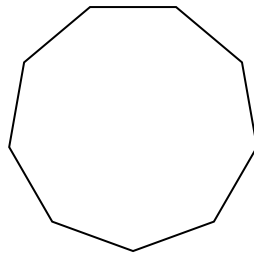
6)



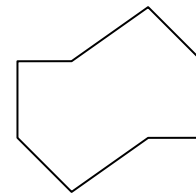
7)



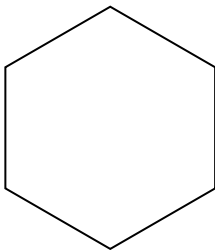
8)



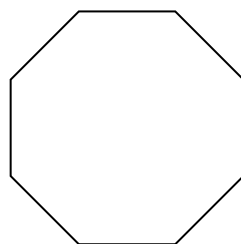
9)



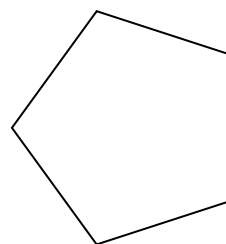
10)




11)



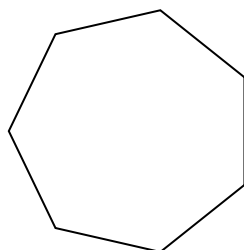
12)




13)



14)



15)



**Respuestas**

1. **Irregulare**

2. **Irregulare**

3. **Regulare**

4. **Irregulare**

5. **Irregulare**

6. **Irregulare**

7. **Regulare**

8. **Regulare**

9. **Irregulare**

10. **Regulare**

11. **Regulare**

12. **Regulare**

13. **Irregulare**

14. **Regulare**

15. **Irregulare**