




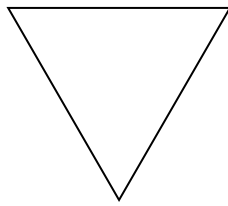
Determinar si la figura mostrada es una forma regular o irregular.

**Respuestas**

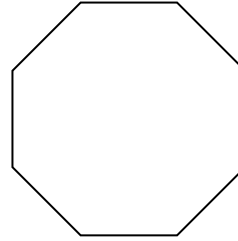
1)



2)



3)



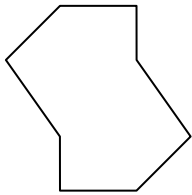
1. \_\_\_\_\_

2. \_\_\_\_\_

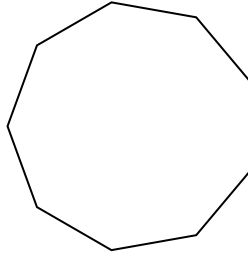
3. \_\_\_\_\_

4. \_\_\_\_\_

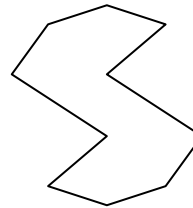
4)



5)



6)




5. \_\_\_\_\_

6. \_\_\_\_\_


7. \_\_\_\_\_

8. \_\_\_\_\_

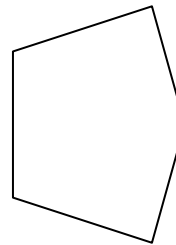
7)



8)



9)




9. \_\_\_\_\_

10. \_\_\_\_\_

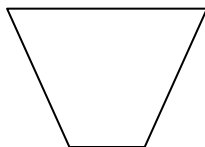
11. \_\_\_\_\_

12. \_\_\_\_\_

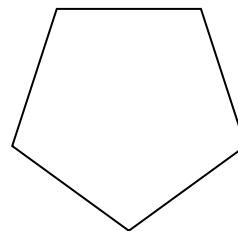
10)



11)



12)

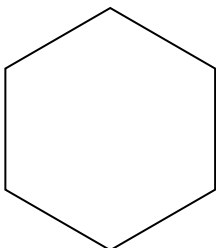


13. \_\_\_\_\_

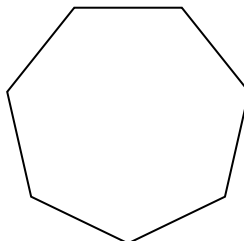
14. \_\_\_\_\_

15. \_\_\_\_\_

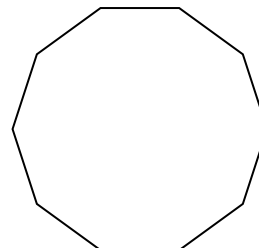
13)



14)




15)



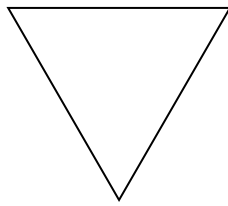


Determinar si la figura mostrada es una forma regular o irregular.

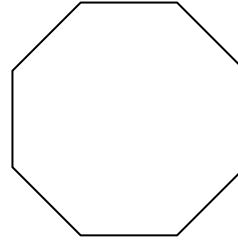
1)



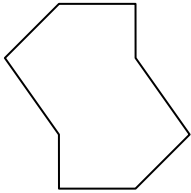
2)



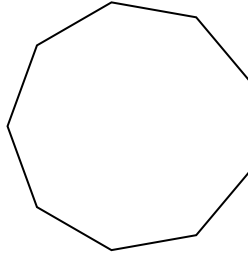
3)




4)




5)




6)



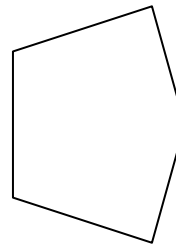
7)




8)



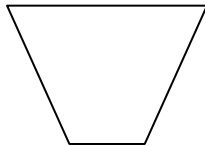
9)



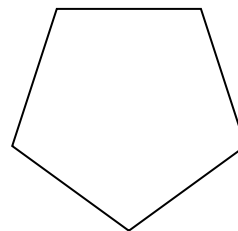
10)



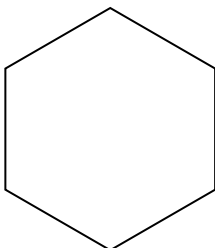
11)



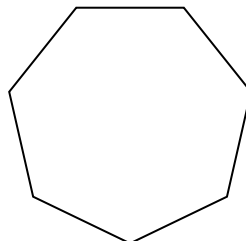
12)



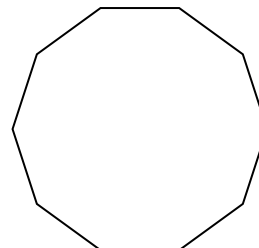
13)



14)



15)



**Respuestas**

1. Regulare

2. Regulare

3. Regulare

4. Irregulare

5. Regulare

6. Irregulare

7. Irregulare

8. Irregulare

9. Irregulare

10. Irregulare

11. Irregulare

12. Regulare

13. Regulare

14. Regulare

15. Regulare