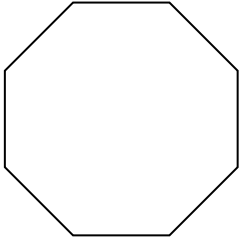




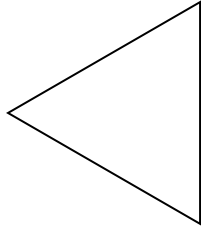
Determinar si la figura mostrada es una forma regular o irregular.

Respuestas

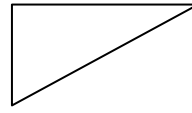
1)



2)

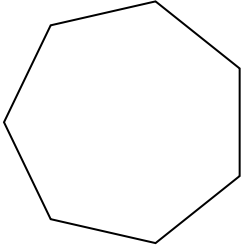


3)

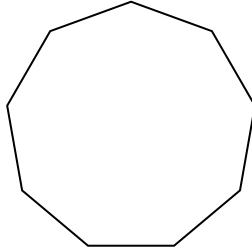


1. _____


4)



5)



6)



2. _____

3. _____

4. _____

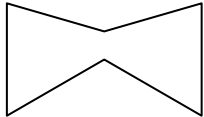
5. _____

6. _____

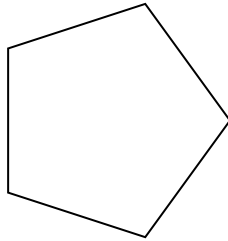
7. _____

8. _____


7)



8)



9)




9. _____

10. _____

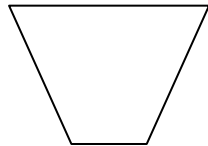
11. _____

12. _____


10)



11)



12)




13. _____


14. _____

15. _____

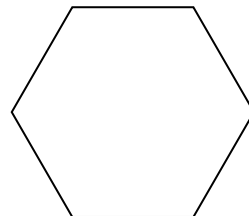
13)



14)



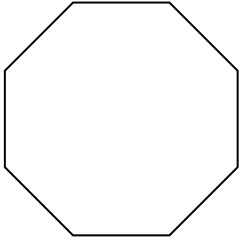
15)



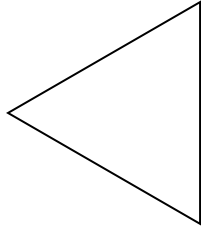


Determinar si la figura mostrada es una forma regular o irregular.

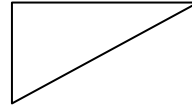
1)



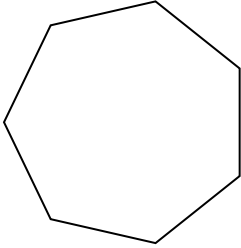
2)



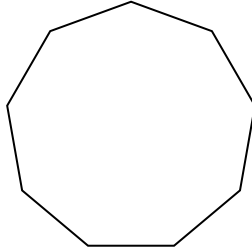
3)




4)



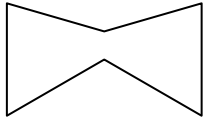
5)



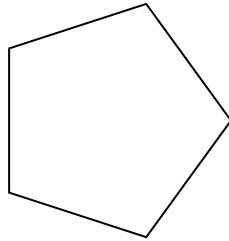
6)




7)




8)



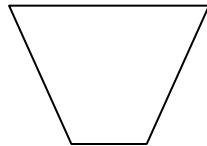
9)




10)




11)




12)



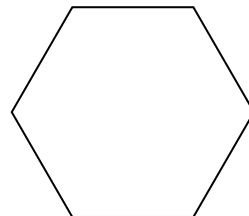
13)



14)



15)



Respuestas

1. Regulare

2. Regulare

3. Irregulare

4. Regulare

5. Regulare

6. Irregulare

7. Irregulare

8. Regulare

9. Irregulare

10. Regulare

11. Irregulare

12. Irregulare

13. Irregulare

14. Irregulare

15. Regulare