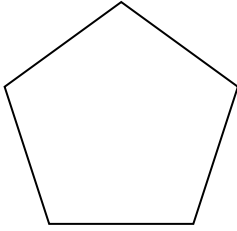




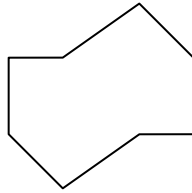
Determinar si la figura mostrada es una forma regular o irregular.

Respuestas


1)



2)

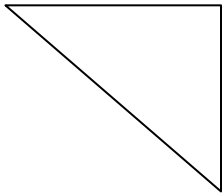


3)

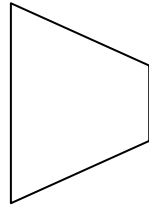


1. _____

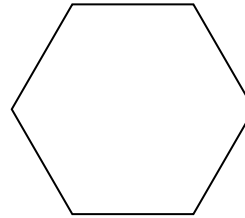
4)



5)




6)




2. _____

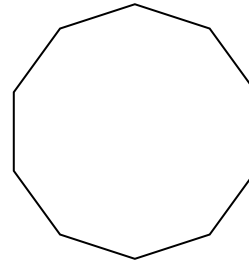
7)



8)



9)



3. _____

4. _____

5. _____

6. _____

7. _____

8. _____

9. _____

10. _____

11. _____

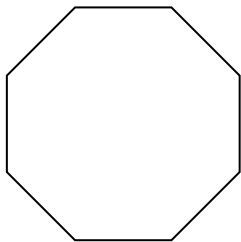
12. _____

13. _____


14. _____

15. _____

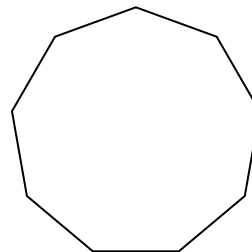
10)



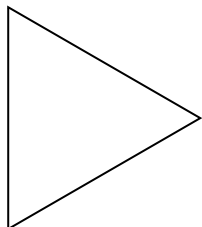
11)




12)



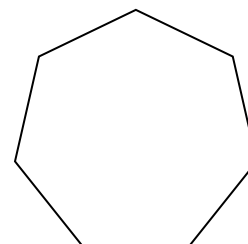
13)



14)



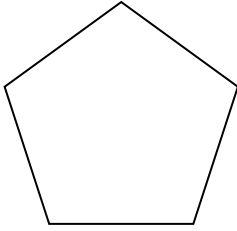
15)



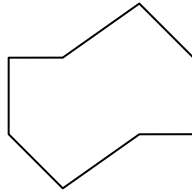


Determinar si la figura mostrada es una forma regular o irregular.


1)



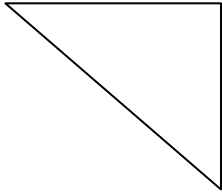
2)



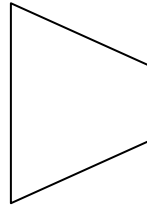
3)



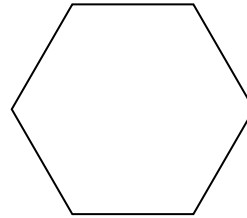
4)




5)




6)



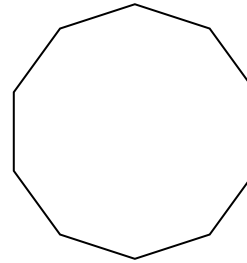
7)



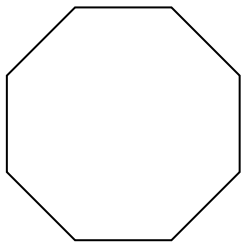
8)




9)



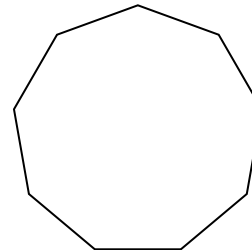
10)



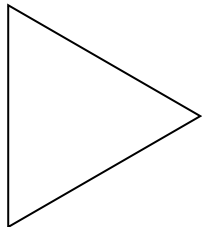
11)




12)



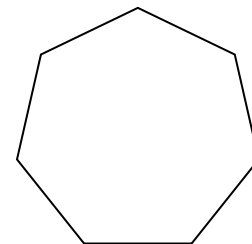
13)



14)



15)



Respuestas

1. Regulare

2. Irregulare

3. Regulare

4. Irregulare

5. Irregulare

6. Regulare

7. Irregulare

8. Irregulare

9. Regulare

10. Regulare

11. Irregulare

12. Regulare

13. Regulare

14. Irregulare

15. Regulare