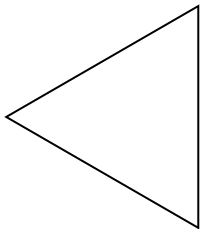


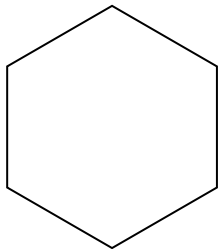


Determinar si la figura mostrada es una forma regular o irregular.


1)



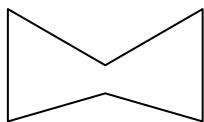
2)




3)



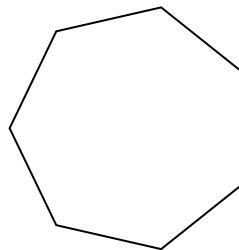
4)



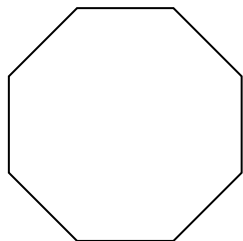
5)




6)



7)



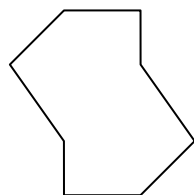
8)



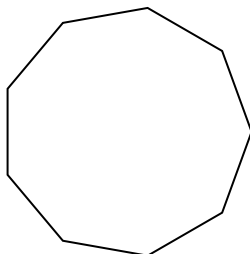
9)



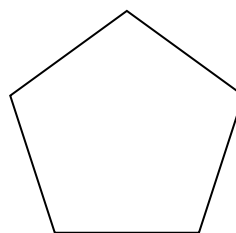
10)




11)




12)



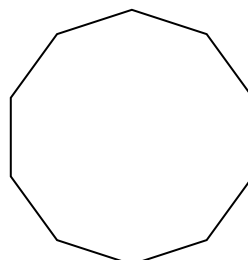
13)



14)



15)



**Respuestas**

1. \_\_\_\_\_

2. \_\_\_\_\_

3. \_\_\_\_\_

4. \_\_\_\_\_

5. \_\_\_\_\_

6. \_\_\_\_\_

7. \_\_\_\_\_

8. \_\_\_\_\_

9. \_\_\_\_\_

10. \_\_\_\_\_

11. \_\_\_\_\_

12. \_\_\_\_\_

13. \_\_\_\_\_

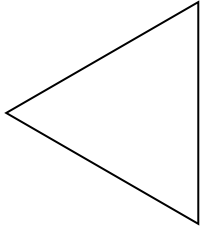
14. \_\_\_\_\_

15. \_\_\_\_\_

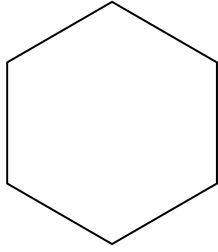


Determinar si la figura mostrada es una forma regular o irregular.


1)



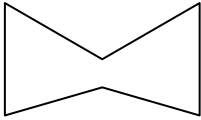
2)




3)



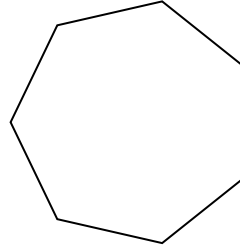
4)



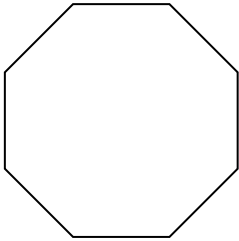
5)




6)



7)



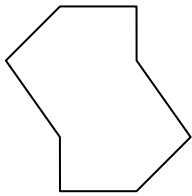
8)



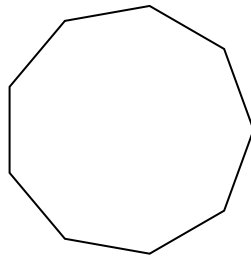
9)



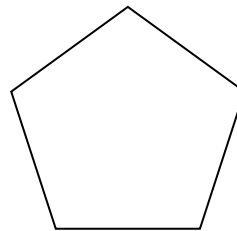
10)



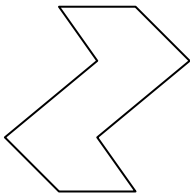
11)




12)



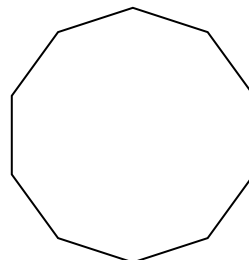
13)



14)



15)



**Respuestas**

1. Regulare

2. Regulare

3. Irregulare

4. Irregulare

5. Irregulare

6. Regulare

7. Regulare

8. Regulare

9. Irregulare

10. Irregulare

11. Regulare

12. Regulare

13. Irregulare

14. Irregulare

15. Regulare