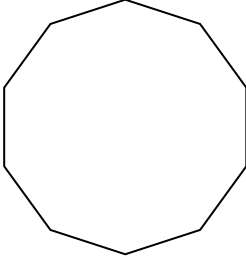



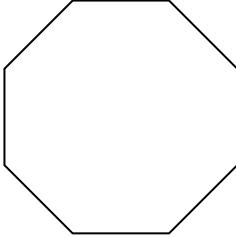


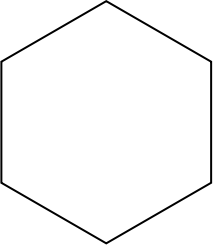
Determinar si la figura mostrada es una forma regular o irregular.


**Respuestas**

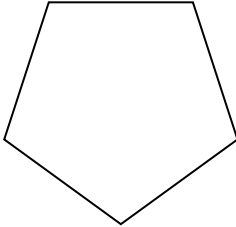
1)


2)

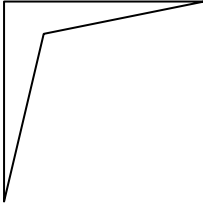
3)

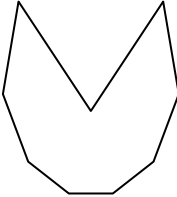
4)

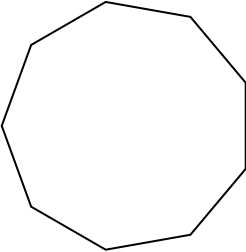
5)

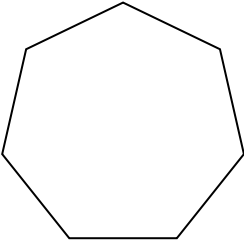
6)

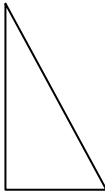
7)


8)


9)


10)

11)

12)

13)

14)

15)

1. \_\_\_\_\_

2. \_\_\_\_\_

3. \_\_\_\_\_

4. \_\_\_\_\_

5. \_\_\_\_\_

6. \_\_\_\_\_

7. \_\_\_\_\_

8. \_\_\_\_\_

9. \_\_\_\_\_

10. \_\_\_\_\_

11. \_\_\_\_\_

12. \_\_\_\_\_

13. \_\_\_\_\_

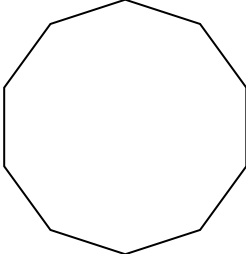
14. \_\_\_\_\_


15. \_\_\_\_\_

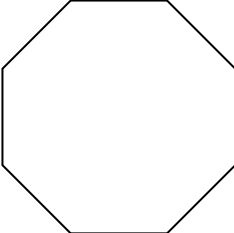


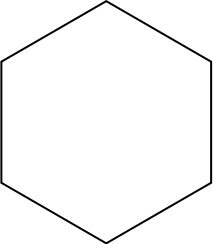
Determinar si la figura mostrada es una forma regular o irregular.


**Respuestas**

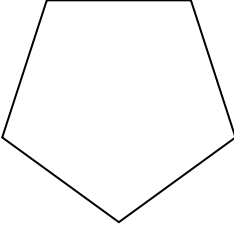
1)


2)

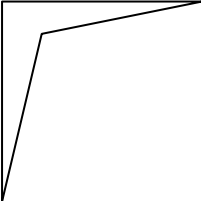
3)

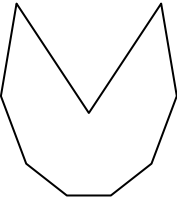
4)

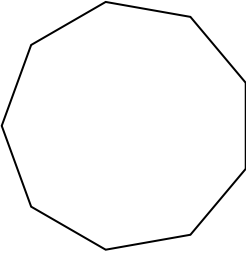
5)

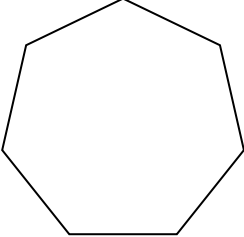
6)

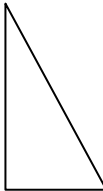
7)


8)


9)


10)

11)

12)

13)

14)

15)

1. Regulare
2. Irregulare
3. Regulare
4. Regulare
5. Irregulare
6. Regulare
7. Irregulare
8. Irregulare
9. Irregulare
10. Regulare
11. Regulare
12. Irregulare
13. Regulare
14. Irregulare
15. Irregulare