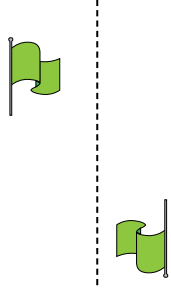




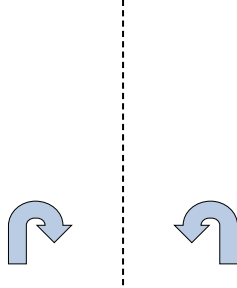
Determinar si la figura se está trasladando (deslizando), rotando (girando) o reflejando (volteando)

**Respuestas**

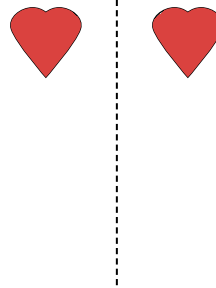
1)



2)



3)



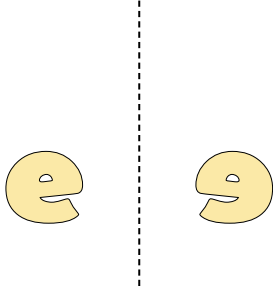
1. \_\_\_\_\_

2. \_\_\_\_\_


3. \_\_\_\_\_

4. \_\_\_\_\_

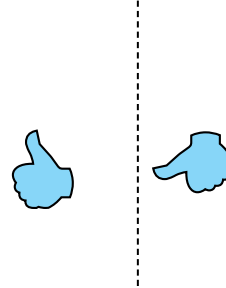
4)



5)



6)



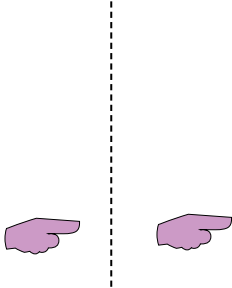
5. \_\_\_\_\_

6. \_\_\_\_\_

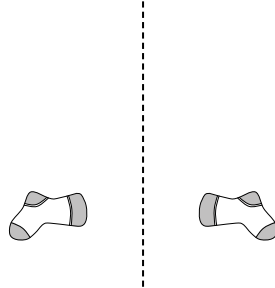
7. \_\_\_\_\_

8. \_\_\_\_\_

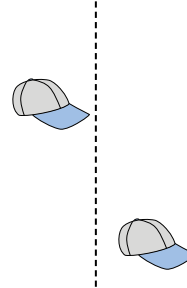
7)



8)



9)



9. \_\_\_\_\_

10. \_\_\_\_\_

11. \_\_\_\_\_

12. \_\_\_\_\_

10)



11)



12)



13. \_\_\_\_\_

14. \_\_\_\_\_

15. \_\_\_\_\_

13)



14)

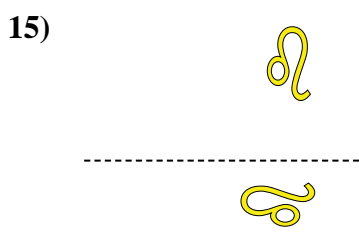
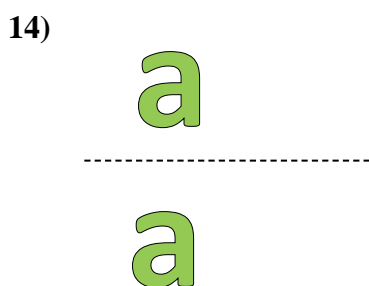

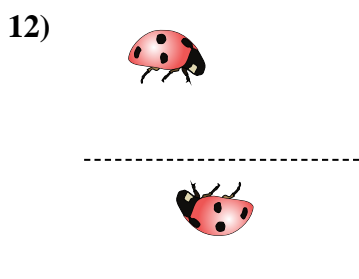
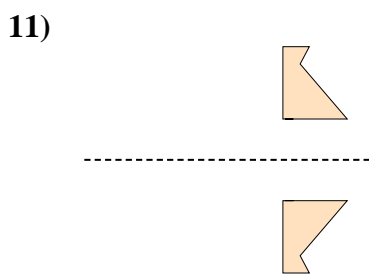
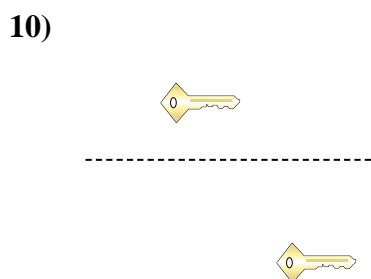
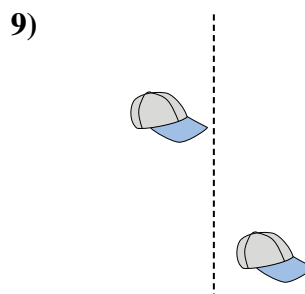
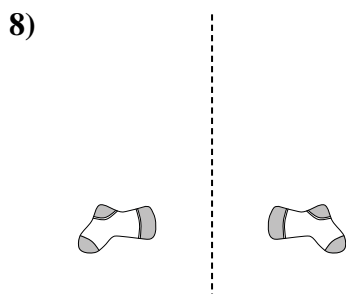
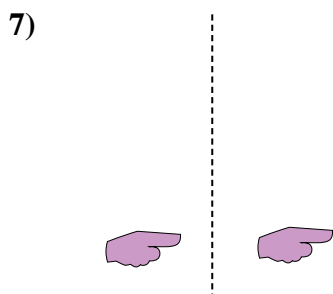
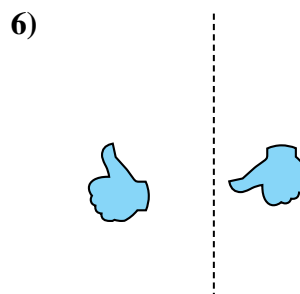
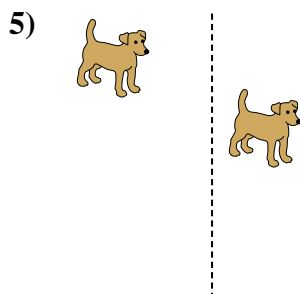
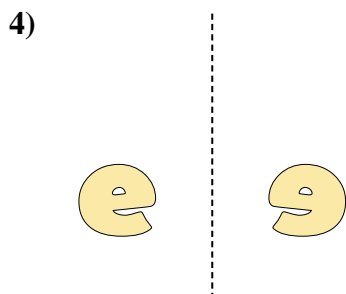
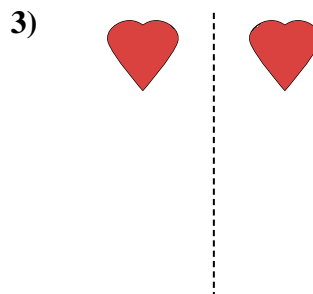
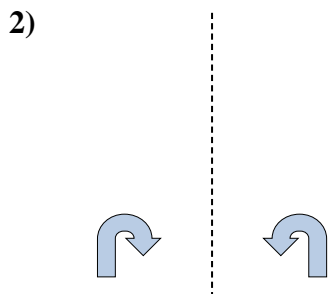
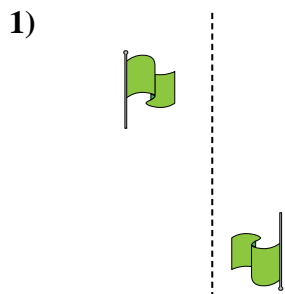


15)





Determinar si la figura se está trasladando (deslizando), rotando (girando) o reflejando (volteando)



**Respuestas**

1. girando
2. volteando
3. volteando
4. volteando
5. deslizando
6. girando
7. deslizando
8. volteando
9. deslizando
10. deslizando
11. volteando
12. girando
13. girando
14. deslizando
15. girando