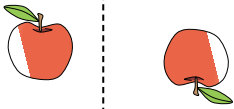




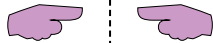
Determinar si la figura se está trasladando (deslizando), rotando (girando) o reflejando (volteando)

Respuestas


1)



2)



3)



1. _____

2. _____

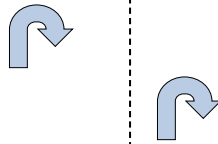
3. _____

4. _____

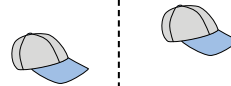
4)



5)



6)



5. _____

6. _____


7. _____

8. _____

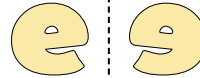
7)



8)



9)



9. _____

10. _____

11. _____

12. _____

10)



11)



12)



13. _____

14. _____

15. _____



13)



14)



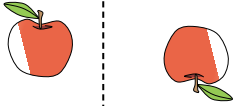
15)



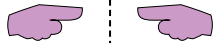


Determinar si la figura se está trasladando (deslizando), rotando (girando) o reflejando (volteando)

1)



2)



3)



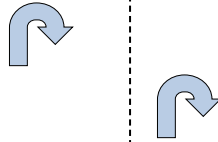
1.

girando

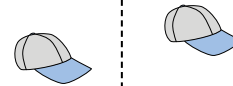
4)



5)



6)



2.

volteando

3.

girando

4.

volteando

5.

deslizando

6.

deslizando


7.

deslizando


8.

volteando

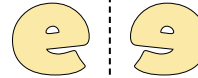
7)



8)



9)



9.

volteando

10.

girando

11.

girando

12.

girando

10)



11)



12)



13.

volteando

14.

deslizando

15.

deslizando

13)



14)



15)

