





Determinar si la figura se está trasladando (deslizando), rotando (girando) o reflejando (volteando)

Respuestas


1)



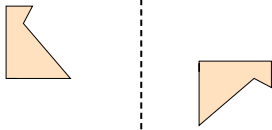
2)



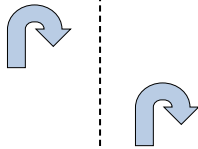
3)



4)



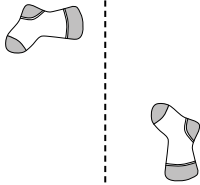
5)



6)



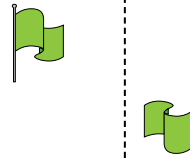
7)




8)



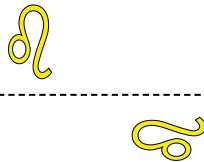
9)




10)



11)




12)



13)



14)



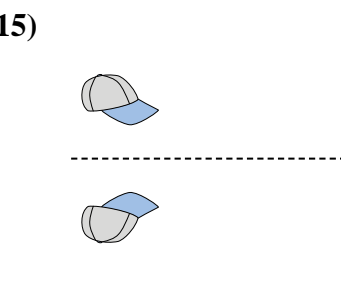
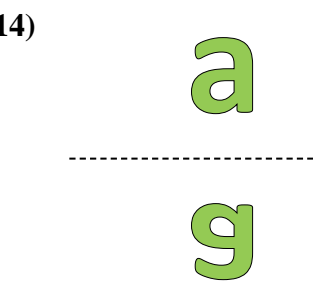
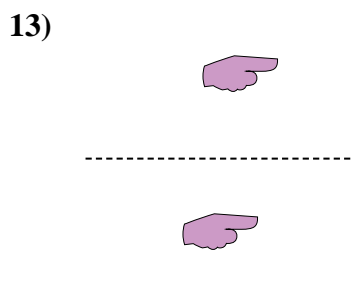
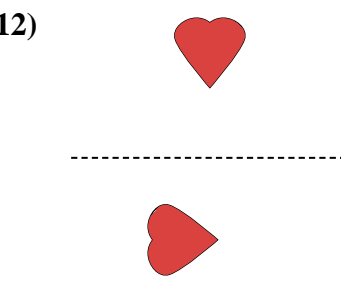
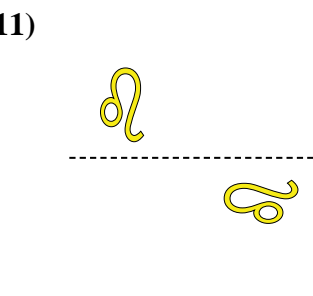
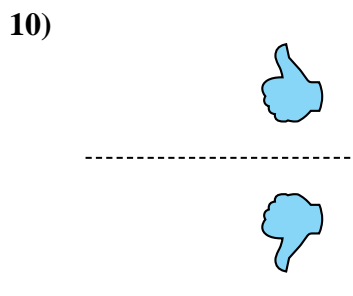
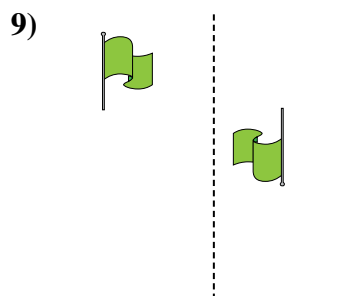
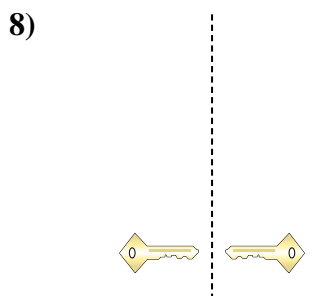
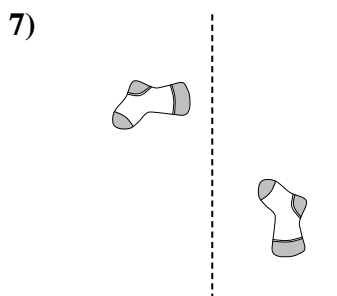
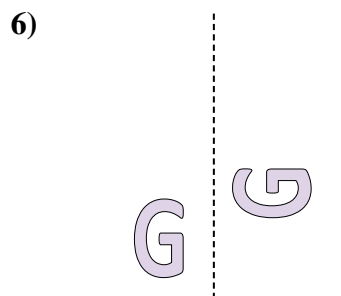
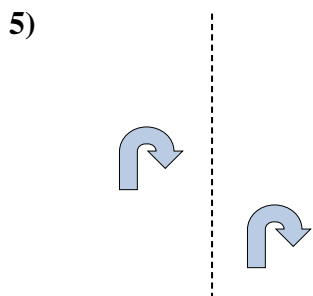
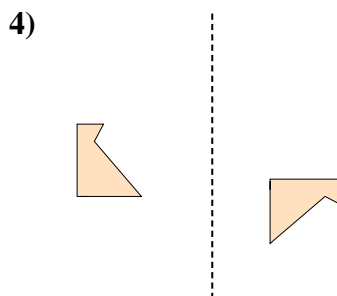
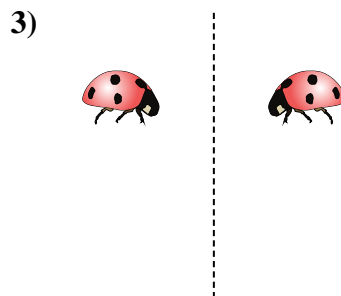
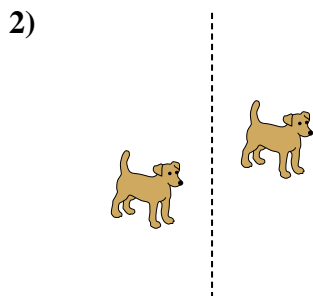
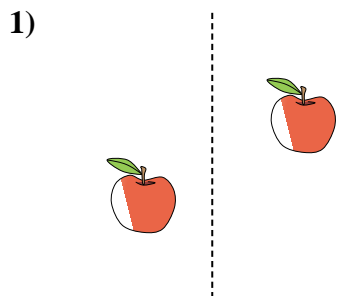
15)



1. _____
2. _____
3. _____
4. _____
5. _____
6. _____
7. _____
8. _____
9. _____
10. _____
11. _____
12. _____
13. _____
14. _____
15. _____



Determinar si la figura se está trasladando (deslizando), rotando (girando) o reflejando (volteando)



Respuestas

1. deslizando
2. deslizando
3. volteando
4. girando
5. deslizando
6. girando
7. girando
8. volteando
9. girando
10. volteando
11. girando
12. girando
13. deslizando
14. volteando
15. volteando