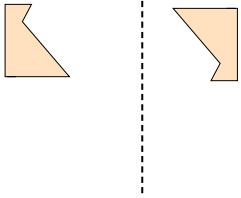




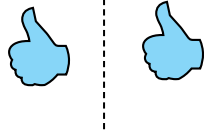
Determinar si la figura se está trasladando (deslizando), rotando (girando) o reflejando (volteando)

Respuestas

1)



2)



3)



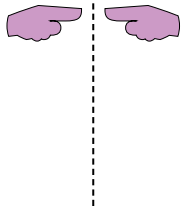
1. _____

2. _____

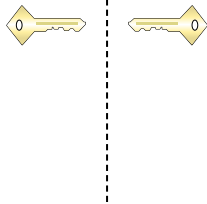
3. _____

4. _____

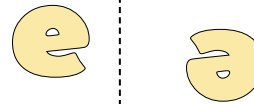
4)



5)



6)



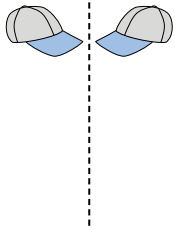
5. _____

6. _____

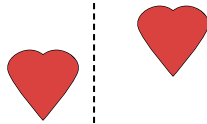
7. _____

8. _____

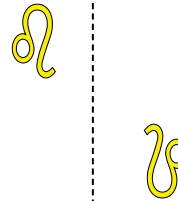
7)



8)



9)



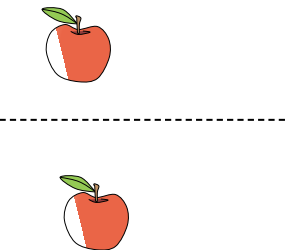
9. _____

10. _____

11. _____

12. _____

10)



11)



12)



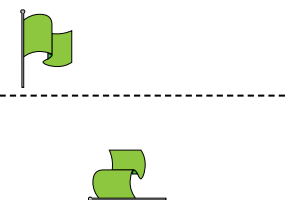
13. _____

14. _____

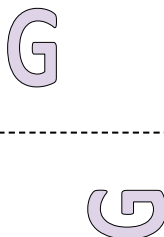
15. _____




13)



14)

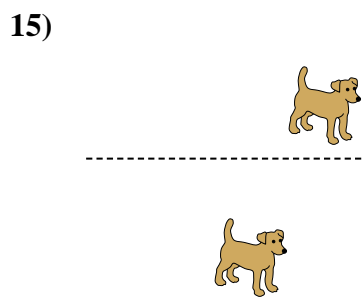
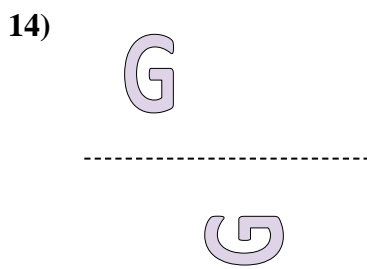
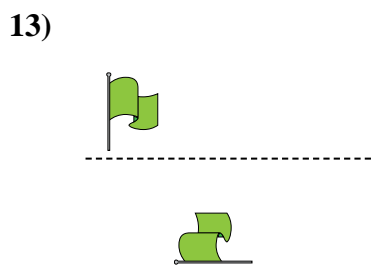
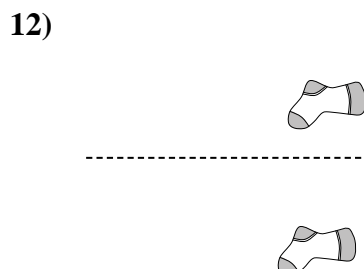
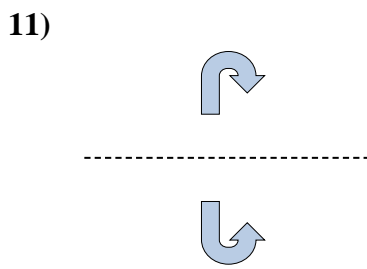
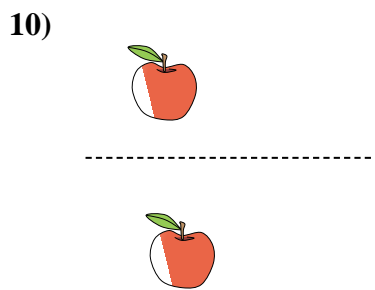
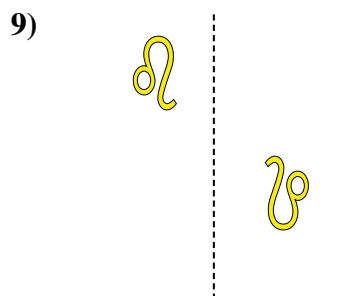

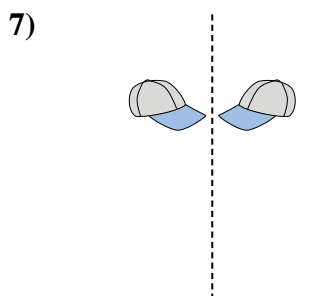
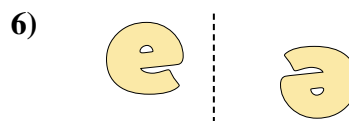
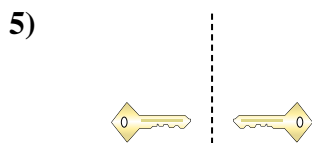
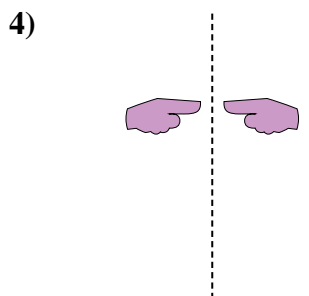

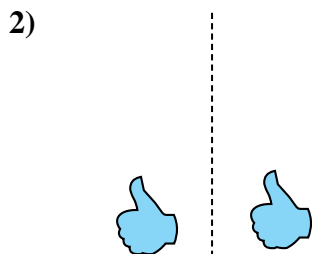
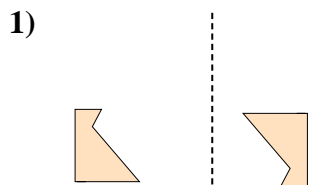


15)





Determinar si la figura se está trasladando (deslizando), rotando (girando) o reflejando (volteando)



Respuestas

1. girando

2. deslizando

3. volteando

4. volteando

5. volteando

6. girando

7. volteando

8. deslizando

9. girando

10. deslizando

11. volteando

12. deslizando

13. girando

14. girando

15. deslizando