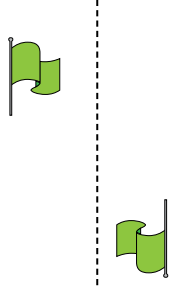




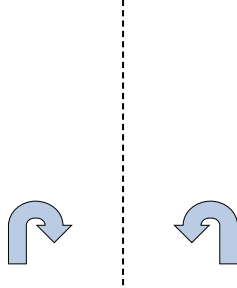
Determinar si la figura se está trasladando (deslizando), rotando (girando) o reflejando (volteando)

Respuestas

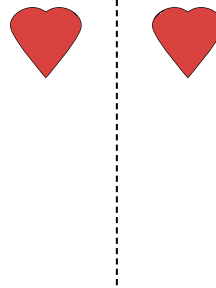
1)



2)



3)



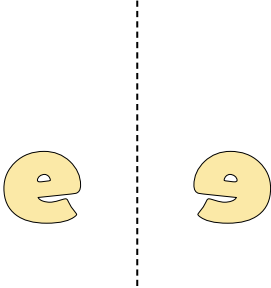
1. _____

2. _____


3. _____

4. _____

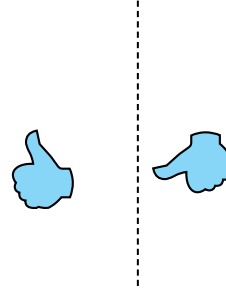
4)



5)



6)



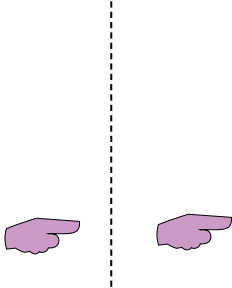
5. _____

6. _____

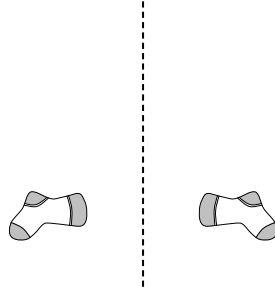
7. _____

8. _____

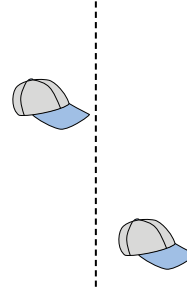
7)



8)



9)



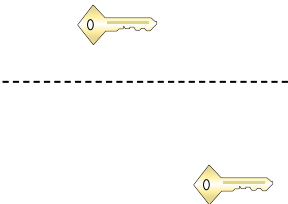
9. _____

10. _____


11. _____

12. _____

10)



11)



12)




13. _____

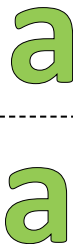
14. _____

15. _____

13)



14)



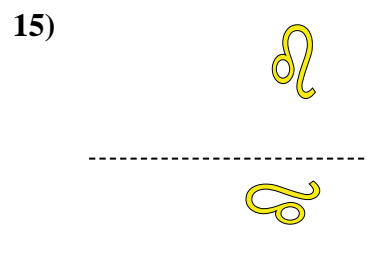
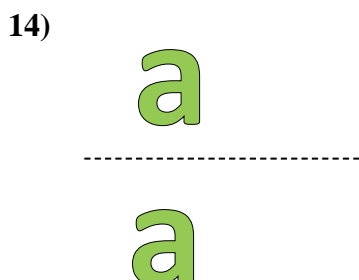
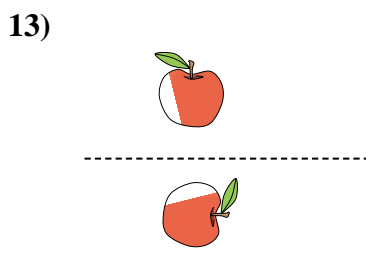
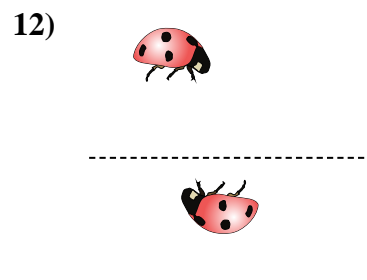
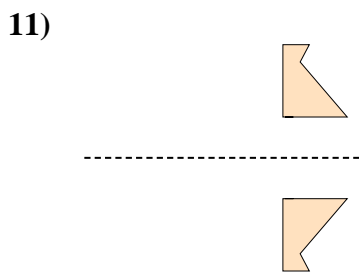
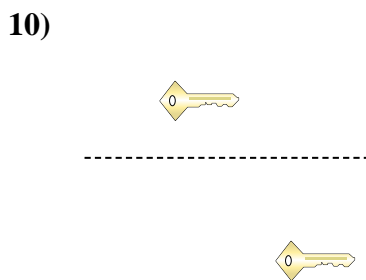
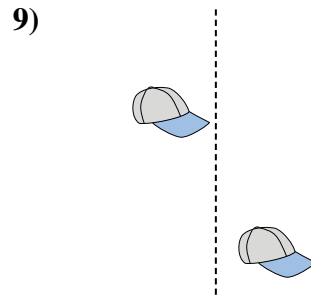
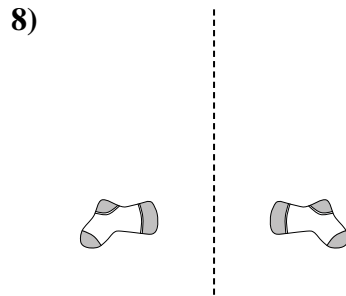
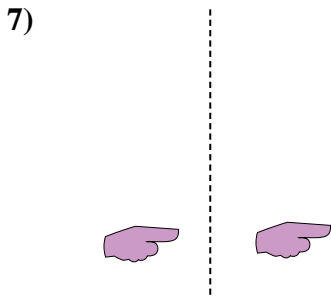
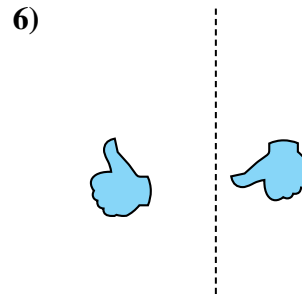
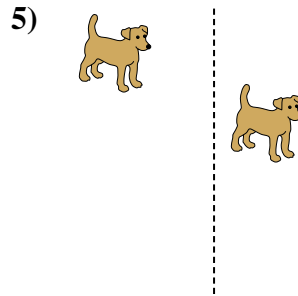
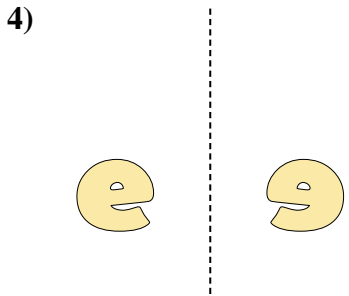
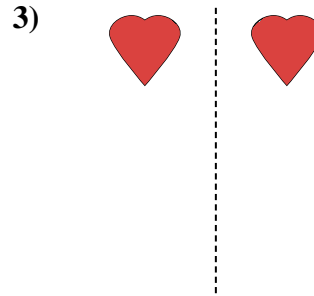
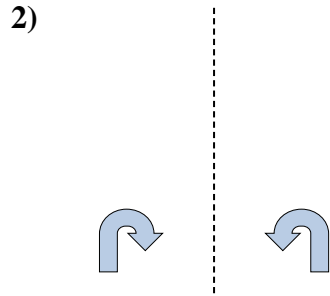
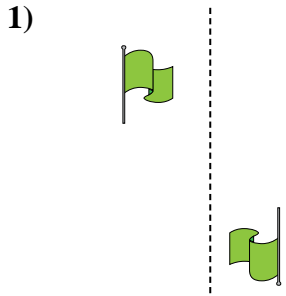
15)





Determinar si la figura se está trasladando (deslizando), rotando (girando) o reflejando (volteando)

Respuestas



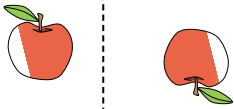
1. girando
2. volteando
3. volteando
4. volteando
5. deslizando
6. girando
7. deslizando
8. volteando
9. deslizando
10. deslizando
11. volteando
12. girando
13. girando
14. deslizando
15. girando



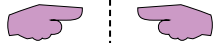
Determinar si la figura se está trasladando (deslizando), rotando (girando) o reflejando (volteando)

Respuestas

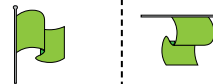
1)



2)



3)

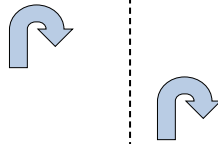


1. _____

4)



5)



6)



2. _____

3. _____

4. _____


5. _____

6. _____


7. _____

8. _____

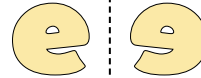
7)



8)



9)



9. _____

10. _____

11. _____

12. _____

10)



11)



12)



13. _____

14. _____

15. _____



13)



14)



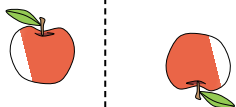
15)





Determinar si la figura se está trasladando (deslizando), rotando (girando) o reflejando (volteando)

1)



2)



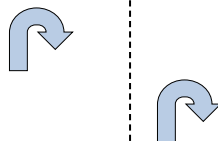
3)



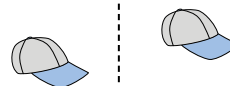
4)




5)




6)



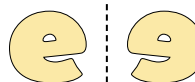
7)



8)



9)



10)



11)



12)



13)



14)



15)



Respuestas

1. **girando**

2. **volteando**

3. **girando**

4. **volteando**

5. **deslizando**

6. **deslizando**

7. **deslizando**

8. **volteando**

9. **volteando**

10. **girando**

11. **girando**

12. **girando**

13. **volteando**

14. **deslizando**

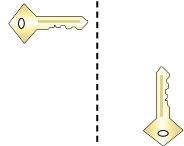
15. **deslizando**



Determinar si la figura se está trasladando (deslizando), rotando (girando) o reflejando (volteando)

Respuestas

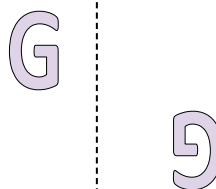
1)



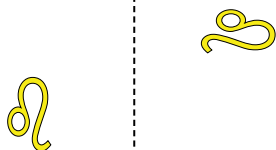
2)



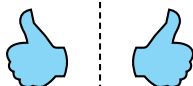
3)



4)



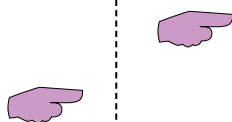
5)



6)




7)



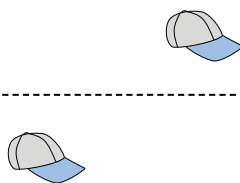
8)



9)



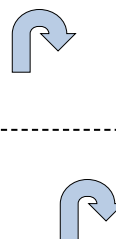
10)



11)




12)



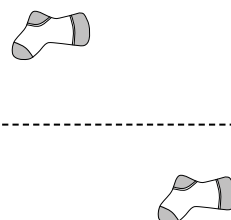
13)



14)



15)

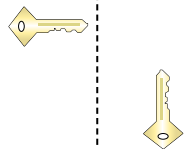


1. _____
2. _____
3. _____
4. _____
5. _____
6. _____
7. _____
8. _____
9. _____
10. _____
11. _____
12. _____
13. _____
14. _____
15. _____



Determinar si la figura se está trasladando (deslizando), rotando (girando) o reflejando (volteando)

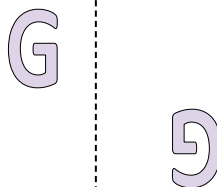
1)



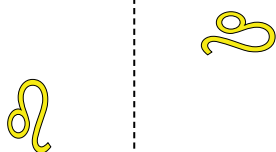
2)



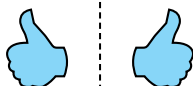
3)



4)



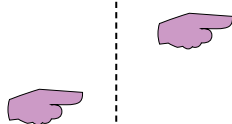
5)



6)



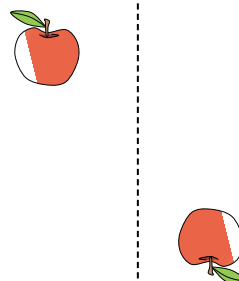
7)



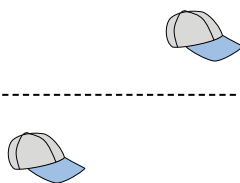
8)



9)



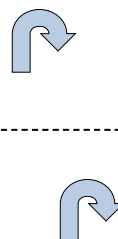
10)




11)




12)



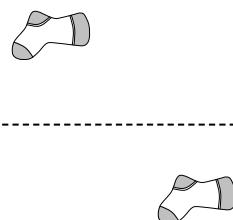
13)



14)



15)



Respuestas

1. girando

2. deslizando

3. girando

4. girando

5. volteando

6. volteando

7. deslizando

8. volteando

9. girando

10. deslizando

11. volteando

12. deslizando

13. volteando

14. volteando

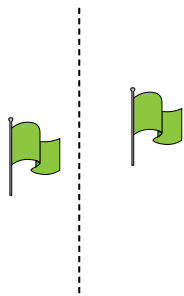
15. deslizando



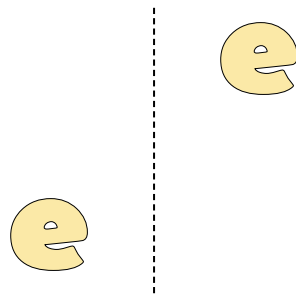
Determinar si la figura se está trasladando (deslizando), rotando (girando) o reflejando (volteando)

Respuestas

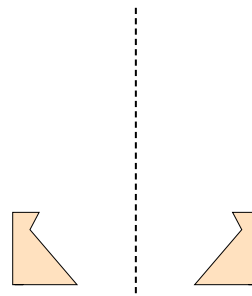
1)



2)



3)



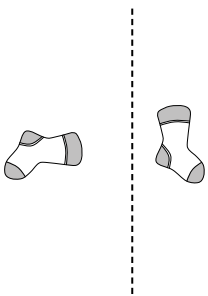
1. _____

2. _____

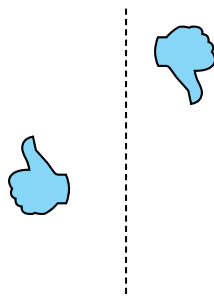
3. _____

4. _____

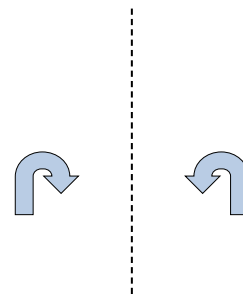
4)



5)



6)



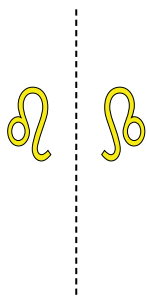
5. _____

6. _____


7. _____

8. _____


7)



8)



9)



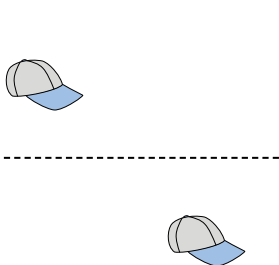
9. _____

10. _____

11. _____

12. _____


10)



11)



12)

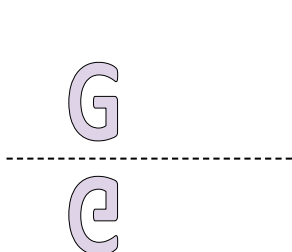


13. _____

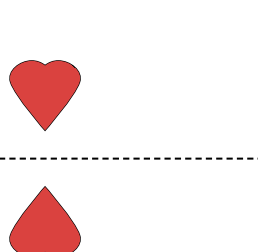
14. _____

15. _____

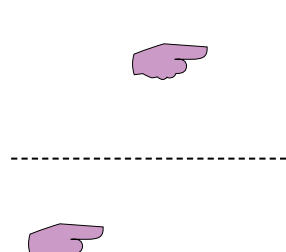
13)



14)

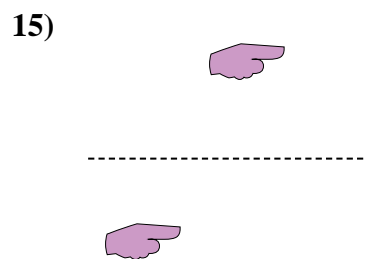
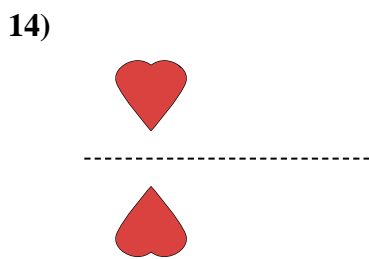
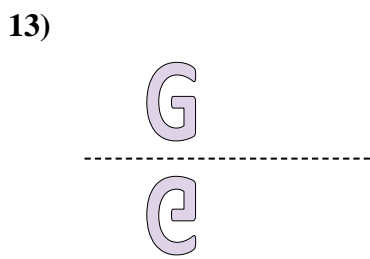
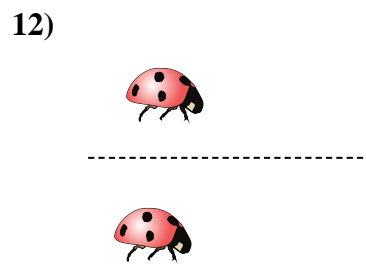
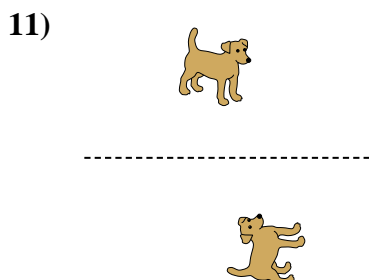
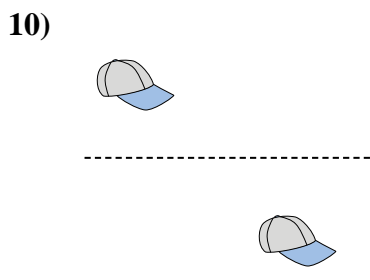
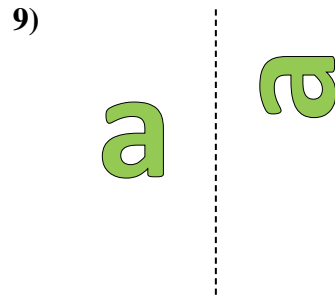
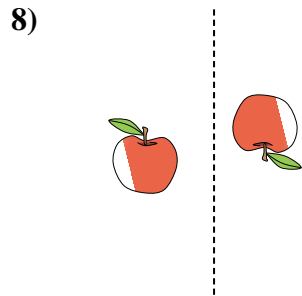
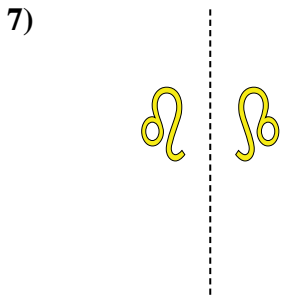
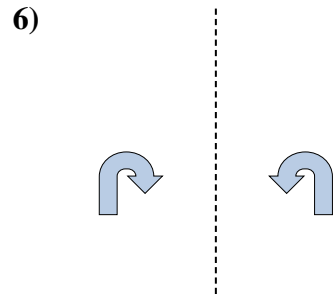
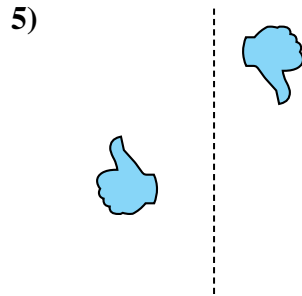
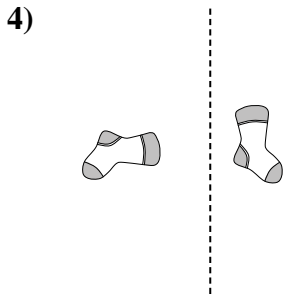
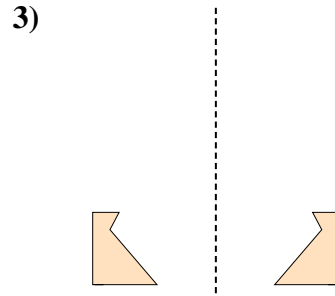
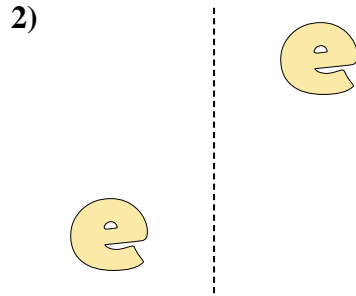
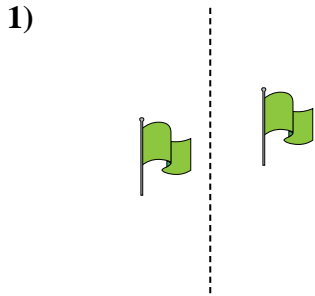


15)





Determinar si la figura se está trasladando (deslizando), rotando (girando) o reflejando (volteando)



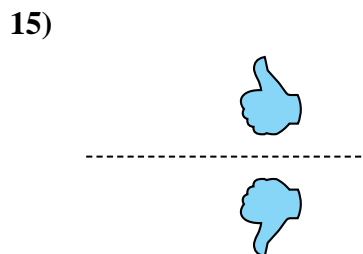
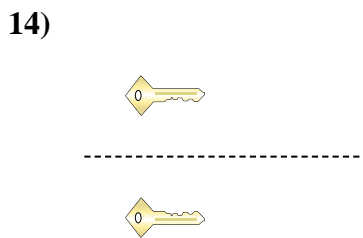
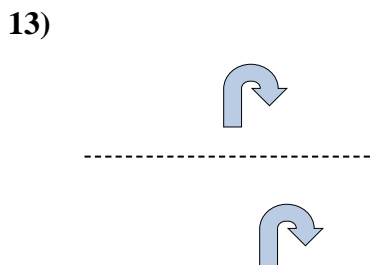
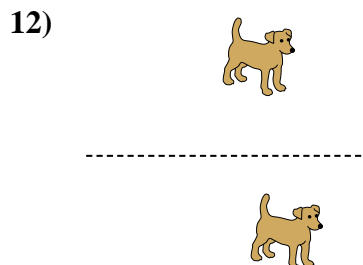
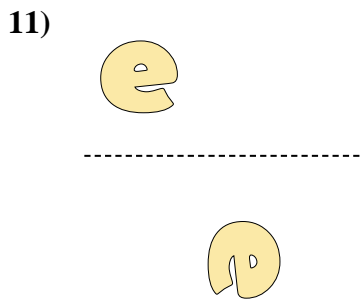
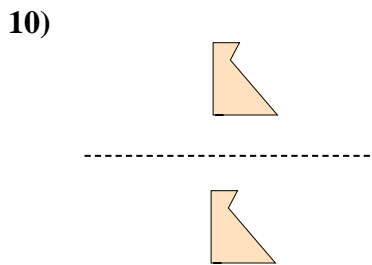
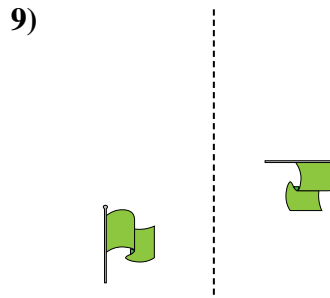
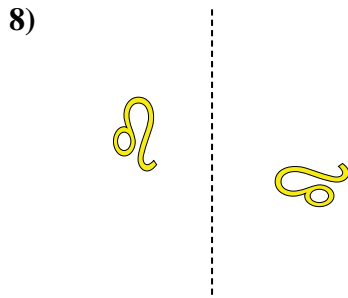
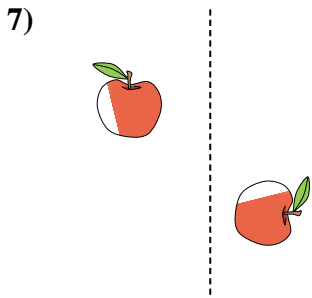
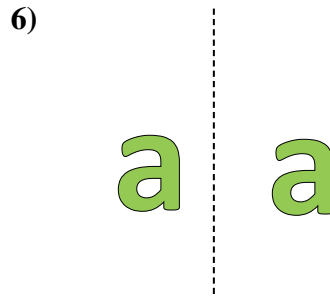
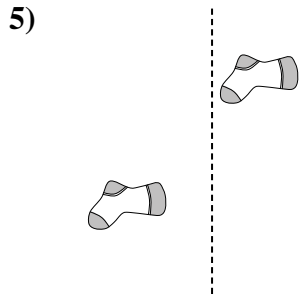
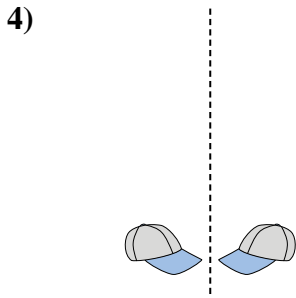
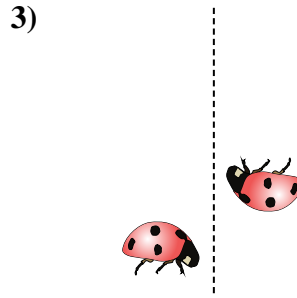
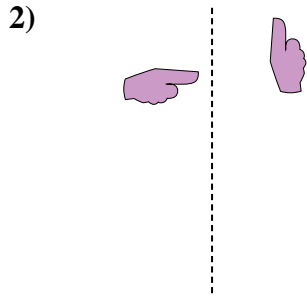
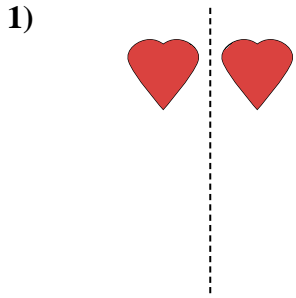
Respuestas

1. deslizando
2. deslizando
3. volteando
4. girando
5. girando
6. volteando
7. volteando
8. girando
9. girando
10. deslizando
11. girando
12. deslizando
13. volteando
14. volteando
15. deslizando



Determinar si la figura se está trasladando (deslizando), rotando (girando) o reflejando (volteando)

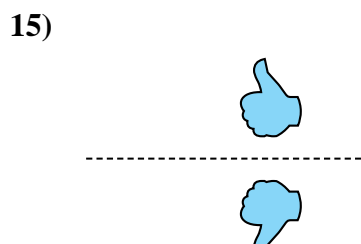
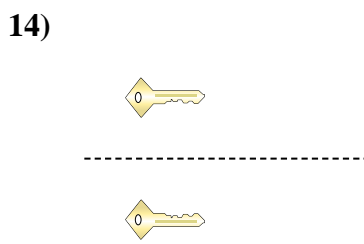
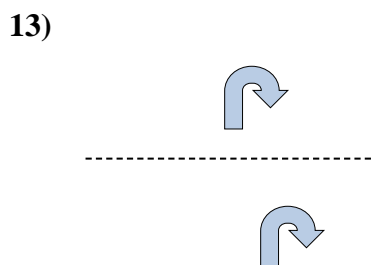
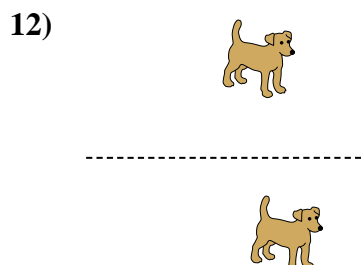
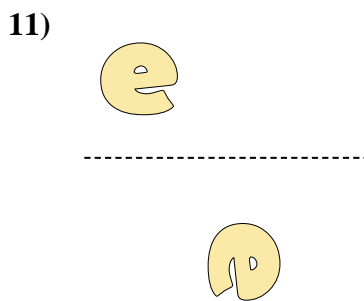
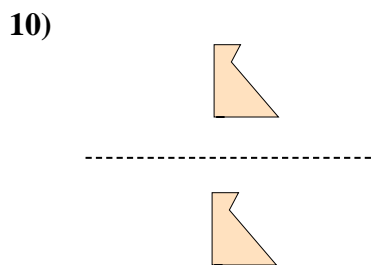
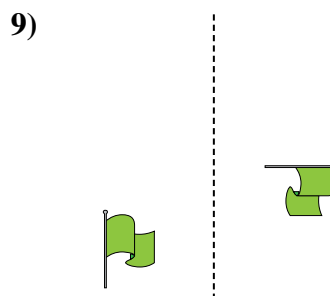
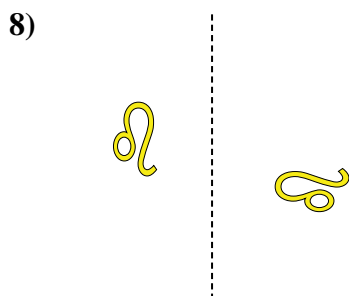
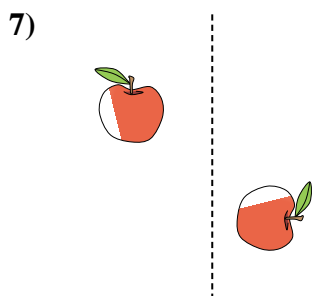
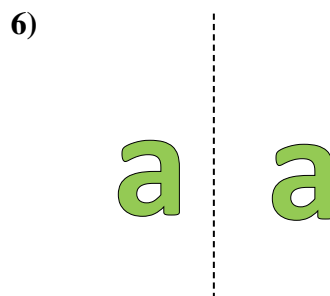
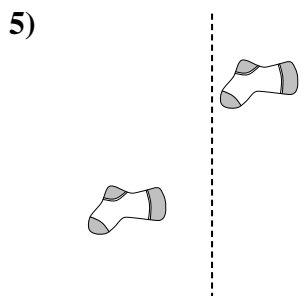
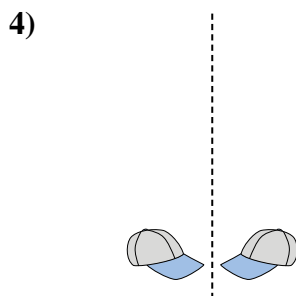
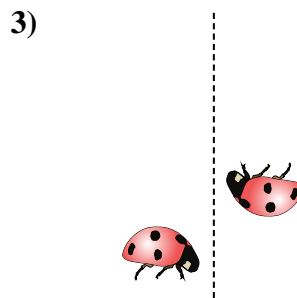
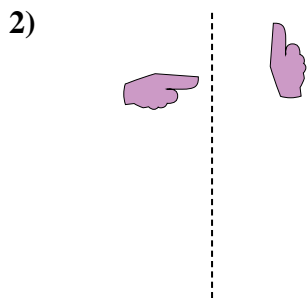
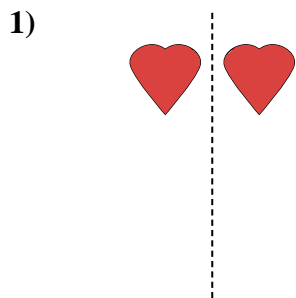
Respuestas



1. _____
2. _____
3. _____
4. _____
5. _____
6. _____
7. _____
8. _____
9. _____
10. _____
11. _____
12. _____
13. _____
14. _____
15. _____



Determinar si la figura se está trasladando (deslizando), rotando (girando) o reflejando (volteando)



Respuestas


1. volteando
2. girando
3. girando
4. volteando
5. deslizando
6. deslizando
7. girando
8. girando
9. girando
10. deslizando
11. girando
12. deslizando
13. deslizando
14. volteando
15. volteando



Determinar si la figura se está trasladando (deslizando), rotando (girando) o reflejando (volteando)

Respuestas

1)



2)



3)



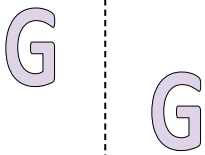
1. _____

2. _____

3. _____

4. _____

4)



5)



6)



5. _____

6. _____

7. _____

8. _____

7)



8)



9)



9. _____

10. _____

11. _____

12. _____

10)



11)



12)



13. _____

14. _____

15. _____



13)



14)

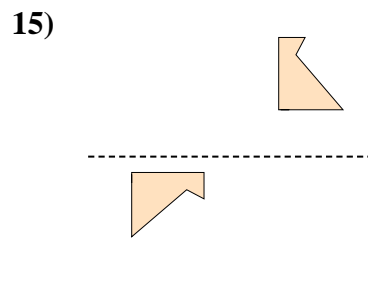
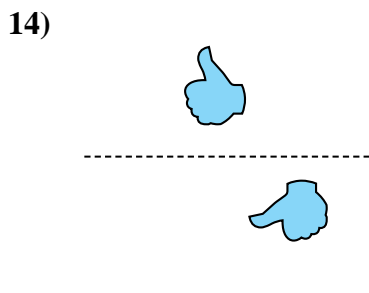
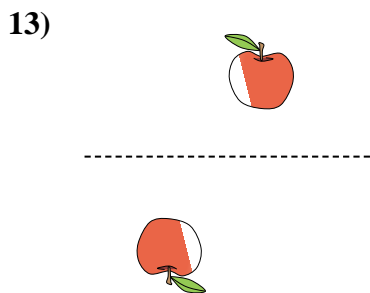
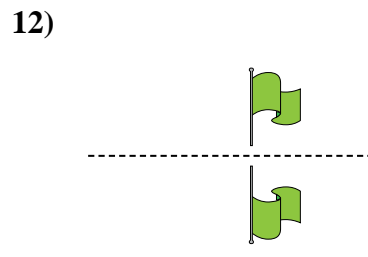
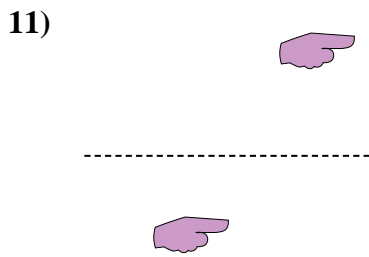
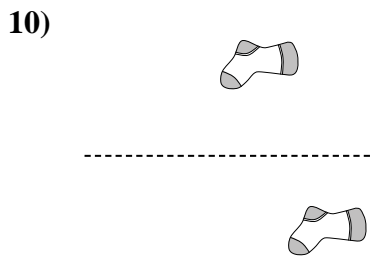
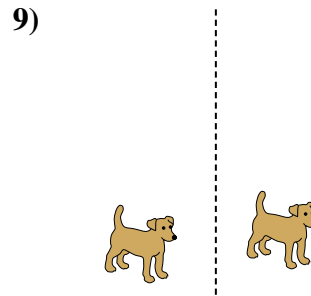
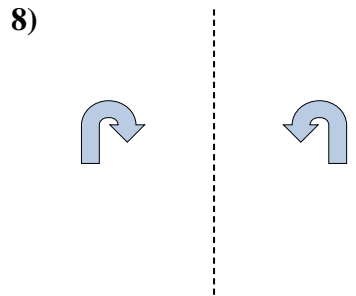
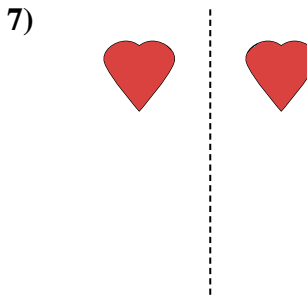
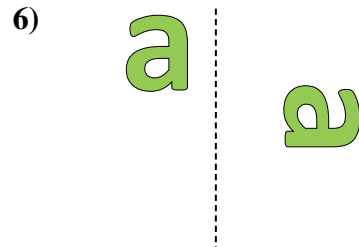
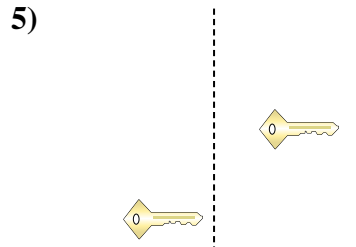
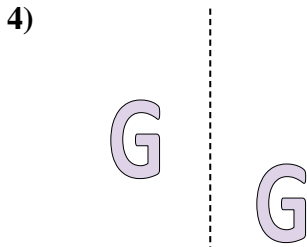
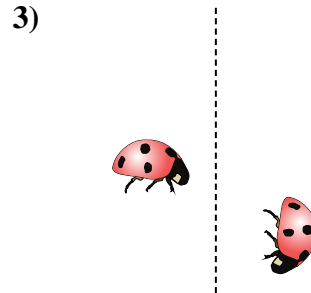
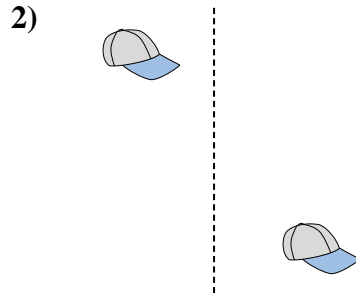
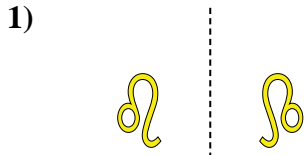


15)





Determinar si la figura se está trasladando (deslizando), rotando (girando) o reflejando (volteando)



Respuestas

1. volteando

2. deslizando

3. girando

4. deslizando

5. deslizando

6. girando

7. volteando

8. volteando

9. deslizando

10. deslizando

11. deslizando

12. volteando

13. girando

14. girando


15. girando




Determinar si la figura se está trasladando (deslizando), rotando (girando) o reflejando (volteando)

Respuestas


1)



2)



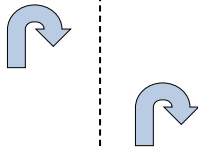
3)



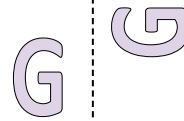
4)



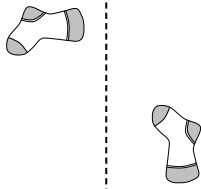
5)



6)



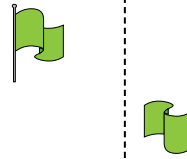
7)




8)



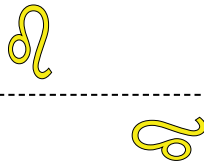
9)




10)



11)




12)



13)



14)



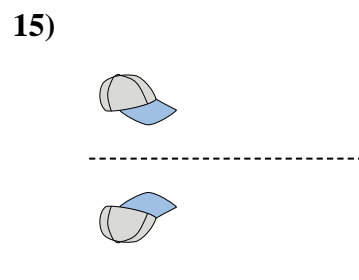
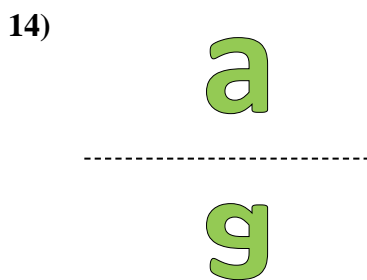
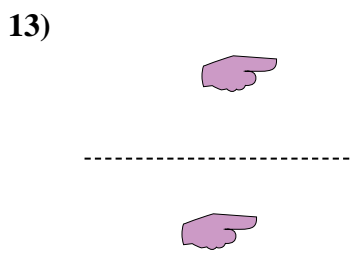
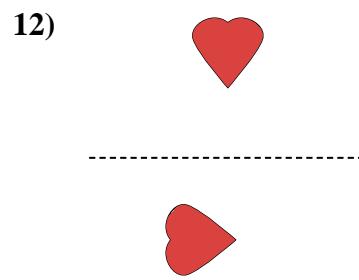
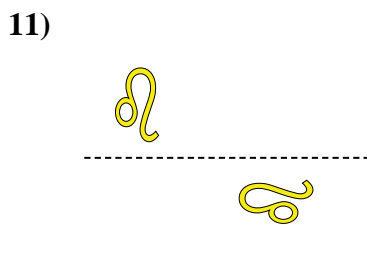
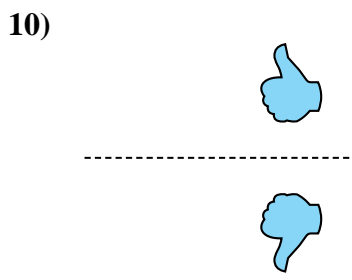
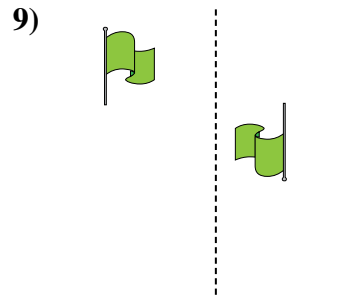
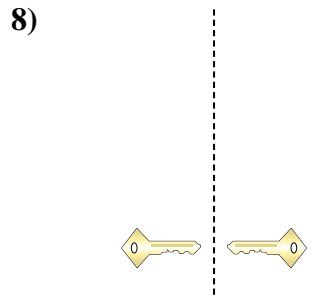
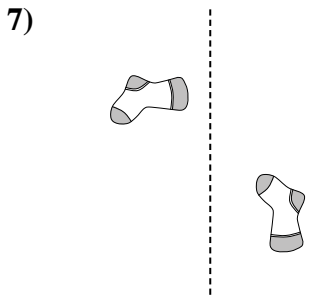
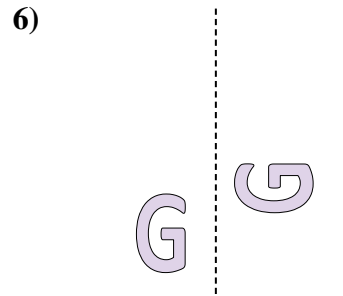
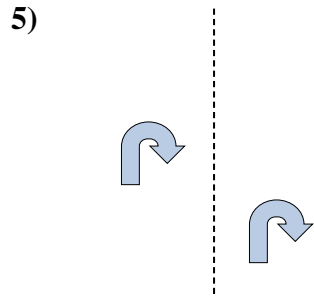
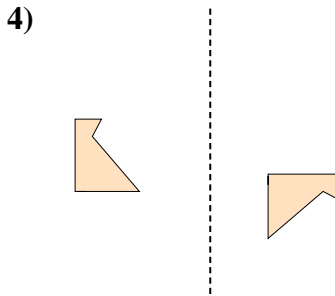
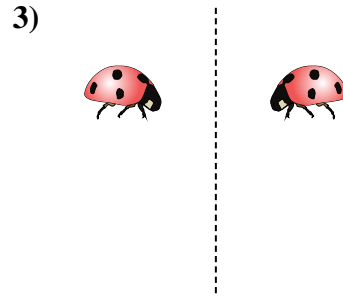
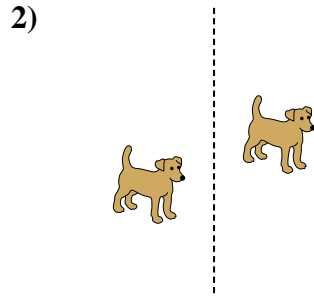
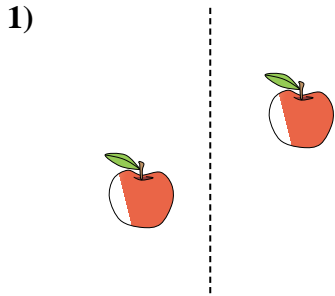
15)



1. _____
2. _____
3. _____
4. _____
5. _____
6. _____
7. _____
8. _____
9. _____
10. _____
11. _____
12. _____
13. _____
14. _____
15. _____



Determinar si la figura se está trasladando (deslizando), rotando (girando) o reflejando (volteando)



Respuestas

1. **deslizando**

2. **deslizando**

3. **volteando**

4. **girando**

5. **deslizando**

6. **girando**

7. **girando**

8. **volteando**

9. **girando**

10. **volteando**

11. **girando**

12. **girando**

13. **deslizando**

14. **volteando**


15. **volteando**



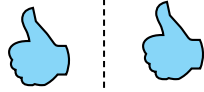
Determinar si la figura se está trasladando (deslizando), rotando (girando) o reflejando (volteando)

Respuestas

1)



2)



3)



1. _____

2. _____

3. _____

4. _____

4)



5)



6)



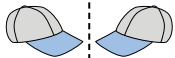
5. _____

6. _____


7. _____

8. _____

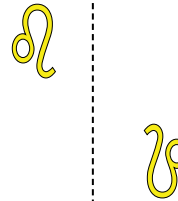
7)



8)



9)



9. _____

10. _____

11. _____

12. _____

10)



11)



12)



13. _____

14. _____



15. _____

13)



14)

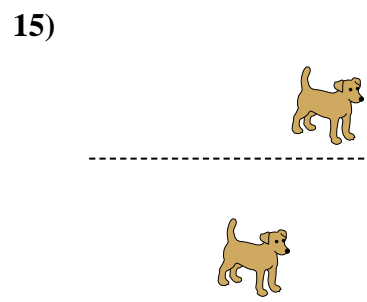
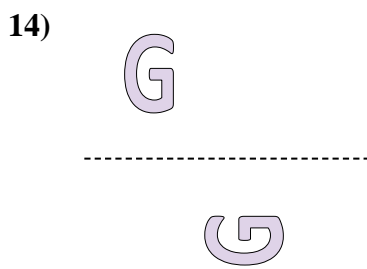
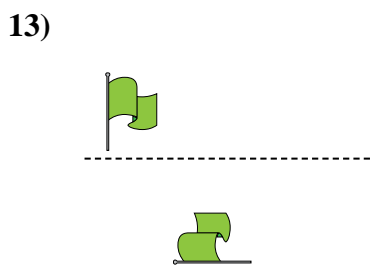
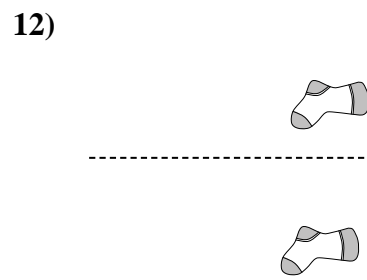
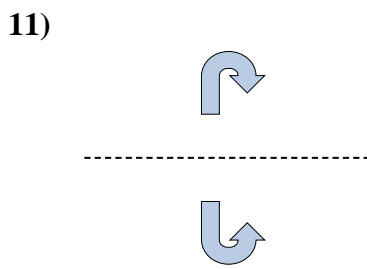
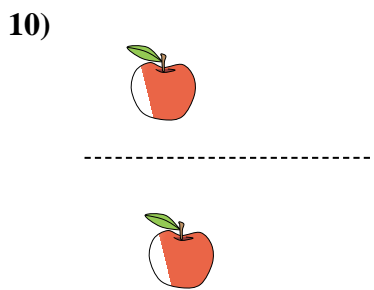
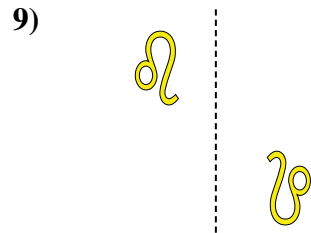

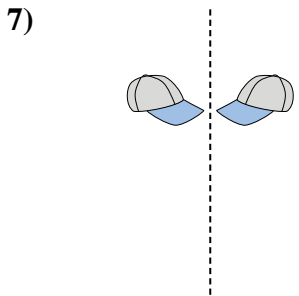
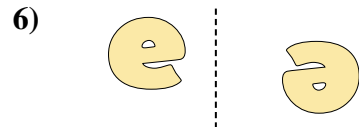
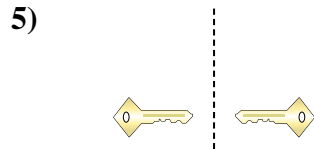
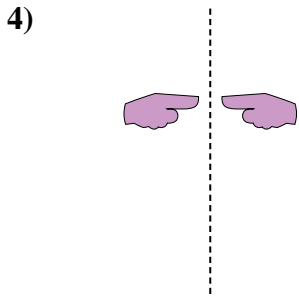

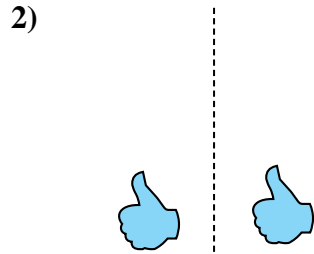
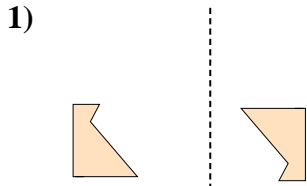


15)





Determinar si la figura se está trasladando (deslizando), rotando (girando) o reflejando (volteando)



Respuestas

1. girando

2. deslizando

3. volteando

4. volteando

5. volteando

6. girando

7. volteando

8. deslizando

9. girando

10. deslizando

11. volteando

12. deslizando

13. girando

14. girando


15. deslizando



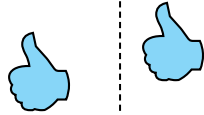
Determinar si la figura se está trasladando (deslizando), rotando (girando) o reflejando (volteando)

Respuestas

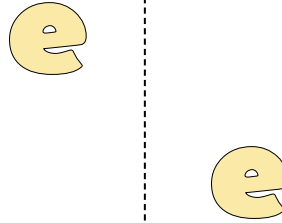
1)



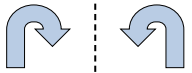
2)



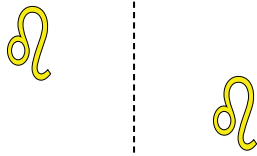
3)




4)



5)



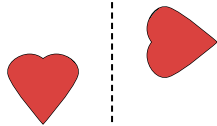
6)



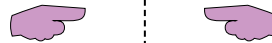
7)



8)




9)




10)



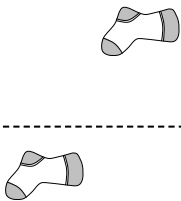
11)



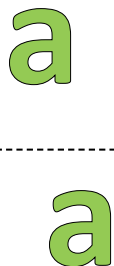
12)



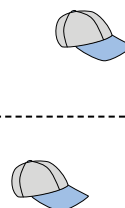
13)



14)



15)

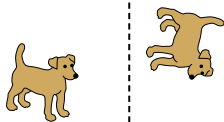


1. _____
2. _____
3. _____
4. _____
5. _____
6. _____
7. _____
8. _____
9. _____
10. _____
11. _____
12. _____
13. _____
14. _____
15. _____

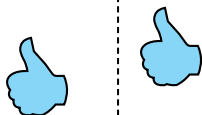


Determinar si la figura se está trasladando (deslizando), rotando (girando) o reflejando (volteando)

1)



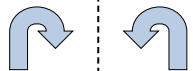
2)



3)



4)



5)



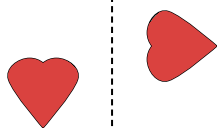
6)



7)



8)




9)



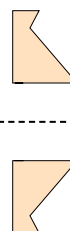
10)



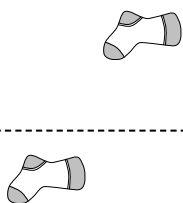
11)



12)



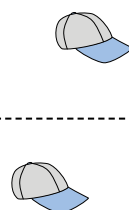
13)



14)



15)



Respuestas

1. **girando**

2. **deslizando**

3. **deslizando**

4. **volteando**

5. **deslizando**

6. **girando**

7. **girando**

8. **girando**

9. **volteando**

10. **volteando**

11. **volteando**

12. **volteando**

13. **deslizando**

14. **deslizando**

15. **deslizando**



Determinar si la figura se está trasladando (deslizando), rotando (girando) o reflejando (volteando)

Respuestas

1)



2)



3)



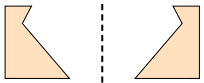
1. _____

2. _____

3. _____

4. _____


4)



5)



6)




5. _____

6. _____

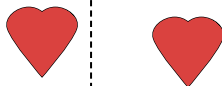
7. _____

8. _____

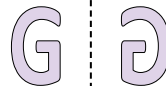
7)



8)



9)



9. _____

10. _____

11. _____

12. _____

10)



11)



12)



13. _____

14. _____

15. _____



13)



14)



15)





Determinar si la figura se está trasladando (deslizando), rotando (girando) o reflejando (volteando)

1)



2)



3)



1.

deslizando

2.

girando

3.

deslizando

4.

volteando

5.

girando

6.

deslizando

7.

volteando

8.

deslizando

9.

volteando

10.

deslizando

11.

deslizando

12.

girando

13.

girando

14.

girando

15.

volteando

4)



5)



6)



7)



8)



9)



10)



11)



12)



13)



14)



15)

