




Determinar si la figura se está trasladando (deslizando), rotando (girando) o reflejando (volteando)

Respuestas

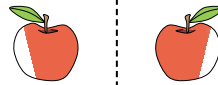
1)



2)



3)



1. _____

2. _____


3. _____

4. _____


4)



5)



6)



5. _____

6. _____

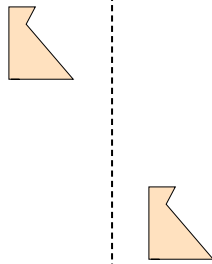
7. _____

8. _____

7)



8)



9)



9. _____

10. _____

11. _____

12. _____

10)



11)



12)



13. _____

14. _____

15. _____

13)



14)



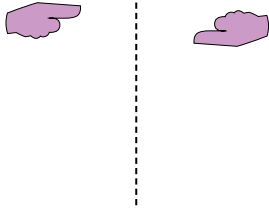
15)






Determinar si la figura se está trasladando (deslizando), rotando (girando) o reflejando (volteando)

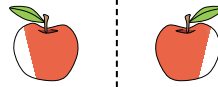
1)



2)




3)



4)



5)



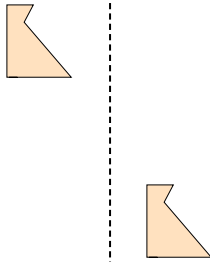
6)



7)



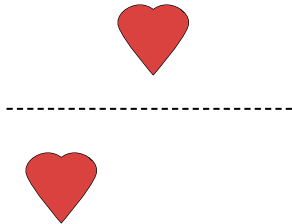
8)



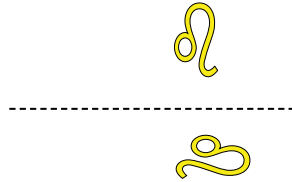
9)



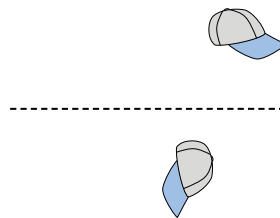
10)



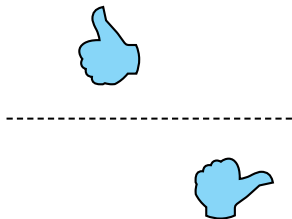
11)



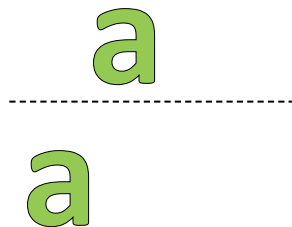
12)



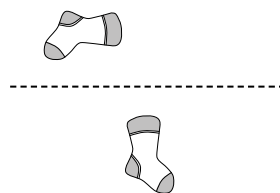
13)



14)



15)



Respuestas

1. **girando**

2. **deslizando**

3. **volteando**

4. **volteando**

5. **volteando**

6. **girando**

7. **volteando**

8. **deslizando**

9. **volteando**

10. **deslizando**

11. **girando**

12. **girando**

13. **girando**

14. **deslizando**

15. **girando**