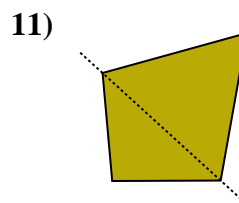
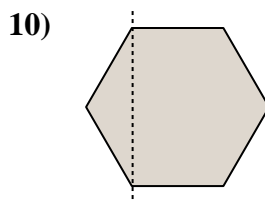
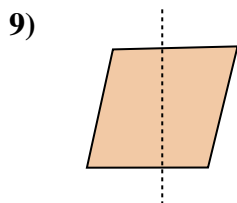
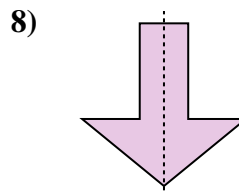
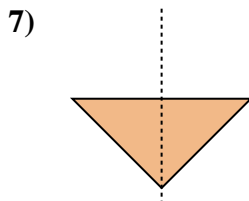
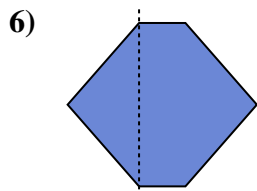
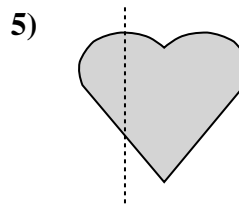
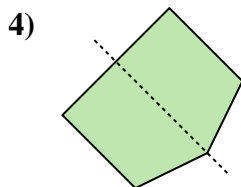
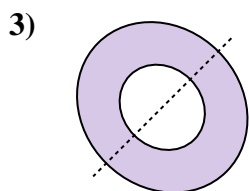
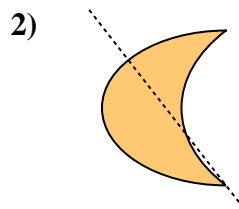
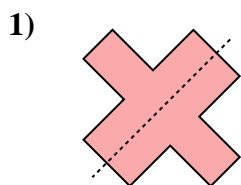
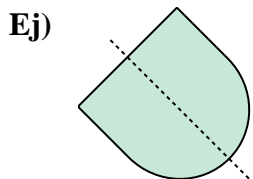




Determinar si la línea a través de cada figura es una línea de simetría.



Respuestas

Ej. si

1. _____

2. _____

3. _____

4. _____

5. _____

6. _____

7. _____

8. _____

9. _____

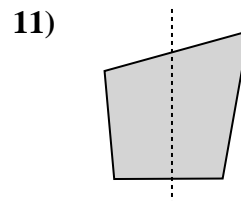
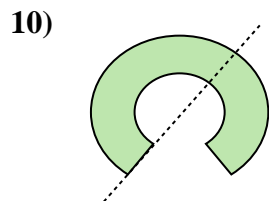
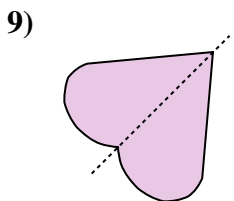
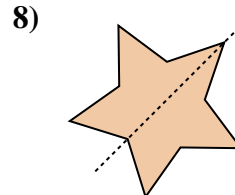
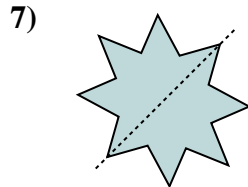
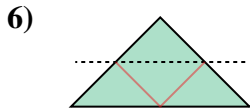
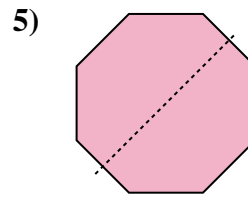
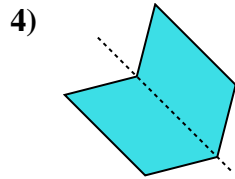
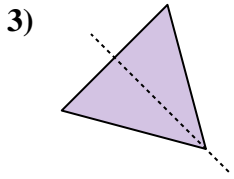
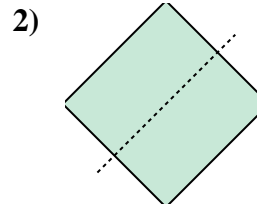
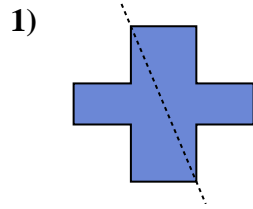
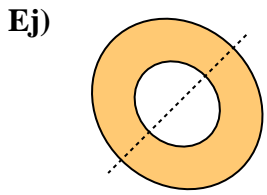
10. _____

11. _____



Determinar si la línea a través de cada figura es una línea de simetría.

Respuestas



Ej. si

1. _____

2. _____

3. _____

4. _____

5. _____

6. _____

7. _____

8. _____

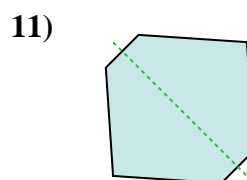
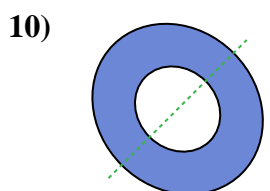
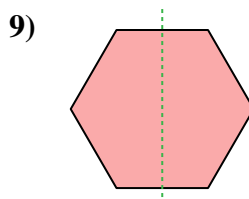
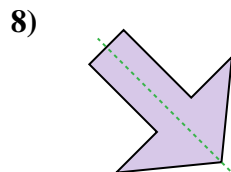
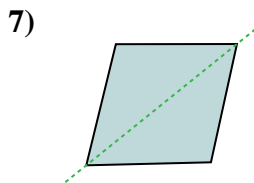
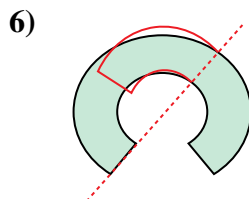
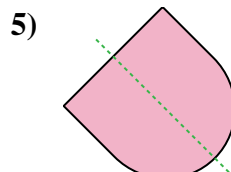
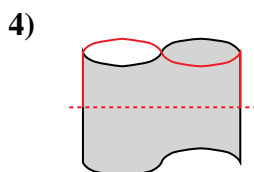
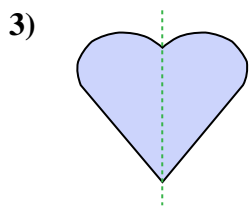
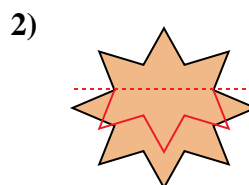
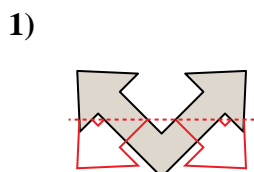
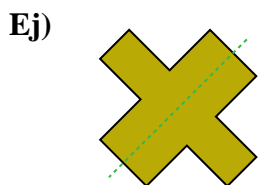
9. _____

10. _____

11. _____



Determinar si la línea a través de cada figura es una línea de simetría.

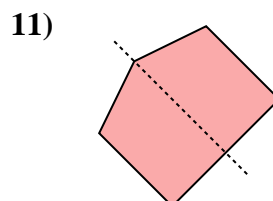
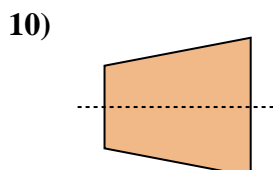
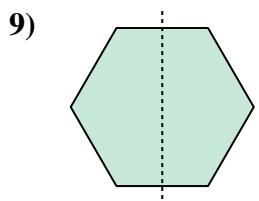
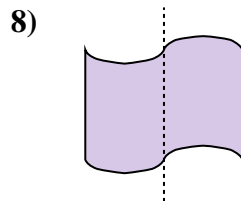
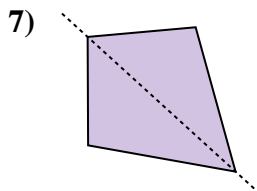
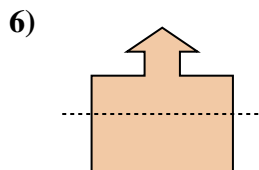
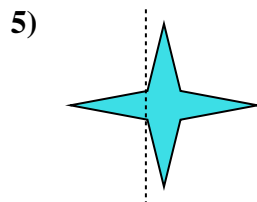

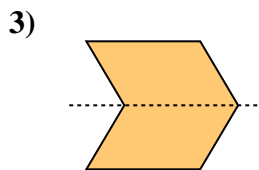
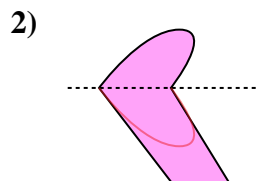

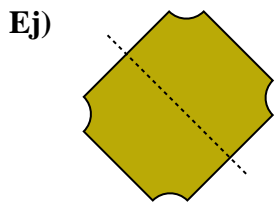


Respuestas

- Ej. si
- 1. no
- 2. no
- 3. si
- 4. no
- 5. si
- 6. no
- 7. si
- 8. si
- 9. si
- 10. si
- 11. si



Determinar si la línea a través de cada figura es una línea de simetría.



Respuestas

Ej. si

1. _____

2. _____

3. _____

4. _____

5. _____

6. _____

7. _____

8. _____

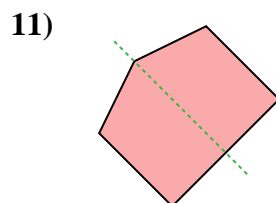
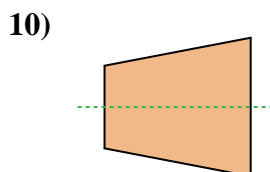
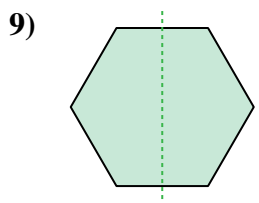
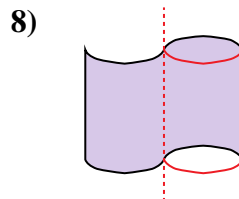
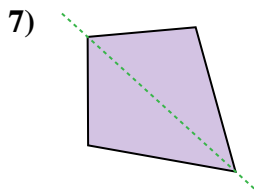
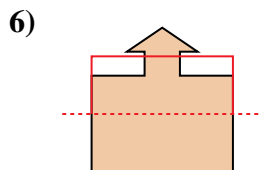
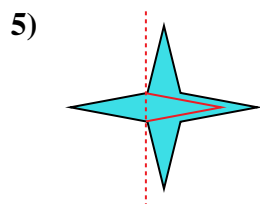
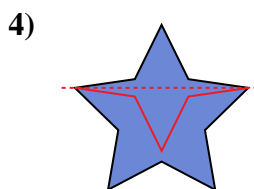
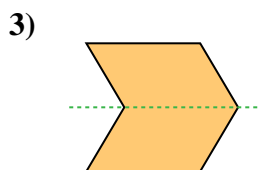
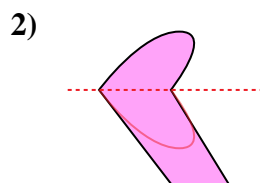
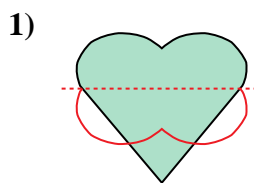
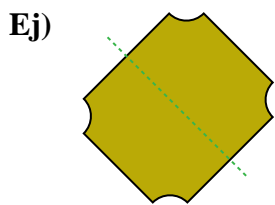
9. _____

10. _____

11. _____



Determinar si la línea a través de cada figura es una línea de simetría.



Respuestas

Ej. si

1. no

2. no

3. si

4. no

5. no

6. no

7. si

8. no

9. si

10. si

11. si

