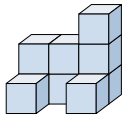








Resuelve cada problema.

Respuestas

1) If you were looking at the 3d shape from above what would you see?



- A. 
- B. 
- C. 
- D. 

1. \_\_\_\_\_

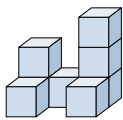
2. \_\_\_\_\_





3. \_\_\_\_\_

4. \_\_\_\_\_

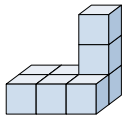
5. \_\_\_\_\_





2) If you were looking at the 3d shape from the left side what would you see?



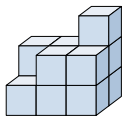
- A. 
- B. 
- C. 
- D. 





3) If you were looking at the 3d shape from above what would you see?



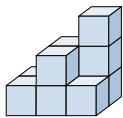
- A. 
- B. 
- C. 
- D. 





4) If you were looking at the 3d shape from the left side what would you see?



- A. 
- B. 
- C. 
- D. 

5) If you were looking at the 3d shape from the right side what would you see?



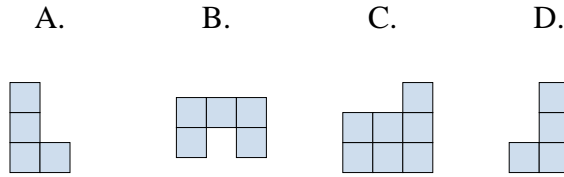
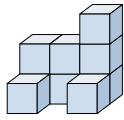
- A. 
- B. 
- C. 
- D. 



Resuelve cada problema.

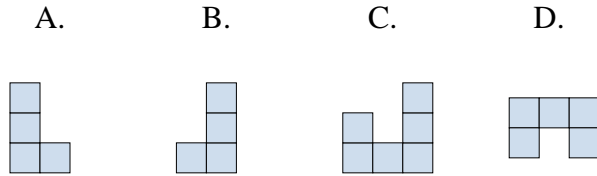
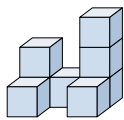
**Respuestas**

1) If you were looking at the 3d shape from above what would you see?



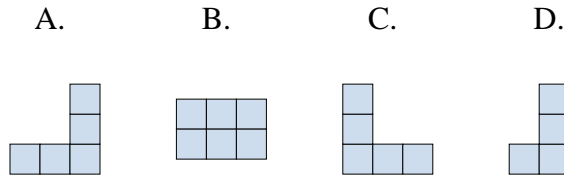
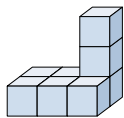
1. **B**

2) If you were looking at the 3d shape from the left side what would you see?



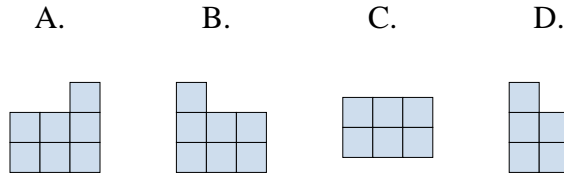
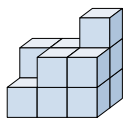
2. **A**

3) If you were looking at the 3d shape from above what would you see?



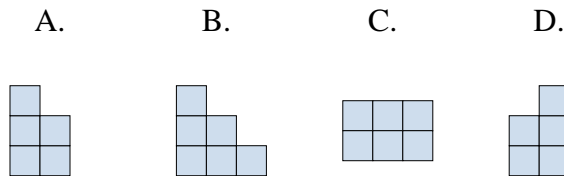
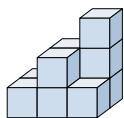
3. **B**

4) If you were looking at the 3d shape from the left side what would you see?



4. **D**

5) If you were looking at the 3d shape from the right side what would you see?



5. **D**