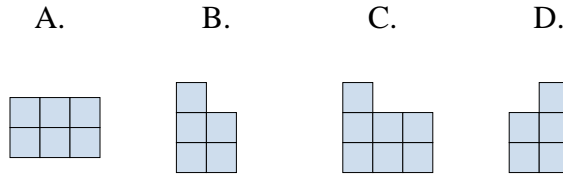
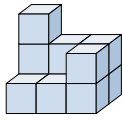




Resuelve cada problema.

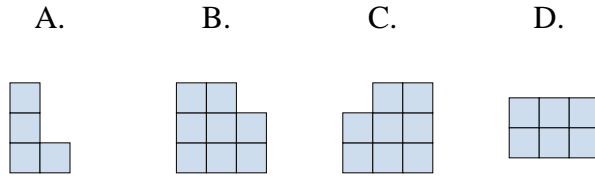
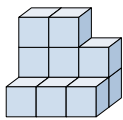
Respuestas

1) If you were looking at the 3d shape from the right side what would you see?



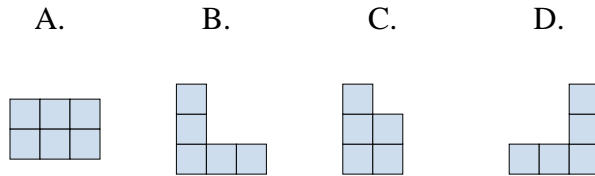
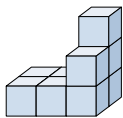
1. \_\_\_\_\_

2) If you were looking at the 3d shape from the left side what would you see?



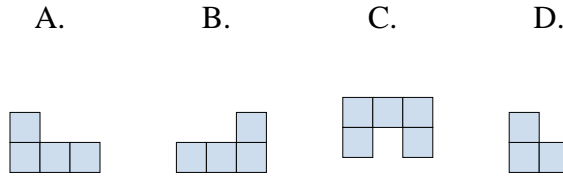
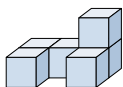
2. \_\_\_\_\_

3) If you were looking at the 3d shape from above what would you see?



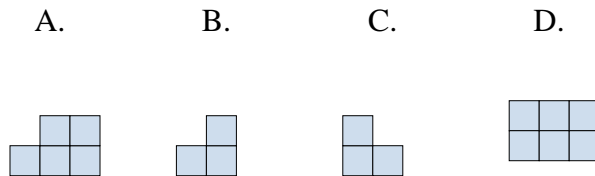
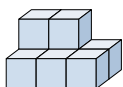
3. \_\_\_\_\_

4) If you were looking at the 3d shape from the left side what would you see?



4. \_\_\_\_\_

5) If you were looking at the 3d shape from the right side what would you see?



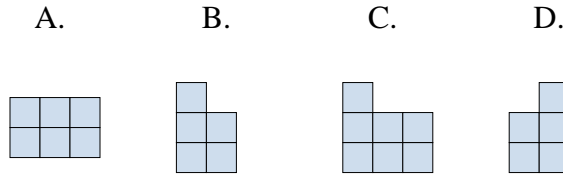
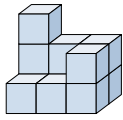
5. \_\_\_\_\_



Resuelve cada problema.

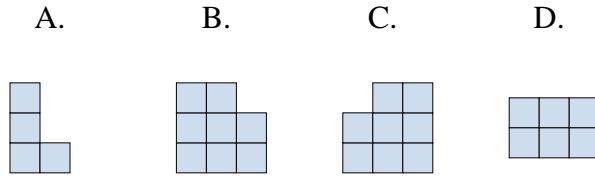
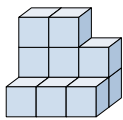
**Respuestas**

1) If you were looking at the 3d shape from the right side what would you see?



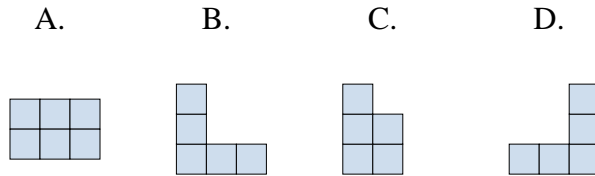
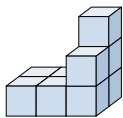
1.     **D**    

2) If you were looking at the 3d shape from the left side what would you see?



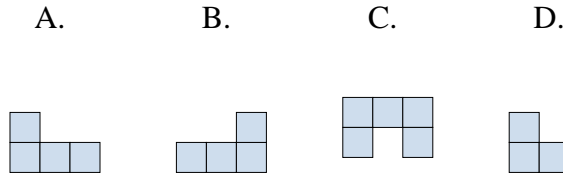
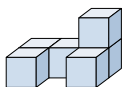
2.     **A**    

3) If you were looking at the 3d shape from above what would you see?



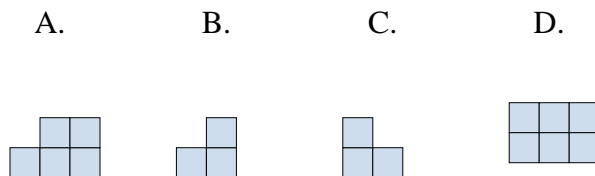
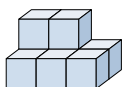
3.     **A**    

4) If you were looking at the 3d shape from the left side what would you see?



4.     **D**    

5) If you were looking at the 3d shape from the right side what would you see?



5.     **B**