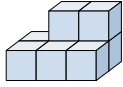




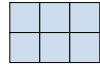



Resuelve cada problema.

Respuestas

1) If you were looking at the 3d shape from the left side what would you see?



- A. 
- B. 
- C. 
- D. 

1. _____

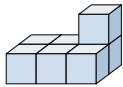
2. _____


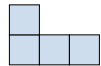
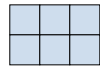

3. _____

4. _____

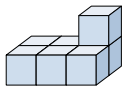
5. _____



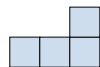

2) If you were looking at the 3d shape from the right side what would you see?



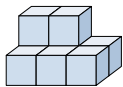
- A. 
- B. 
- C. 
- D. 


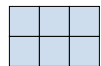


3) If you were looking at the 3d shape from the back what would you see?



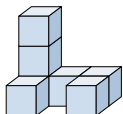
- A. 
- B. 
- C. 
- D. 

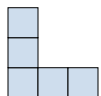
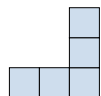


4) If you were looking at the 3d shape from above what would you see?



- A. 
- B. 
- C. 
- D. 

5) If you were looking at the 3d shape from above what would you see?



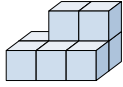
- A. 
- B. 
- C. 
- D. 



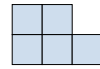
Resuelve cada problema.

Respuestas

1) If you were looking at the 3d shape from the left side what would you see?

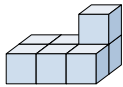


A. B. C. D.



1. **A**

2) If you were looking at the 3d shape from the right side what would you see?

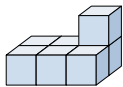


A. B. C. D.

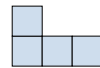


2. **D**

3) If you were looking at the 3d shape from the back what would you see?

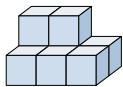


A. B. C. D.



3. **D**

4) If you were looking at the 3d shape from above what would you see?

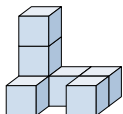


A. B. C. D.

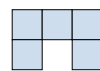


4. **B**

5) If you were looking at the 3d shape from above what would you see?



A. B. C. D.



5. **D**