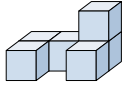




Resuelve cada problema.

Respuestas

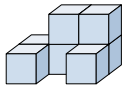
1) If you were looking at the 3d shape from the right side what would you see?



- A.
- B.
- C.
- D.

1. _____

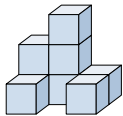
2) If you were looking at the 3d shape from the right side what would you see?



- A.
- B.
- C.
- D.

2. _____

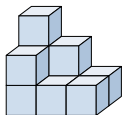
3) If you were looking at the 3d shape from the back what would you see?



- A.
- B.
- C.
- D.

3. _____

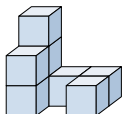
4) If you were looking at the 3d shape from above what would you see?



- A.
- B.
- C.
- D.

4. _____

5) If you were looking at the 3d shape from the right side what would you see?



- A.
- B.
- C.
- D.

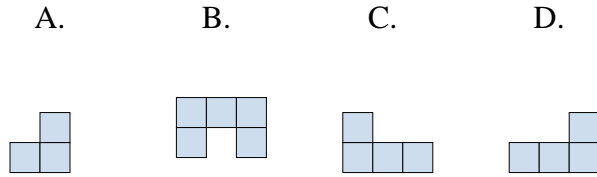
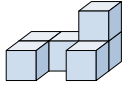
5. _____



Resuelve cada problema.

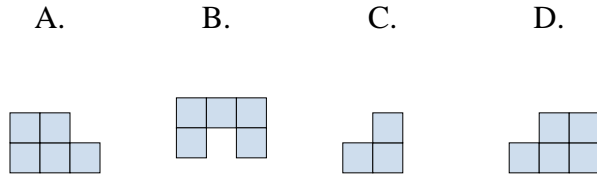
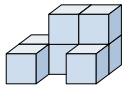
Respuestas

1) If you were looking at the 3d shape from the right side what would you see?



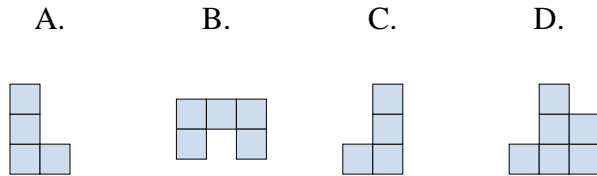
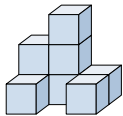
1. **A**

2) If you were looking at the 3d shape from the right side what would you see?



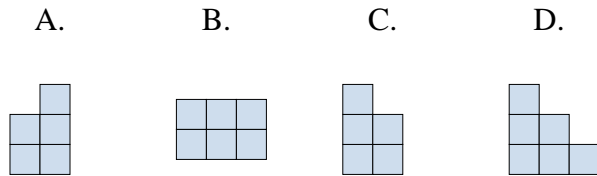
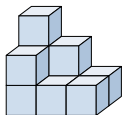
2. **C**

3) If you were looking at the 3d shape from the back what would you see?



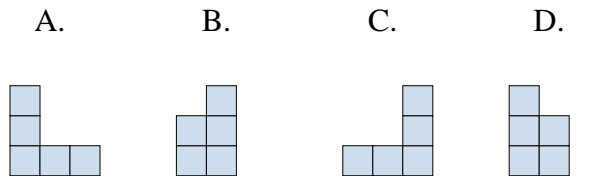
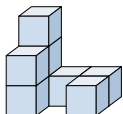
3. **D**

4) If you were looking at the 3d shape from above what would you see?



4. **B**

5) If you were looking at the 3d shape from the right side what would you see?



5. **B**