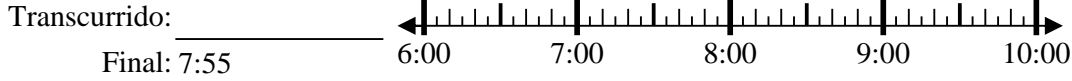


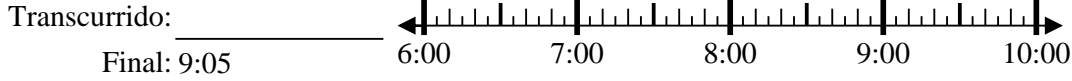


**Resuelve cada problema.**

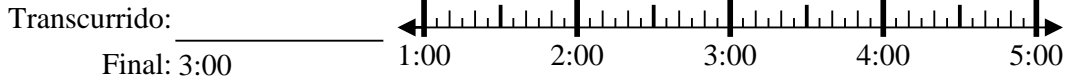
1) Inicio: 6:45



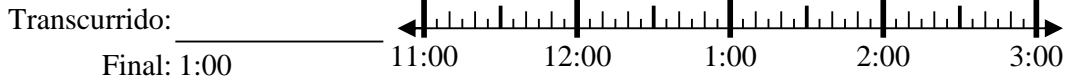
2) Inicio: 6:25



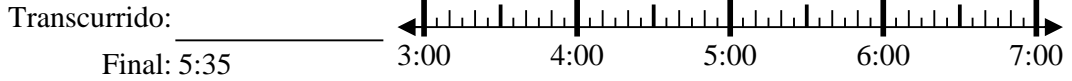
3) Inicio: 1:10



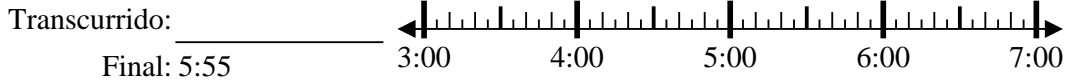
4) Inicio: 11:15



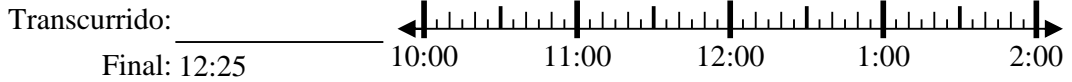
5) Inicio: 3:25



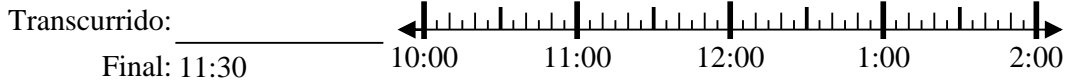
6) Inicio: 3:20



7) Inicio: 10:35



8) Inicio: 10:00

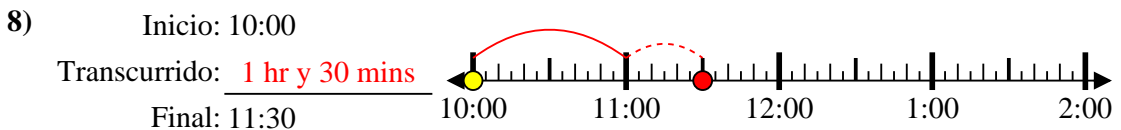
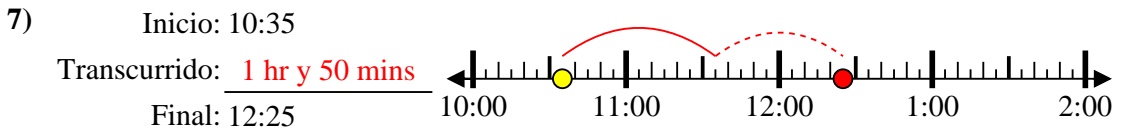
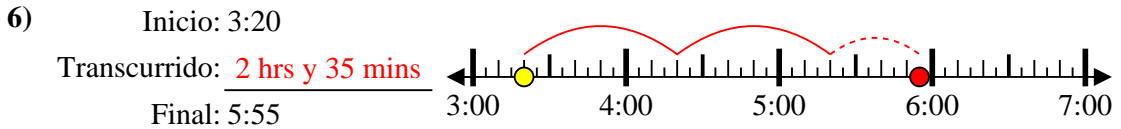
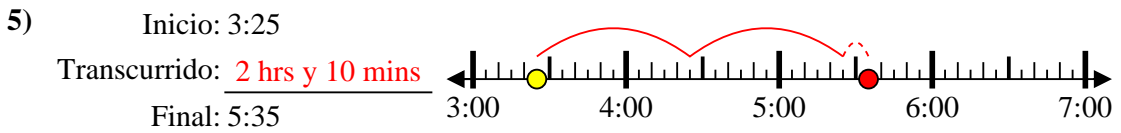
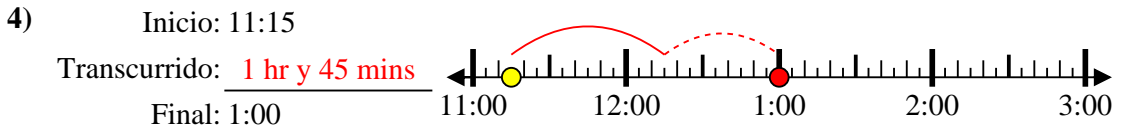
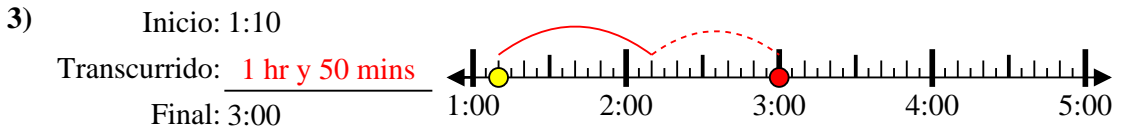
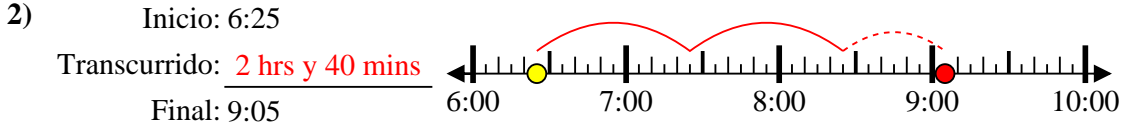
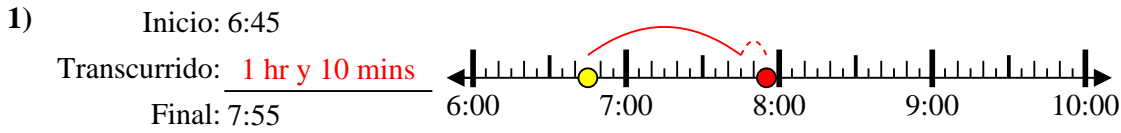


**Respuestas**

1. \_\_\_\_\_
2. \_\_\_\_\_
3. \_\_\_\_\_
4. \_\_\_\_\_
5. \_\_\_\_\_
6. \_\_\_\_\_
7. \_\_\_\_\_
8. \_\_\_\_\_



Resuelve cada problema.



**Respuestas**

1. 1 hr y 10 mins

2. 2 hrs y 40 mins

3. 1 hr y 50 mins

4. 1 hr y 45 mins

5. 2 hrs y 10 mins

6. 2 hrs y 35 mins

7. 1 hr y 50 mins

8. 1 hr y 30 mins