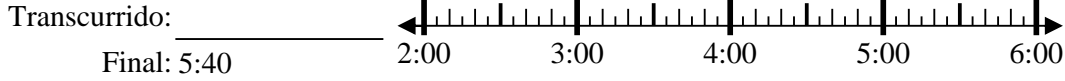





**Resuelve cada problema.**

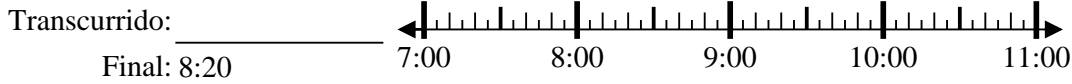
1) Inicio: 2:50



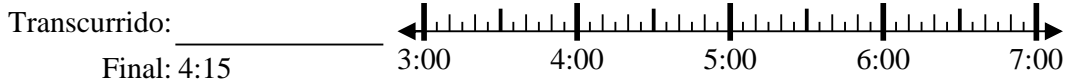
2) Inicio: 9:10



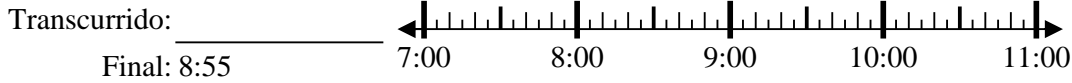
3) Inicio: 7:05



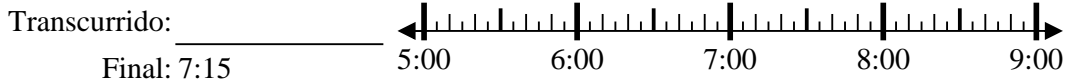
4) Inicio: 3:00



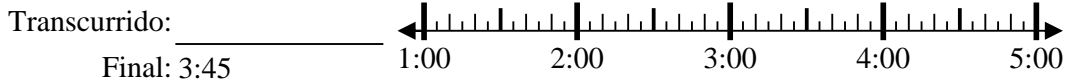
5) Inicio: 7:15



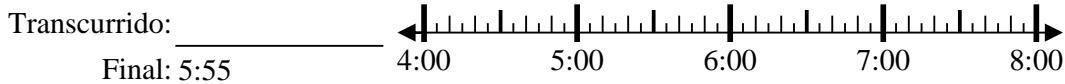
6) Inicio: 5:00



7) Inicio: 1:00



8) Inicio: 4:35

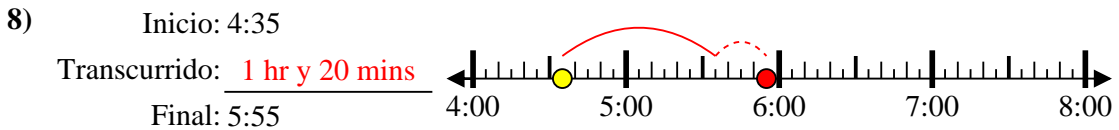
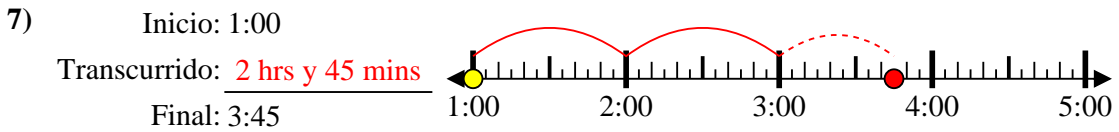
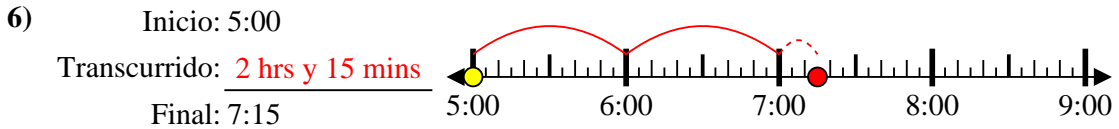
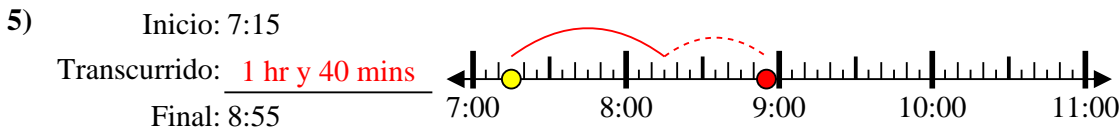
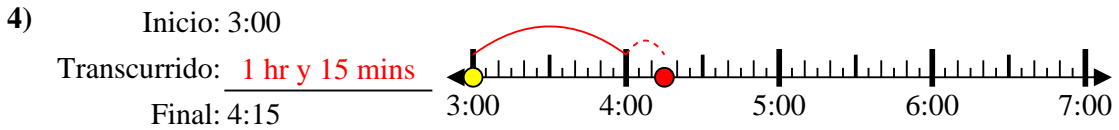
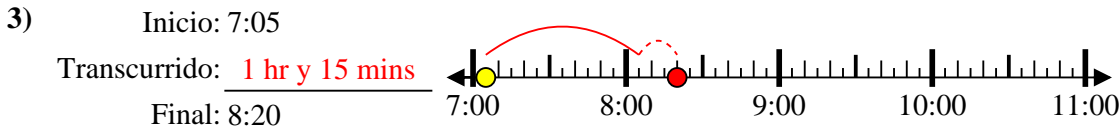
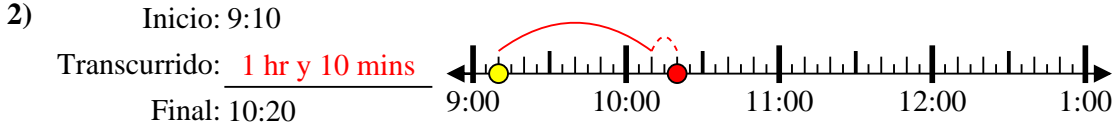
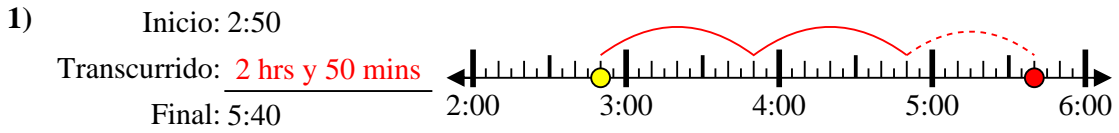


**Respuestas**

1. \_\_\_\_\_
2. \_\_\_\_\_
3. \_\_\_\_\_
4. \_\_\_\_\_
5. \_\_\_\_\_
6. \_\_\_\_\_
7. \_\_\_\_\_
8. \_\_\_\_\_



Resuelve cada problema.



**Respuestas**

1. 2 hrs y 50 mins

2. 1 hr y 10 mins

3. 1 hr y 15 mins

4. 1 hr y 15 mins

5. 1 hr y 40 mins

6. 2 hrs y 15 mins

7. 2 hrs y 45 mins

8. 1 hr y 20 mins