

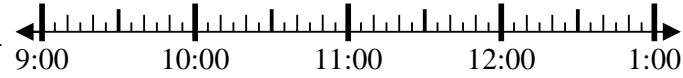


**Resuelve cada problema.**

1) Inicio: 9:35

Transcurrido: \_\_\_\_\_

Final: 12:05



1. \_\_\_\_\_

2) Inicio: 12:50

Transcurrido: \_\_\_\_\_

Final: 2:35

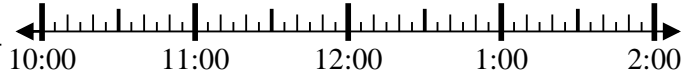


2. \_\_\_\_\_

3) Inicio: 10:15

Transcurrido: \_\_\_\_\_

Final: 11:40

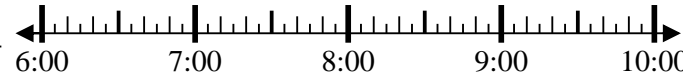


3. \_\_\_\_\_

4) Inicio: 6:25

Transcurrido: \_\_\_\_\_

Final: 8:10

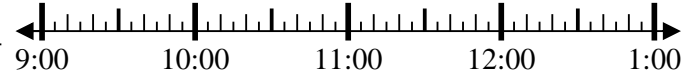


4. \_\_\_\_\_

5) Inicio: 9:10

Transcurrido: \_\_\_\_\_

Final: 10:25

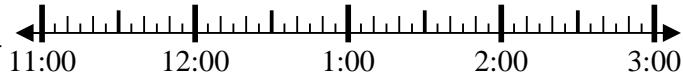


5. \_\_\_\_\_

6) Inicio: 11:45

Transcurrido: \_\_\_\_\_

Final: 2:00

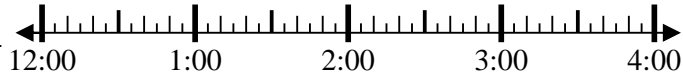


6. \_\_\_\_\_

7) Inicio: 12:20

Transcurrido: \_\_\_\_\_

Final: 2:00

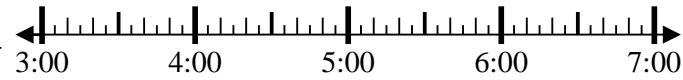


7. \_\_\_\_\_

8) Inicio: 3:35

Transcurrido: \_\_\_\_\_

Final: 5:15

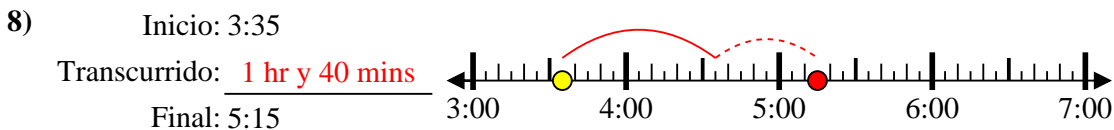
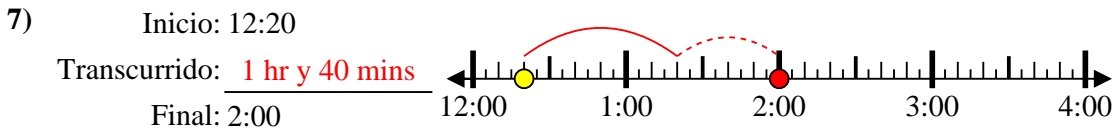
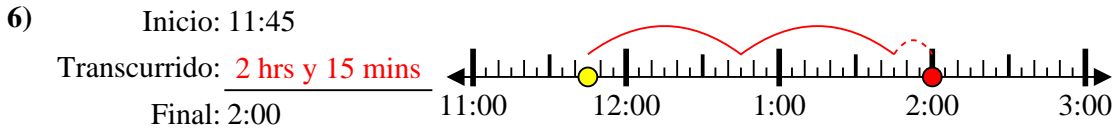
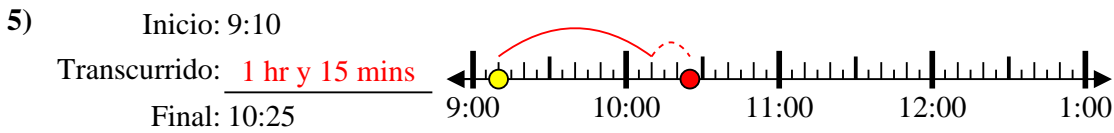
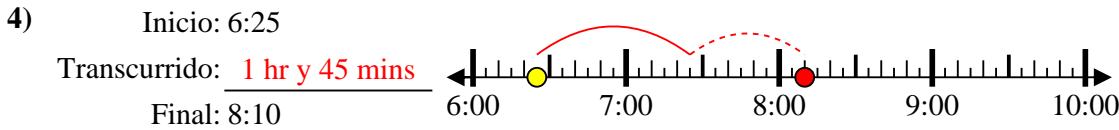
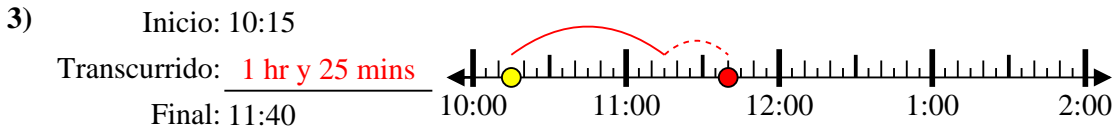
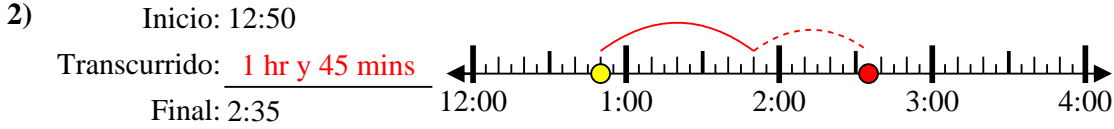
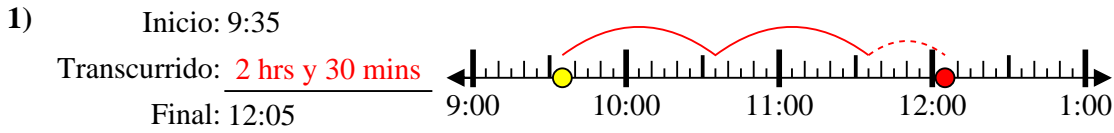


8. \_\_\_\_\_

**Respuestas**



Resuelve cada problema.



**Respuestas**

1. **2 hrs y 30 mins**

2. **1 hr y 45 mins**

3. **1 hr y 25 mins**

4. **1 hr y 45 mins**

5. **1 hr y 15 mins**

6. **2 hrs y 15 mins**

7. **1 hr y 40 mins**

8. **1 hr y 40 mins**