



**Resuelve cada problema.**

1) Inicio: 7:05

Transcurrido: \_\_\_\_\_

Final: 9:25



2) Inicio: 5:25

Transcurrido: \_\_\_\_\_

Final: 7:45



3) Inicio: 4:15

Transcurrido: \_\_\_\_\_

Final: 5:50



4) Inicio: 12:05

Transcurrido: \_\_\_\_\_

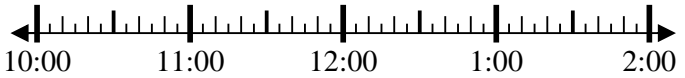
Final: 2:45



5) Inicio: 10:05

Transcurrido: \_\_\_\_\_

Final: 11:50



6) Inicio: 11:45

Transcurrido: \_\_\_\_\_

Final: 2:00



7) Inicio: 5:25

Transcurrido: \_\_\_\_\_

Final: 7:05



8) Inicio: 1:25

Transcurrido: \_\_\_\_\_

Final: 2:40



**Respuestas**

1. \_\_\_\_\_

2. \_\_\_\_\_

3. \_\_\_\_\_

4. \_\_\_\_\_

5. \_\_\_\_\_

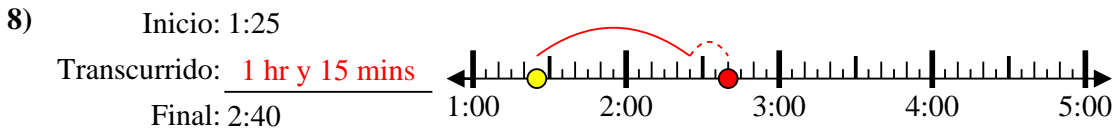
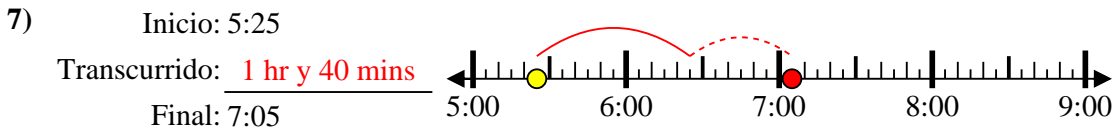
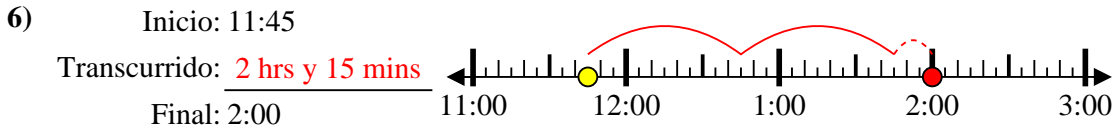
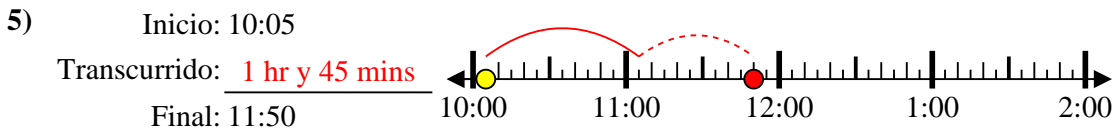
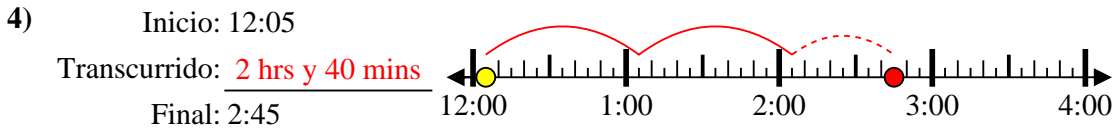
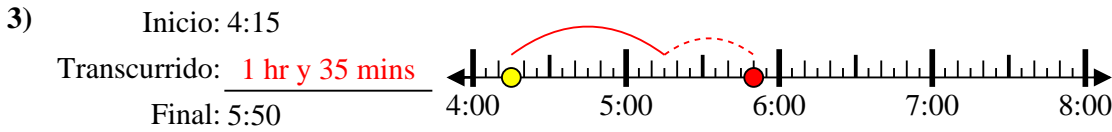
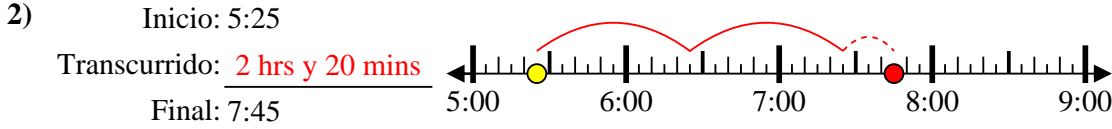
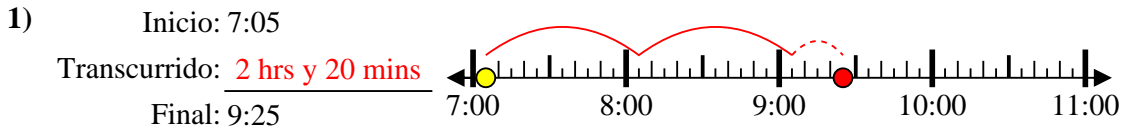
6. \_\_\_\_\_

7. \_\_\_\_\_

8. \_\_\_\_\_



Resuelve cada problema.



**Respuestas**

1. 2 hrs y 20 mins

2. 2 hrs y 20 mins

3. 1 hr y 35 mins

4. 2 hrs y 40 mins

5. 1 hr y 45 mins

6. 2 hrs y 15 mins

7. 1 hr y 40 mins

8. 1 hr y 15 mins