

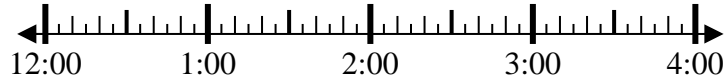


Resuelve cada problema.

1) Inicio: 12:10

Transcurrido: 1 hr y 25 mins

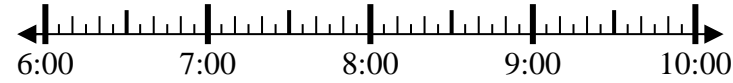
Final: _____



2) Inicio: 6:40

Transcurrido: 2 hrs y 10 mins

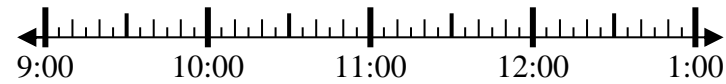
Final: _____



3) Inicio: 9:05

Transcurrido: 2 hrs y 50 mins

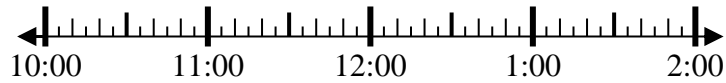
Final: _____



4) Inicio: 10:45

Transcurrido: 2 hrs y 40 mins

Final: _____



5) Inicio: 5:35

Transcurrido: 1 hr y 30 mins

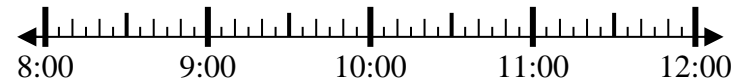
Final: _____



6) Inicio: 8:15

Transcurrido: 2 hrs y 25 mins

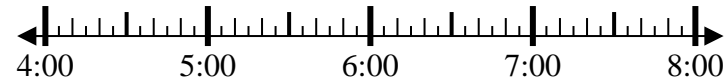
Final: _____



7) Inicio: 4:10

Transcurrido: 2 hrs y 55 mins

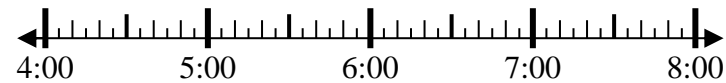
Final: _____



8) Inicio: 4:00

Transcurrido: 2 hrs y 20 mins

Final: _____



Respuestas

1. _____

2. _____

3. _____

4. _____

5. _____

6. _____

7. _____

8. _____



Resuelve cada problema.

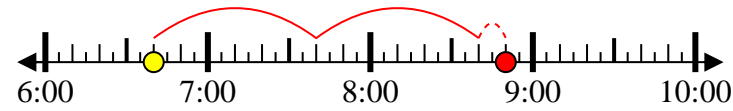
1) Inicio: 12:10

Transcurrido: 1 hr y 25 mins

Final: 1:35

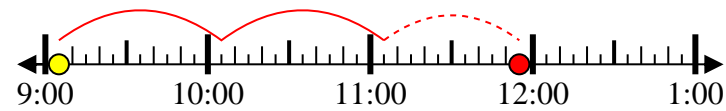
2) Inicio: 6:40

Transcurrido: 2 hrs y 10 mins

Final: 8:50

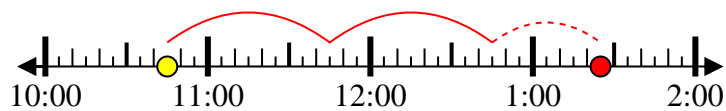
3) Inicio: 9:05

Transcurrido: 2 hrs y 50 mins

Final: 11:55

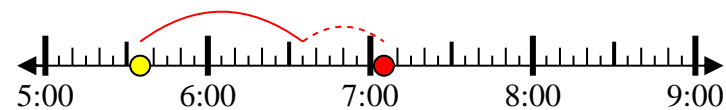
4) Inicio: 10:45

Transcurrido: 2 hrs y 40 mins

Final: 1:25

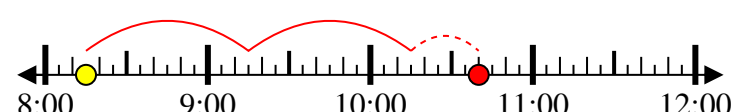
5) Inicio: 5:35

Transcurrido: 1 hr y 30 mins

Final: 7:05

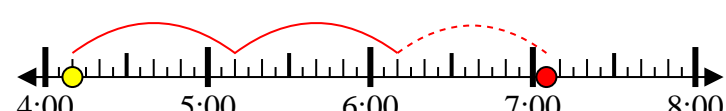
6) Inicio: 8:15

Transcurrido: 2 hrs y 25 mins

Final: 10:40

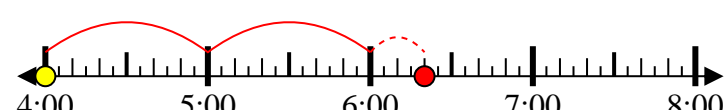
7) Inicio: 4:10

Transcurrido: 2 hrs y 55 mins

Final: 7:05

8) Inicio: 4:00

Transcurrido: 2 hrs y 20 mins

Final: 6:20**Respuestas**1. 1:352. 8:503. 11:554. 1:255. 7:056. 10:407. 7:058. 6:20