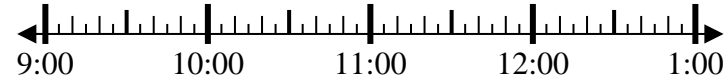


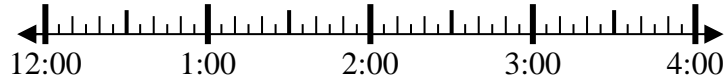


Resuelve cada problema.

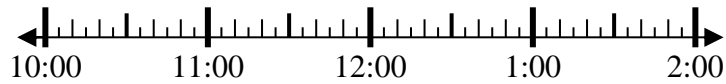
1) Inicio: 9:35
 Transcurrido: 2 hrs y 30 mins
 Final: _____



2) Inicio: 12:50
 Transcurrido: 1 hr y 45 mins
 Final: _____



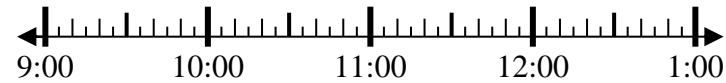
3) Inicio: 10:15
 Transcurrido: 1 hr y 25 mins
 Final: _____



4) Inicio: 6:25
 Transcurrido: 1 hr y 45 mins
 Final: _____



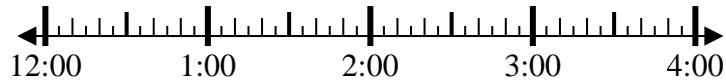
5) Inicio: 9:10
 Transcurrido: 1 hr y 15 mins
 Final: _____



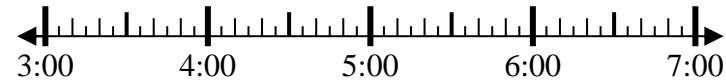
6) Inicio: 11:45
 Transcurrido: 2 hrs y 15 mins
 Final: _____



7) Inicio: 12:20
 Transcurrido: 1 hr y 40 mins
 Final: _____



8) Inicio: 3:35
 Transcurrido: 1 hr y 40 mins
 Final: _____

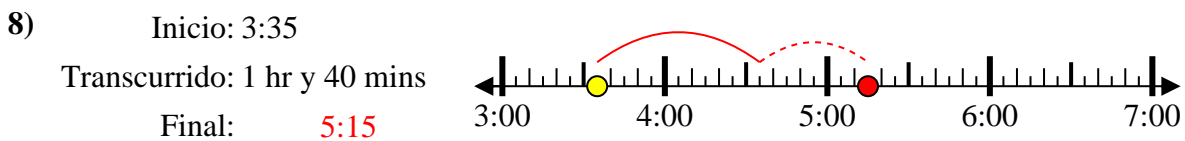
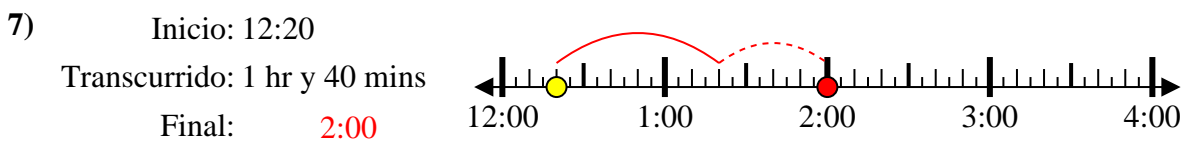
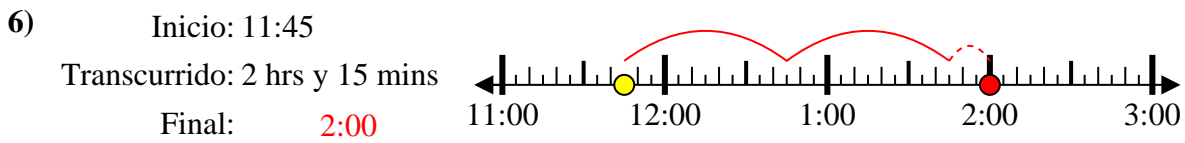
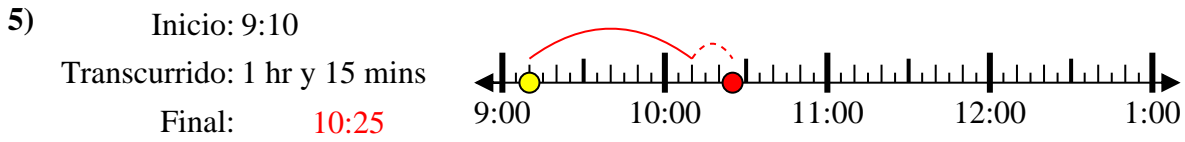
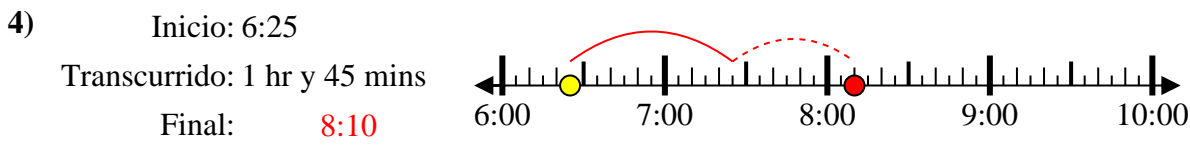
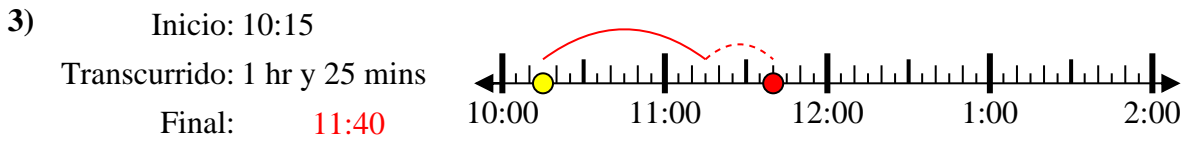
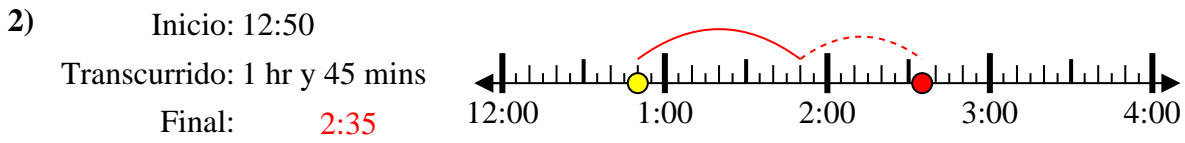
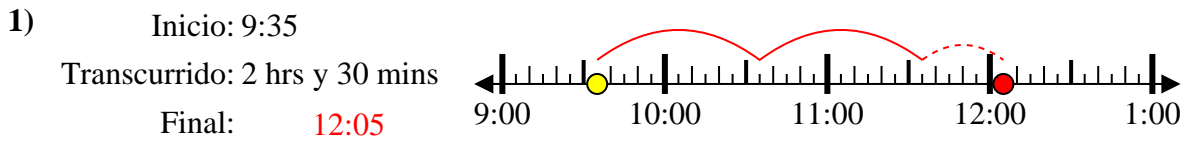


Respuestas

1. _____
2. _____
3. _____
4. _____
5. _____
6. _____
7. _____
8. _____



Resuelve cada problema.

**Respuestas**1. 12:052. 2:353. 11:404. 8:105. 10:256. 2:007. 2:008. 5:15