



**Resuelve cada problema.**

**Respuestas**

1) Inicio: \_\_\_\_\_  
 Transcurrido: 2 hrs y 20 mins  
 Final: 9:25

1. \_\_\_\_\_

2) Inicio: \_\_\_\_\_  
 Transcurrido: 2 hrs y 20 mins  
 Final: 7:45

2. \_\_\_\_\_

3) Inicio: \_\_\_\_\_  
 Transcurrido: 1 hr y 35 mins  
 Final: 5:50

3. \_\_\_\_\_

4) Inicio: \_\_\_\_\_  
 Transcurrido: 2 hrs y 40 mins  
 Final: 2:45

4. \_\_\_\_\_

5) Inicio: \_\_\_\_\_  
 Transcurrido: 1 hr y 45 mins  
 Final: 11:50

5. \_\_\_\_\_

6) Inicio: \_\_\_\_\_  
 Transcurrido: 2 hrs y 15 mins  
 Final: 2:00

6. \_\_\_\_\_

7) Inicio: \_\_\_\_\_  
 Transcurrido: 1 hr y 40 mins  
 Final: 7:05

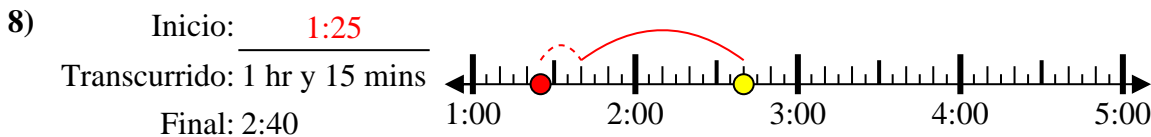
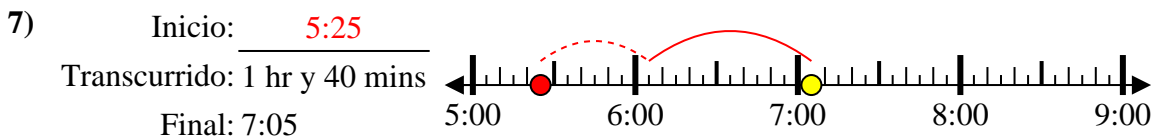
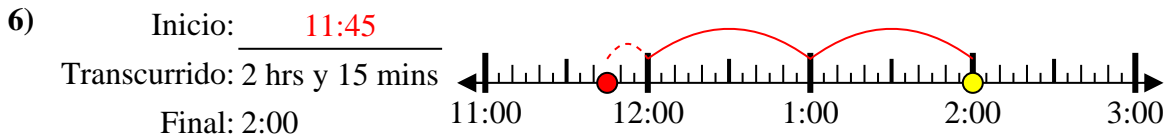
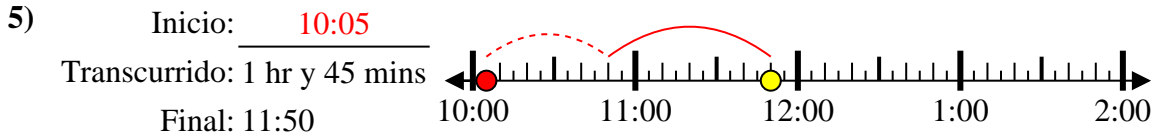
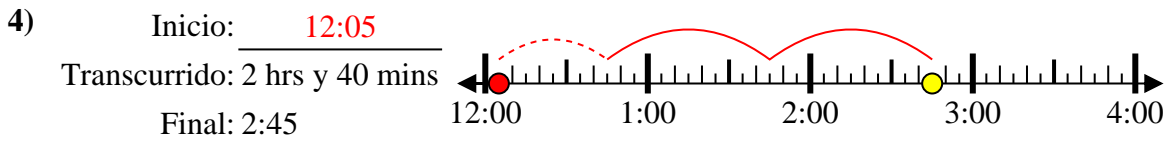
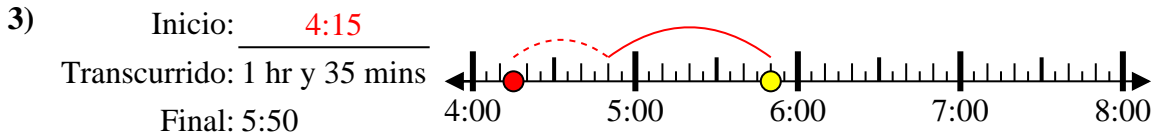
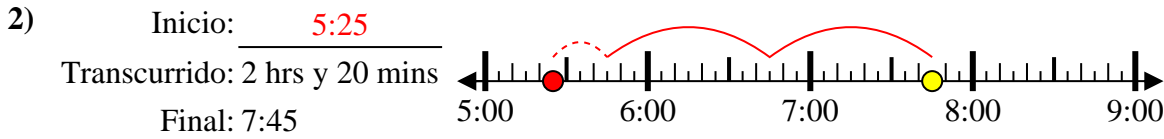
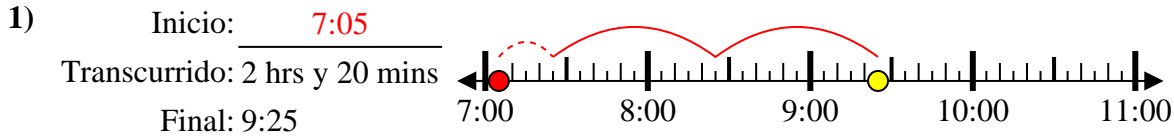
7. \_\_\_\_\_

8) Inicio: \_\_\_\_\_  
 Transcurrido: 1 hr y 15 mins  
 Final: 2:40

8. \_\_\_\_\_



Resuelve cada problema.



**Respuestas**

1. 7:05

2. 5:25

3. 4:15

4. 12:05

5. 10:05

6. 11:45

7. 5:25

8. 1:25