



**Resuelve cada problema.**

**Respuestas**

1) Inicio: \_\_\_\_\_  
 Transcurrido: 1 hr y 35 mins  
 Final: 1:50

1. \_\_\_\_\_

2) Inicio: \_\_\_\_\_  
 Transcurrido: 1 hr y 25 mins  
 Final: 12:55

2. \_\_\_\_\_

3) Inicio: \_\_\_\_\_  
 Transcurrido: 1 hr y 35 mins  
 Final: 6:45

3. \_\_\_\_\_

4) Inicio: \_\_\_\_\_  
 Transcurrido: 1 hr y 10 mins  
 Final: 12:10

4. \_\_\_\_\_

5) Inicio: \_\_\_\_\_  
 Transcurrido: 1 hr y 10 mins  
 Final: 1:40

5. \_\_\_\_\_

6) Inicio: \_\_\_\_\_  
 Transcurrido: 1 hr y 25 mins  
 Final: 2:05

6. \_\_\_\_\_

7) Inicio: \_\_\_\_\_  
 Transcurrido: 1 hr y 50 mins  
 Final: 11:30

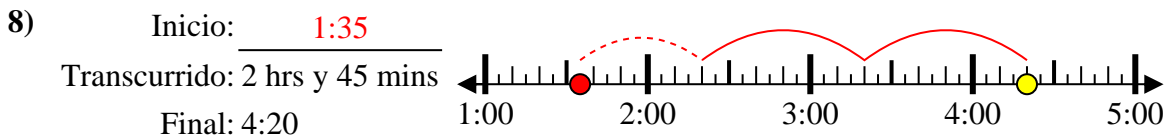
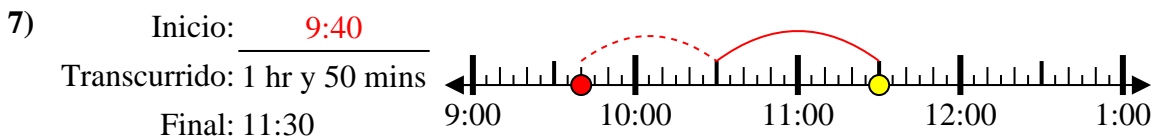
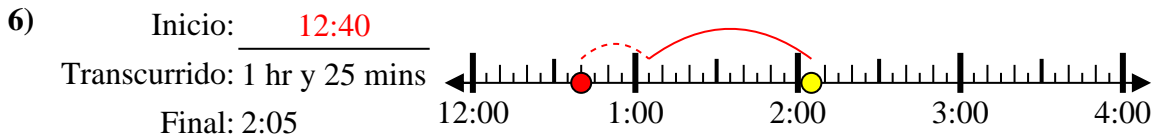
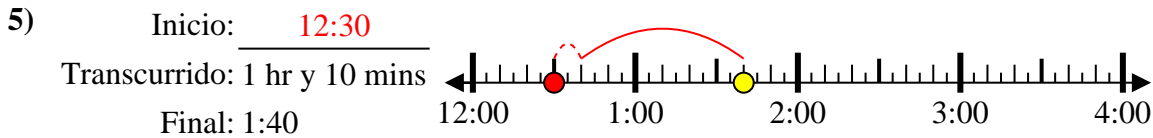
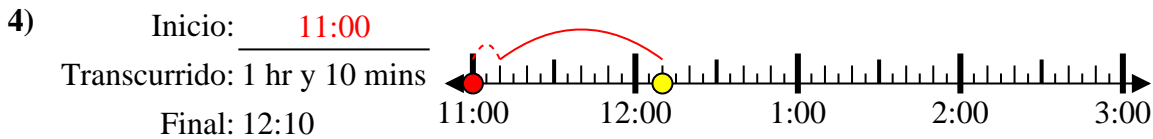
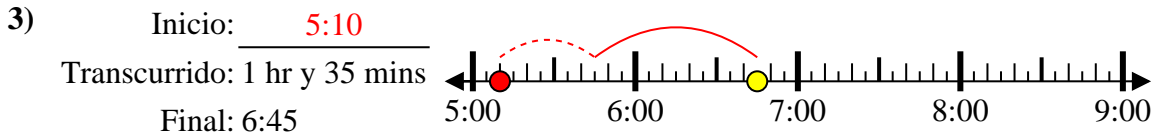
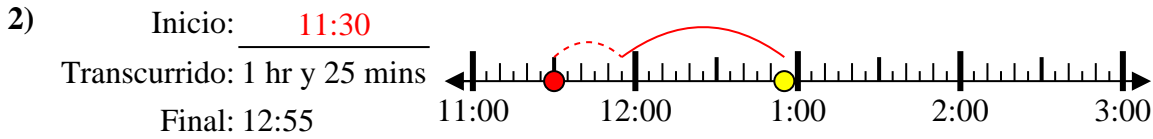
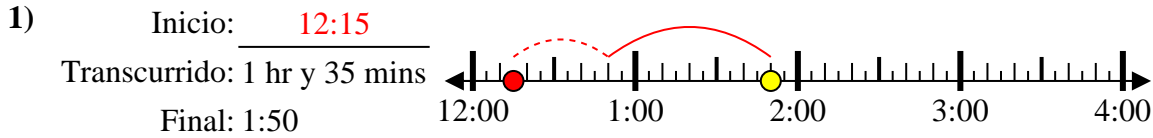
7. \_\_\_\_\_

8) Inicio: \_\_\_\_\_  
 Transcurrido: 2 hrs y 45 mins  
 Final: 4:20

8. \_\_\_\_\_



Resuelve cada problema.



**Respuestas**

1. 12:15

2. 11:30

3. 5:10

4. 11:00

5. 12:30

6. 12:40

7. 9:40

8. 1:35