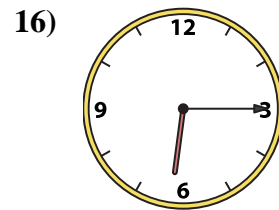
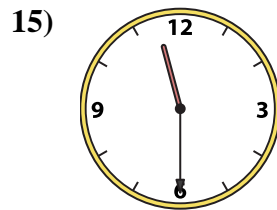
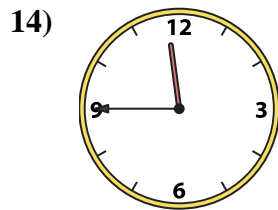
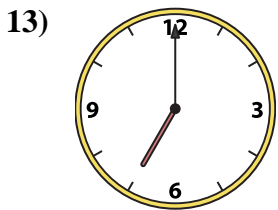
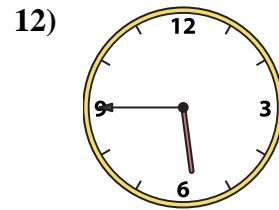
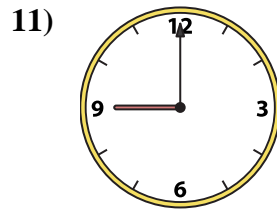
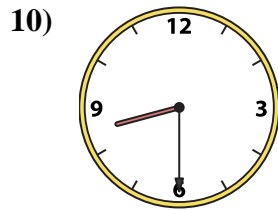
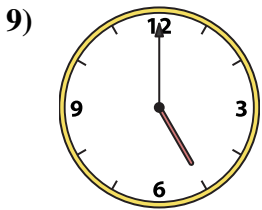
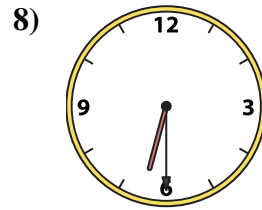
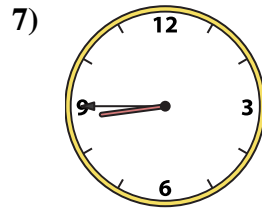
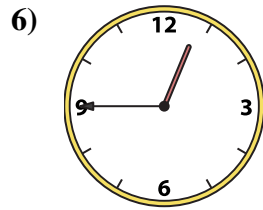
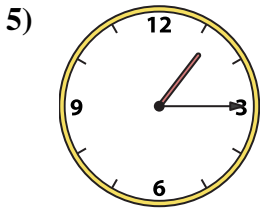
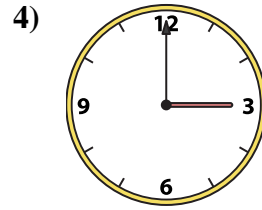
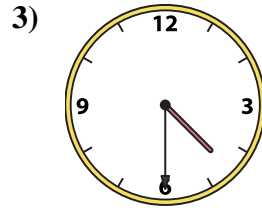
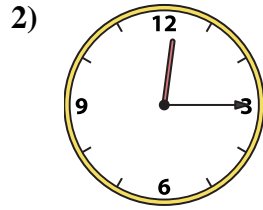
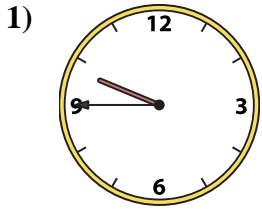




Emparejar el reloj analógico con el reloj digital correspondiente.

Respuestas



A.

B.

C.

D.

E.

F.

G.

H.

I.

J.

K.

L.

M.

N.

O.

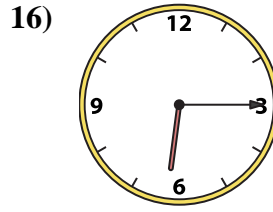
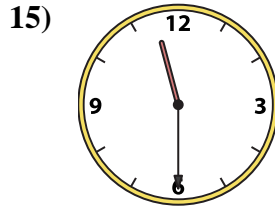
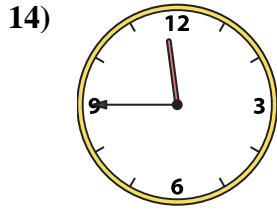
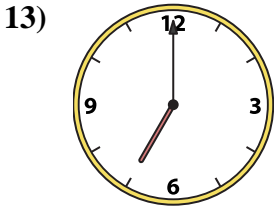
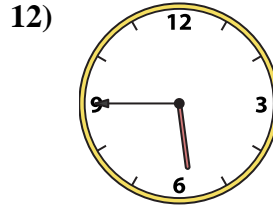
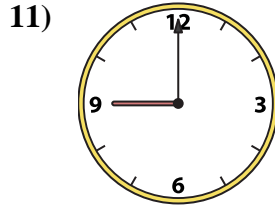
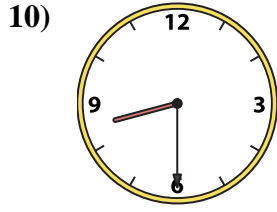
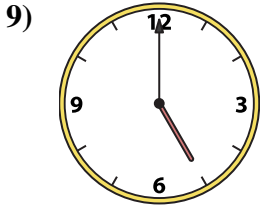
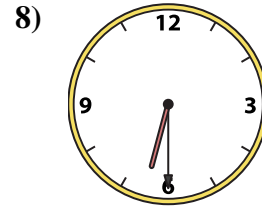
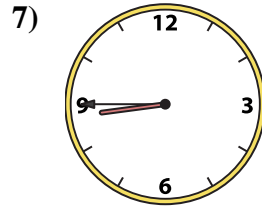
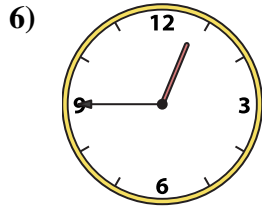

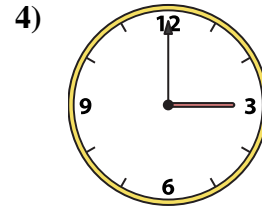
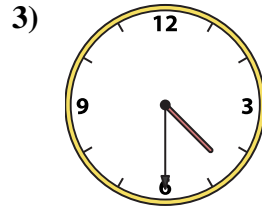
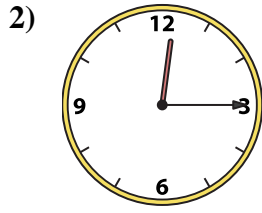
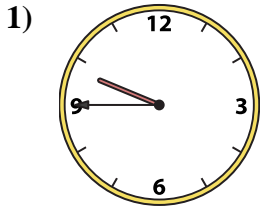
P.

- 1. _____
- 2. _____
- 3. _____
- 4. _____
- 5. _____
- 6. _____
- 7. _____
- 8. _____
- 9. _____
- 10. _____
- 11. _____
- 12. _____
- 13. _____
- 14. _____
- 15. _____
- 16. _____



Emparejar el reloj analógico con el reloj digital correspondiente.

Respuestas



A. 9:45

B. 11:30

C. 5:45

D. 5:00

E. 4:30

F. 7:00

G. 11:45

H. 3:00

I. 8:30

J. 1:15

K. 12:15

L. 8:45

M. 6:15

N. 6:30

O. 12:45

P. 9:00

1. **A**

2. **K**

3. **E**

4. **H**

5. **J**

6. **O**

7. **L**

8. **N**

9. **D**

10. **I**

11. **P**

12. **C**

13. **F**

14. **G**

15. **B**

16. **M**