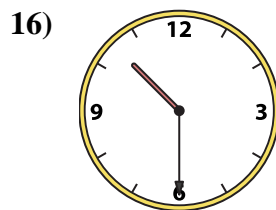
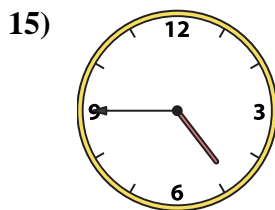
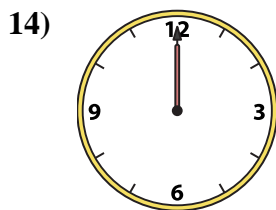

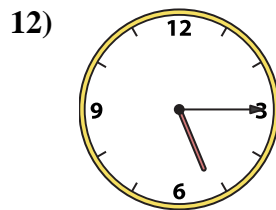
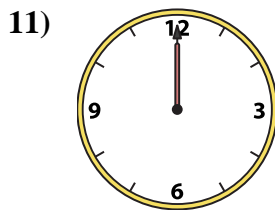
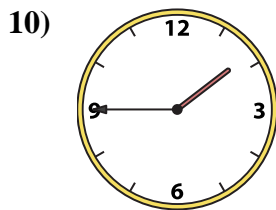
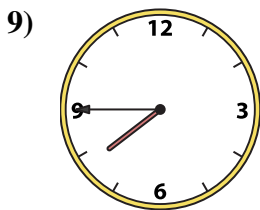
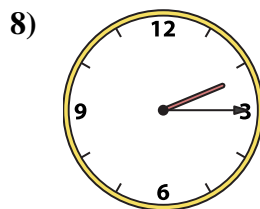
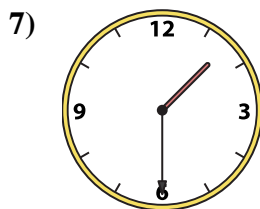
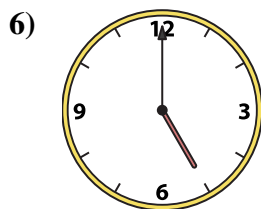
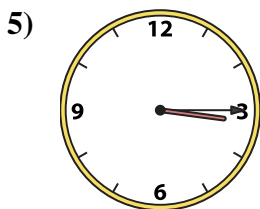
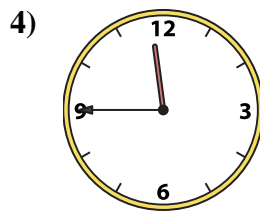
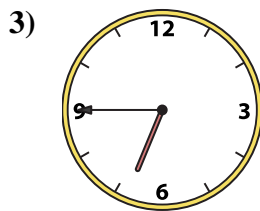
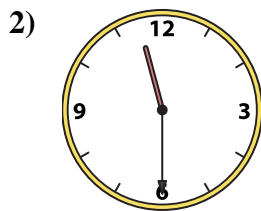
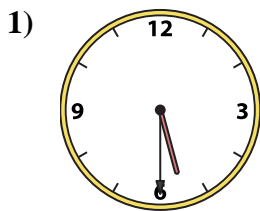




Emparejar el reloj analógico con el reloj digital correspondiente.

Respuestas



A. 2:00

B. 4:45

C. 10:30

D. 5:30

E. 7:45

F. 12:00

G. 6:45

H. 11:30

I. 3:15

J. 11:45

K. 5:15

L. 2:15

M. 1:45

N. 1:30

O. 12:00

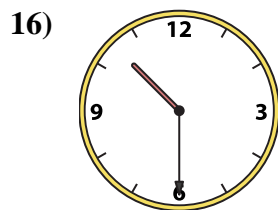
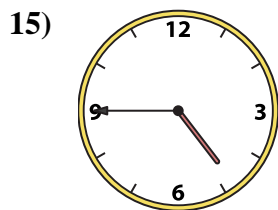
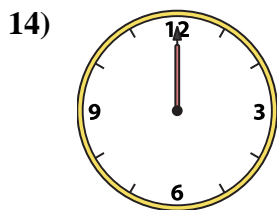
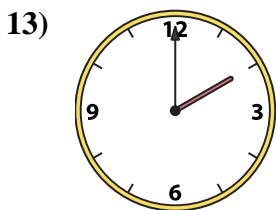
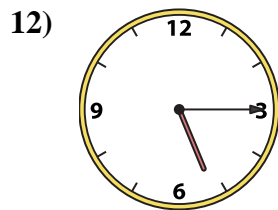
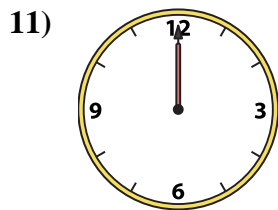
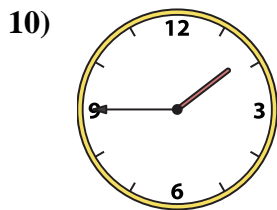
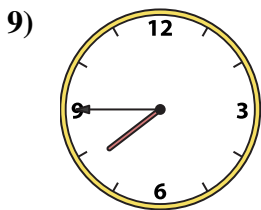
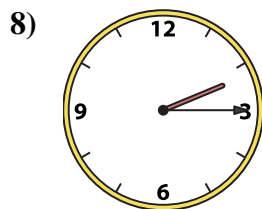
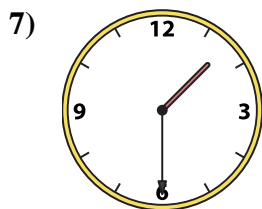
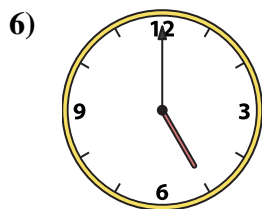
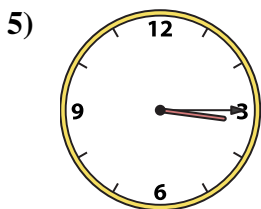
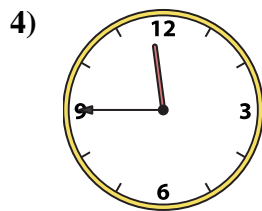
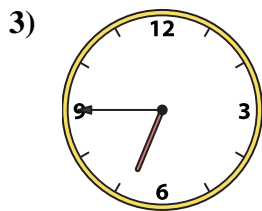
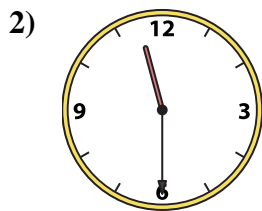
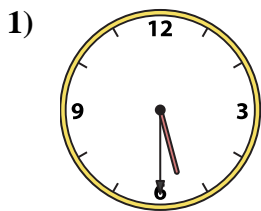
P. 5:00

- 1. _____
- 2. _____
- 3. _____
- 4. _____
- 5. _____
- 6. _____
- 7. _____
- 8. _____
- 9. _____
- 10. _____
- 11. _____
- 12. _____
- 13. _____
- 14. _____
- 15. _____
- 16. _____



Emparejar el reloj analógico con el reloj digital correspondiente.

Respuestas



A. 2:00

B. 4:45

C. 10:30

D. 5:30

E. 7:45

F. 12:00

G. 6:45

H. 11:30

I. 3:15

J. 11:45

K. 5:15

L. 2:15

M. 1:45

N. 1:30

O. 12:00

P. 5:00

- 1. **D**
- 2. **H**
- 3. **G**
- 4. **J**
- 5. **I**
- 6. **P**
- 7. **N**
- 8. **L**
- 9. **E**
- 10. **M**
- 11. **O**
- 12. **K**
- 13. **A**
- 14. **F**
- 15. **B**
- 16. **C**