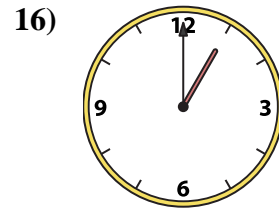
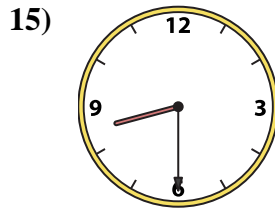
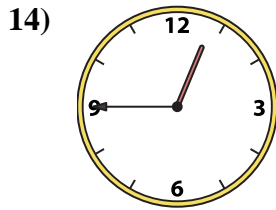
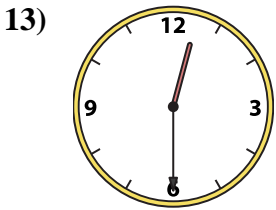
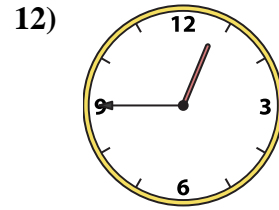
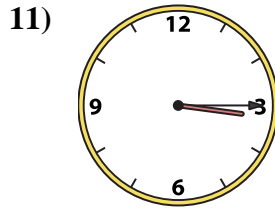
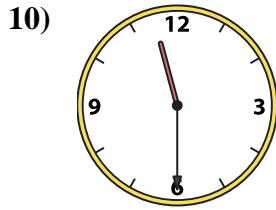
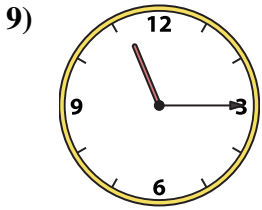
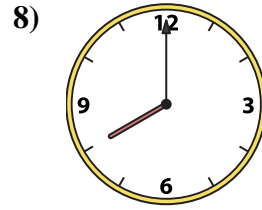
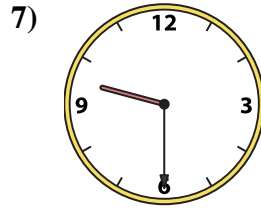
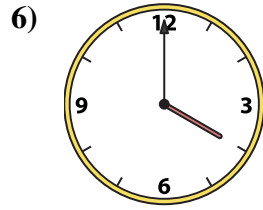
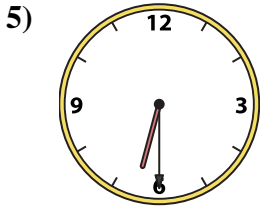
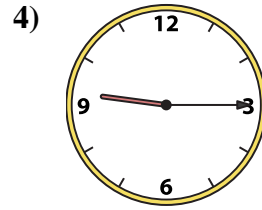
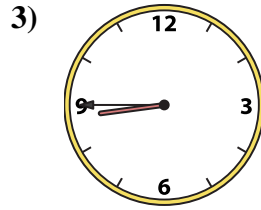
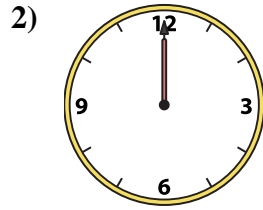
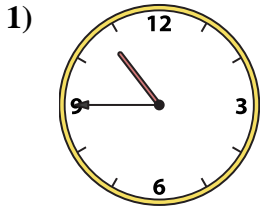




Emparejar el reloj analógico con el reloj digital correspondiente.

Respuestas



1. _____
2. _____
3. _____
4. _____
5. _____
6. _____
7. _____
8. _____
9. _____
10. _____
11. _____
12. _____
13. _____
14. _____
15. _____
16. _____

A. 3:15

B. 12:45

C. 9:15

D. 1:00

E. 8:45

F. 12:00

G. 4:00

H. 12:30

I. 6:30

J. 10:45

K. 12:45

L. 8:00

M. 8:30

N. 9:30

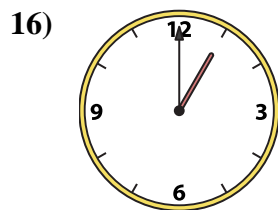
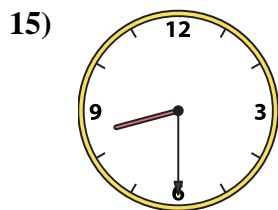
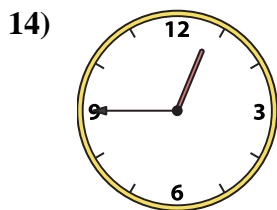
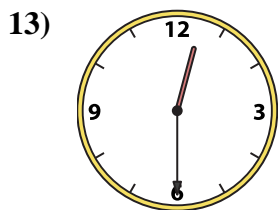
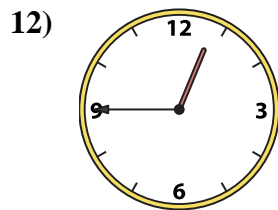
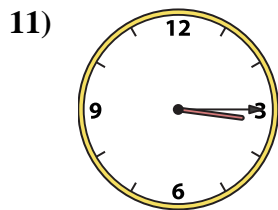
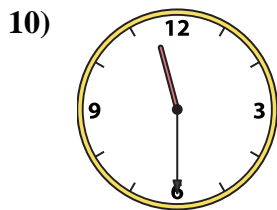
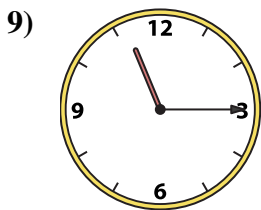
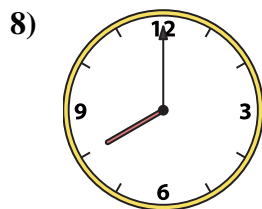
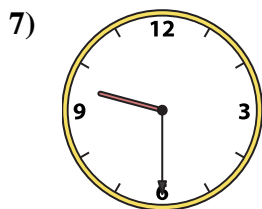

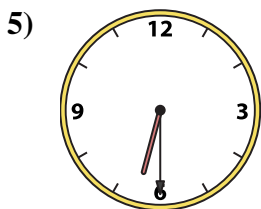
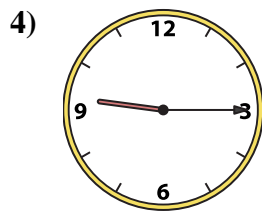
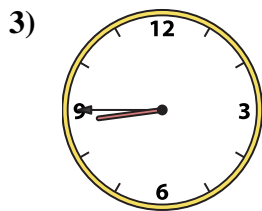
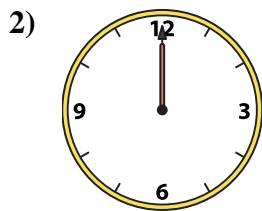
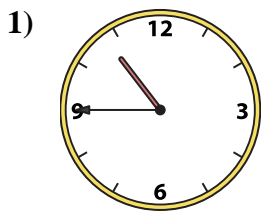
O. 11:30

P. 11:15



Emparejar el reloj analógico con el reloj digital correspondiente.

Respuestas



- 1. **J**
- 2. **F**
- 3. **E**
- 4. **C**
- 5. **I**
- 6. **G**
- 7. **N**
- 8. **L**
- 9. **P**
- 10. **O**
- 11. **A**
- 12. **B**
- 13. **H**
- 14. **K**
- 15. **M**
- 16. **D**

- A. **3:15**
- B. **12:45**
- C. **9:15**
- D. **1:00**
- E. **8:45**
- F. **12:00**
- G. **4:00**
- H. **12:30**
- I. **6:30**
- J. **10:45**
- K. **12:45**
- L. **8:00**
- M. **8:30**
- N. **9:30**
- O. **11:30**
- P. **11:15**