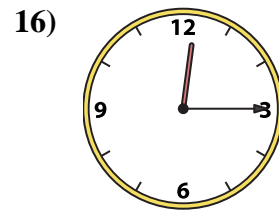
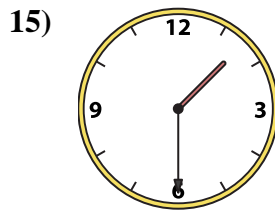
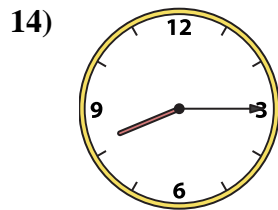
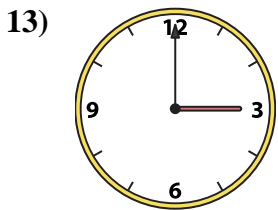
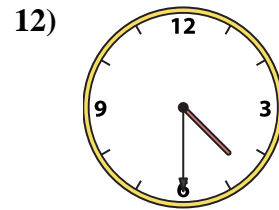
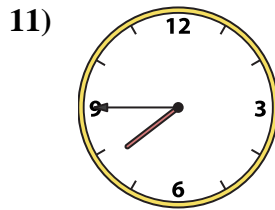
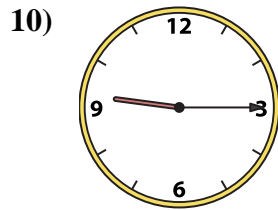
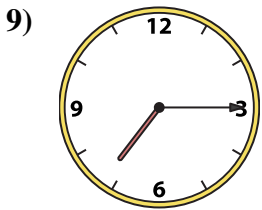
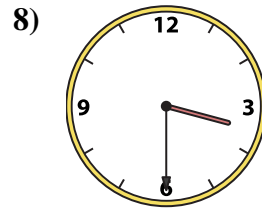
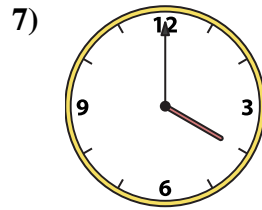
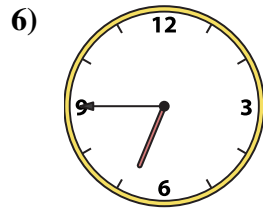
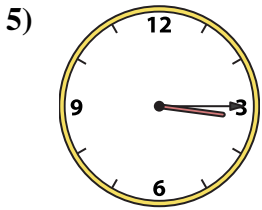
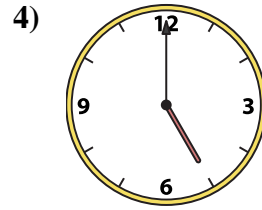
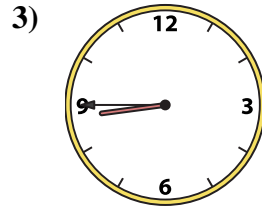
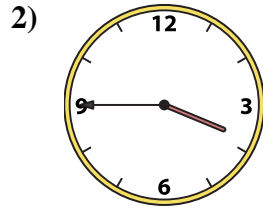
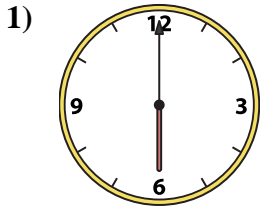




Emparejar el reloj analógico con el reloj digital correspondiente.

Respuestas



A. 5:00

B. 8:45

C. 3:15

D. 3:30

E. 3:00

F. 7:45

G. 12:15

H. 1:30

I. 3:45

J. 6:45

K. 4:00

L. 7:15

M. 8:15

N. 9:15

O. 6:00

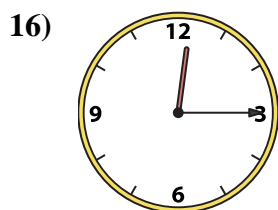
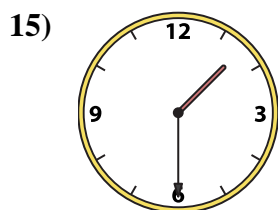
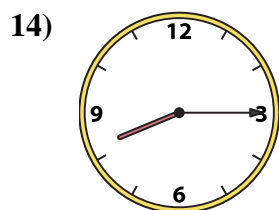
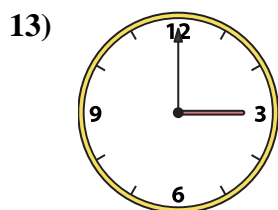
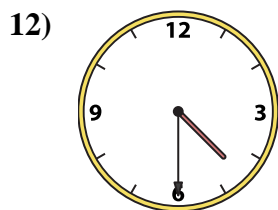
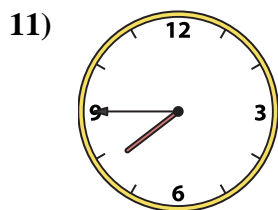
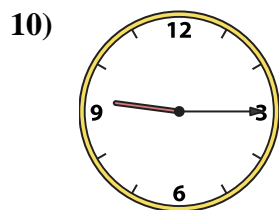
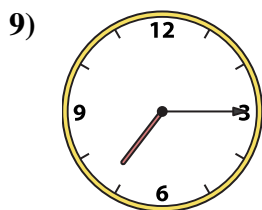
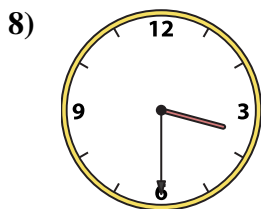

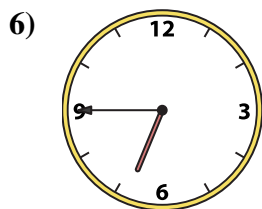
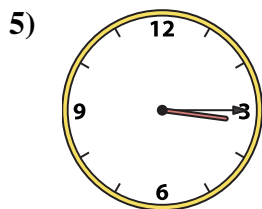
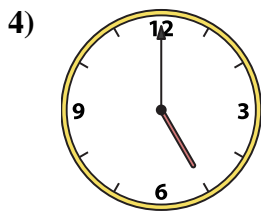
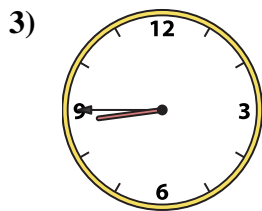
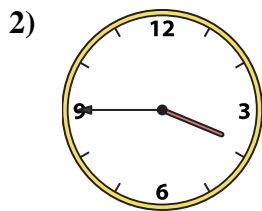
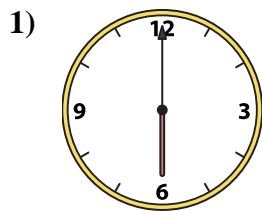
P. 4:30

- 1. _____
- 2. _____
- 3. _____
- 4. _____
- 5. _____
- 6. _____
- 7. _____
- 8. _____
- 9. _____
- 10. _____
- 11. _____
- 12. _____
- 13. _____
- 14. _____
- 15. _____
- 16. _____



Emparejar el reloj analógico con el reloj digital correspondiente.

Respuestas



1. **O**

2. **I**

3. **B**

4. **A**

5. **C**

6. **J**

7. **K**

8. **D**

9. **L**

10. **N**

11. **F**

12. **P**

13. **E**

14. **M**

15. **H**

16. **G**

A. **5:00**

B. **8:45**

C. **3:15**

D. **3:30**

E. **3:00**

F. **7:45**

G. **12:15**

H. **1:30**

I. **3:45**

J. **6:45**

K. **4:00**

L. **7:15**

M. **8:15**

N. **9:15**

O. **6:00**

P. **4:30**