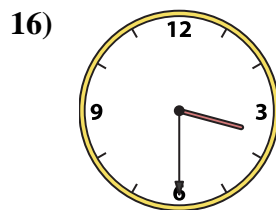
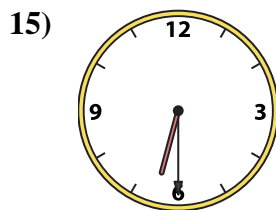
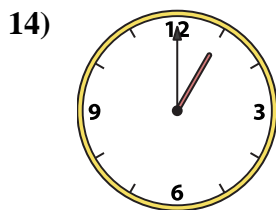
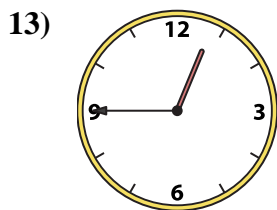
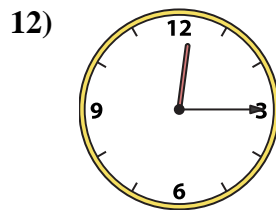
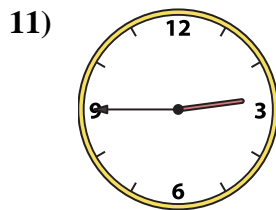
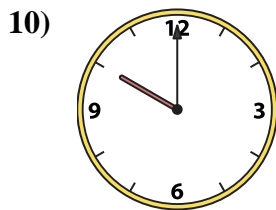
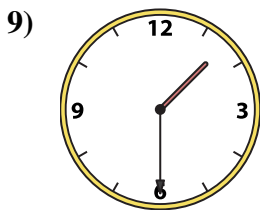
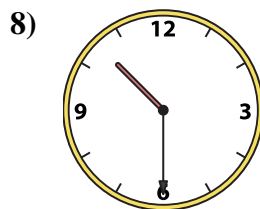
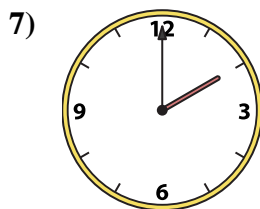
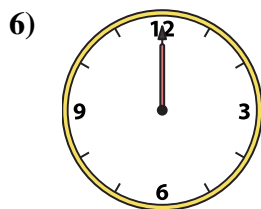
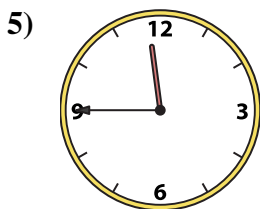
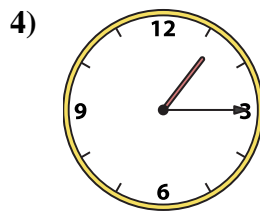
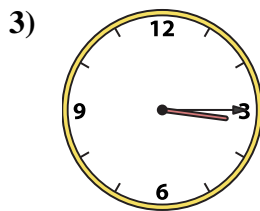
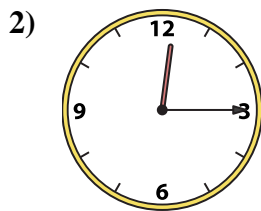
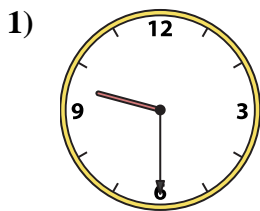




Emparejar el reloj analógico con el reloj digital correspondiente.

Respuestas



1. _____

2. _____

3. _____

4. _____

5. _____

6. _____

7. _____

8. _____

9. _____

10. _____

11. _____

12. _____

13. _____

14. _____

15. _____

16. _____

A. 10:00

B. 6:30

C. 3:30

D. 2:00

E. 1:30

F. 12:15

G. 12:45

H. 9:30

I. 1:15

J. 10:30

K. 12:15

L. 12:00

M. 3:15

N. 2:45

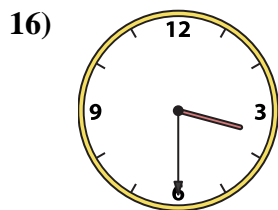
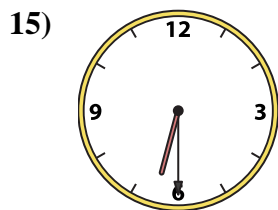
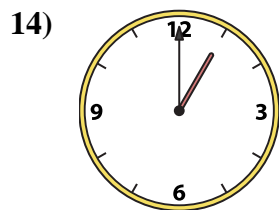
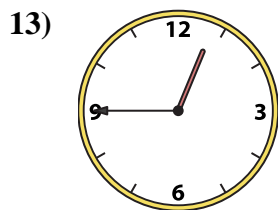
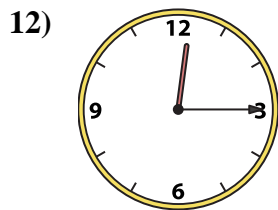
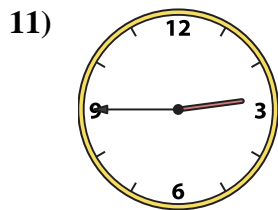
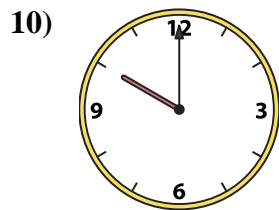
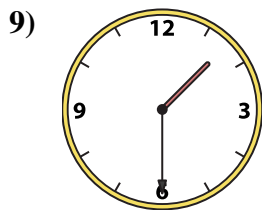
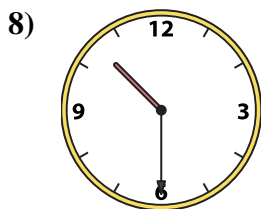

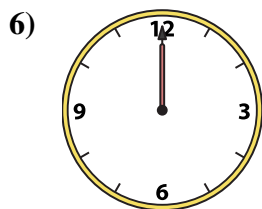

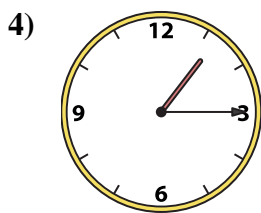
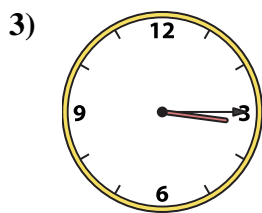
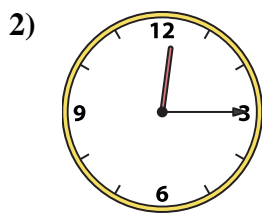
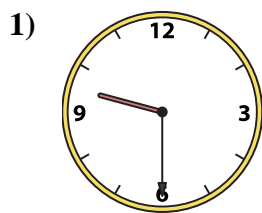
O. 1:00

P. 11:45



Emparejar el reloj analógico con el reloj digital correspondiente.

Respuestas



A. 10:00

B. 6:30

C. 3:30

D. 2:00

E. 1:30

F. 12:15

G. 12:45

H. 9:30

I. 1:15

J. 10:30

K. 12:15

L. 12:00

M. 3:15

N. 2:45

O. 1:00

P. 11:45

- 1. **H**
- 2. **K**
- 3. **M**
- 4. **I**
- 5. **P**
- 6. **L**
- 7. **D**
- 8. **J**
- 9. **E**
- 10. **A**
- 11. **N**
- 12. **F**
- 13. **G**
- 14. **O**
- 15. **B**
- 16. **C**